

Model Test Paper 17  
General Study Paper II

---

DO NOT OPEN THIS BOOKLET UNTIL YOU ARE TOLD TO DO SO

---

TEST BOOKLET  
GENERAL STUDIES  
Paper-II

A

Time Allowed : Two Hours

Maximum Marks : 200

---

INSTRUCTIONS

1. IMMEDIATELY AFTER THE COMMENCEMENT OF THE EXAMINATION YOU SHOULD CHECK THAT THE TEST BOOKLET *DOES NOT* HAVE ANY UNPRINTED OR TORN OR MISSING PAGES OR ITEMS, ETC, IF SO, GET IT REPLACED BY A COMPLETE TEST BOOKLET.
2. **Please note that it is the candidate's responsibility to encode and fill in the Roll Number and Test Booklet Series A, B, C or D carefully and without any omission or discrepancy at the appropriate place in the OMR Answer Sheet. Any omission/discrepancy will render the Answer Sheet liable for rejection.**
3. You have to enter your Roll Number on the Test Booklet in the Box provided alongside . *DO NOT* write *anything else* on the Test Booklet.
4. This Test Booklet contains **80** items (questions). Each item comprises four responses (answers). You will select the response which you want to mark on the Answer Sheet. In case you feel that there is more than one correct response, mark the response which you consider the best. In any case, choose *ONLY ONE* response for each item.
5. You have to mark all your responses *ONLY* on the separate Answer Sheet provided.
6. **All** items carry equal marks.
7. Before you proceed to mark in the Answer Sheet the response to various items in the Test Booklet, you have to fill in some particulars in the Answer Sheet as per instructions sent to you with your Admission Certificate.
8. After you have completed filling in all your responses on the Answer Sheet and the examination has concluded, you should hand over to the invigilator only the *Answer Sheet*. You are permitted to take away with you the Test Booklet.
9. Sheets for rough work are appended in the Test Booklet at the end.
10. **Penalty for wrong Answers :**  
THERE WILL BE PENALTY FOR WRONG ANSWERS MARKED BY A CANDIDATE IN THE OBJECTIVE TYPE QUESTION PAPERS.  
(i) There are four alternatives for the answer to every question. For each question for which a wrong answer has been given by the candidate, **one-third** of the marks assigned to that question will be deducted as penalty.  
(ii) If a candidate gives more than one answer, it will be treated as a **wrong answer** even if one of the given answers happens to be correct and there will be same penalty as above to that question.  
(iii) If a question is left blank, i.e., no answer is given by the candidate, there will be **no penalty** for that question.

---

DO NOT OPEN THIS BOOKLET UNTIL YOU ARE TOLD TO DO SO

---

**Model Test Paper 17**  
**General Study Paper II**

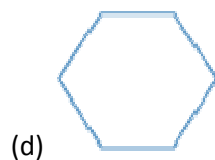
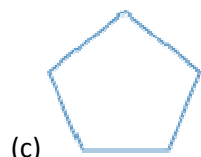
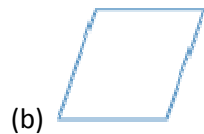
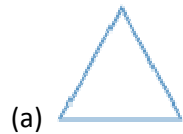
<p>A major consequence of fast-paced motorisation and expansion of roads and highways in India is the mounting rate of fatalities and injuries from traffic accidents. More than 110,000 people are killed on the roads each year, with the death toll rising by eight per cent annually; the estimate for serious injuries is 1.6 million. India's roads are now rated the worst in the world. Viewed against this background, the road safety initiative launched by the central government and the World Bank to cover 3,000 km of high-risk national and State highways in Assam, Gujarat, and Karnataka is an incremental step to improve the situation. Under the plan, affordable improvements based on the latest technologies will be put in place to reduce crashes and fatalities. The project will draw upon the experience of the International Road Assessment Programme supported by the World Bank in several countries. The investments can improve the safety record of some roads. What is important, however, is for the government to demonstrate the political will to move beyond limited schemes in a few States. The continuing carnage demands a policy of zero tolerance to crashes covering the entire network of 65,000-plus km of national highways and the quarter million km of urban roads. Almost three years ago, the Sundar Committee recommended a national road safety policy but precious little has been done by way of implementation.</p> <p>1. In the beginning of the paragraph the author wants to convey that</p> <p>(a) India is experiencing a fast-paced motorisation and expansion of roads and highways</p> <p>(b) The death of 110,000 people on the roads each year</p> <p>(c) The estimated serious injuries of 1.6 million</p> <p>(d) Poor quality of roads</p>	<p>2. What does author means by saying that "India's roads are now rated the worst in the world"</p> <p>(a) The roads in India are actually the worst in the world</p> <p>(b) India is one of the worst country in the world</p> <p>(c) There is an urgent need to improve the conditions of road in India</p> <p>(d) So many deaths and injury on roads justify India to be the worst country</p> <p>3. The road safety initiative has been launched by the central government to</p> <p>(a) improve the conditions of the road</p> <p>(b) please world bank</p> <p>(c) improve the safety record of some roads</p> <p>(d) prevent crashes and fatalities on roads</p> <p>4. What is special about the the road safety initiative</p> <p>(a) It is being assisted by the World Bank</p> <p>(b) It will cover 3,000 km of high-risk national and State highways in Assam, Gujarat, and Karnataka</p> <p>(c) It will reduce crashes and fatalities on some roads</p> <p>(d) It will draw upon the experience of the International Road Assessment Programme supported by the World Bank in several countries</p>
--	---

**Model Test Paper 17**  
**General Study Paper II**

<p>5. Which of the following is appreciated by the author regarding the road safety initiative</p> <p>(a) It is covering the high risk national and state highways</p> <p>(b) It can improve the safety record of some roads</p> <p>(c) It draws upon the experience of the International Road Assessment Programme</p> <p>(d) The role of the world bank in the road safety initiative</p> <p>Sachin Tendulkar said it best when asked what his 50th Test century meant to him. He struggled at first to articulate himself but eventually conveyed the sense that it was just another number — a satisfying number no doubt, but just another. As he has said time and again, records matter little to him; what has driven him to play for 21 years is an unaffected love for the game, which hasn't dimmed since he knew it first as a little boy. Yet it's through his numbers that we can better value his genius. It's these records — his ODI double-hundred earlier this year, for instance — that help nuance the understanding of greatness. So while a 50th hundred is no more significant than a 51st or a 49th, the roundness of the number presents the opportunity to stand back and appreciate what the achievement involves. Longevity is the litmus test of greatness — over a long career, even more so in the case of Tendulkar's which has spanned cricket eras, no facet remains untested. Consider that he started against Imran Khan, Wasim Akram, and Waqar Younis — three of the greatest fast-bowlers of all time — and made his 50th hundred against Dale Steyn, who will soon have a similar standing, and the scale of the feat becomes apparent.</p> <p>6. Which of the following is the best thing Sachin said when asked what his 50th Test century meant to him</p>	<p>(a) A significant achievement</p> <p>(b) A new land mark in his cricket career</p> <p>(c) Just another achievement</p> <p>(d) A satisfying another achievement</p> <p>7. Which of the following is most important for Schin</p> <p>(a) 50th Test century</p> <p>(b) ODI double-hundred</p> <p>(c) Both</p> <p>(d) Love for cricket</p> <p>8. Why the author is emphasising on 50th Test century</p> <p>(a) It is a great record</p> <p>(b) Records do not matter for Sachin</p> <p>(c) It is a number by which the author wants to appreciate Schin's achievement</p> <p>(d) 50 is the standard number for judging any record</p> <p>9. According to the author which of the following is special about Sachin</p> <p>(a) His 21 year cricket career</p> <p>(b) Ability to face fast bowler like Imran Khan, Wasim Akram, and Waqar Younis</p> <p>(c) His 50th Test century against Dale Steyn</p> <p>(d) Successfully facing all challenges in a long cricket career</p>
--	--

**Model Test Paper 17**  
**General Study Paper II**

10. Which of the polygons is not regular?



11. Find a rule for the toothpick sequence



- (a) number of toothpicks =  $4 \times \text{term number} + 2$
- (b) number of toothpicks =  $6 \times \text{term number}$
- (c) number of toothpicks =  $\text{term number} + 4$
- (d) number of toothpicks =  $4 \times \text{term number} - 4$

12. Find a rule for the toothpick sequence



- (a) number of toothpicks =  $\text{term number} - 1$
- (b) number of toothpicks =  $\text{term number}$
- (c) number of toothpicks =  $1 + \text{term number}$
- (d) number of toothpicks =  $2 \times \text{term number} - 1$

13.  $72 - 9 \div 3 \cdot 2 + 2 =$

- (a) 21
- (b) 23
- (c) 44
- (d) 68

14. In scientific notation,  $3.0 \times 10^{-5} + 0.0000022 =$

- (a)  $3.5 \times 10^{-5}$
- (b)  $3.22 \times 10^{-5}$
- (c)  $5.2 \times 10^{-6}$
- (d)  $3.5 \times 10^{-6}$

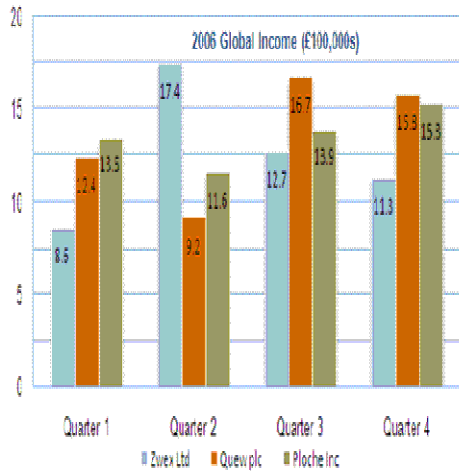
Model Test Paper 17  
General Study Paper II

<p>15. If</p> $\frac{2}{3} + \left(\frac{1}{2} - \frac{1}{6}\right) + \left(\frac{1}{3} - \frac{3}{4}\right) =$ <p>is calculated and the fraction obtained reduced to simplest form, then what is its numerator?</p> <p>(a) 12 (b) 8 (c) 7 (d) 6</p>	<p>(c) 30 (d) 46</p> <p>18. <math>3/4 + 0.85 + 20\% =</math></p> <p>(a) 27.85 (b) 1.8 (c) 23.85 (d) 2.85</p> <p>19. Tom worked for 6 hours and was paid \$5.50 per hour. He then went shopping and bought two magazines at \$9.50 each and a pen at \$8.25. How much money does Tom have left?</p> <p>(a) \$60.25 (b) \$15.25 (c) \$33 (d) \$5.75</p>
<p>16.</p> $\frac{1}{4} + \left(\frac{4}{3} \times \frac{3}{5}\right) - \left(\frac{1}{4} \div \frac{4}{5}\right) =$ <p>(a) 59/80 (b) 17/20 (c) 6/7 (d) 16/15</p> <p>17. A shop owner increased the selling price of a shirt from \$20 to \$26. By what percentage was the price increased?</p> <p>(a) 6 (b) 26</p>	<p>(a) 8 (b) 7.75 (c) 9.25 (d) 10</p> <p>20. 8. Bill bought <math>1\frac{3}{4}</math> pounds of Cheddar cheese, 3.75 pounds of blue cheese and <math>4\frac{1}{2}</math> pounds of goat cheese. How many pounds of cheese did Bill buy?</p>

**Model Test Paper 17**  
**General Study Paper II**

21. A car hire company offers two plans A and B. In plan A, a customer pays a flat fee of \$20 for the day plus 5 cents for each kilometer. In plan B, a customer pays a flat fee of \$15 for the day plus 7 cents for each kilometer. For how many kilometers would a customer pay the same amount for the two plans?

- (a) 1000
- (b) 800
- (c) 242
- (d) 250



Global income (% annual change on year before)

	2007	2008	2009	2010	2011 projection
Zwex Ltd	2.3	0.6	2.2	1.8	2.1
Quew plc	-0.7	-0.8	0.3	1.1	1.4
Ploche Inc	1.4	1.2	1.6	0.5	2.9

22. What was the global income for Ploche Inc in 2007 (to the nearest £10,000)?

- (a) £6,000,000
- (b) £5,510,000
- (c) £5,500,000
- (d) £5,430,000

23. Which of the following statements is true?

- (a) Ploche Inc increased global income each quarter during 2006
- (b) Between 2007-2010 Zwex Ltd has experienced 6.9% global income growth
- (c) In 2006 Quew plc's global income was £5,430,000
- (d) Ploche Inc has experienced positive global growth each year between 2006-2010

24. In which year up to 2010 did Quew plc experience a higher annual % growth than either Zwex Ltd or Ploche Inc?

- (a) 2007
- (b) 2008
- (c) 2009
- (d) 2010

**Model Test Paper 17**  
**General Study Paper II**

25. In 2006 the ratio of Zwex Ltd's Global : European sales was 4:3. What were the European sales for 2006?

- (a) £2 million
- (b) £2.5 million
- (c) £3 million
- (d) £3.75 million

	2006	2007	2008	2009	2010
	(£million)	(£million)	(£million)	(£million)	(£million)

Adjusted earnings	1.02	1.05	0.95	0.98	1.11
-------------------	------	------	------	------	------

Cash flow	1.32	1.42	1.34	1.25	1.53
-----------	------	------	------	------	------

Attributable profit	1.95	2.11	1.93	1.88	2.23
---------------------	------	------	------	------	------

26. What was the global income for Quew plc in 2008 (to the nearest £100,000)?

- (a) £5.41 million
- (b) £5.37 million
- (c) £5.33 million
- (d) £5.30 million

Average profit (per 500 units)	£250	£325	£175	£200	£300
--------------------------------	------	------	------	------	------

Average sales price (per unit)	£4.50	£4.65	£4.30	£4.15	£4.60
--------------------------------	-------	-------	-------	-------	-------

27. From 2006 to 2007 Attributable profit increased at double the percentage rate as it did between 2005-2006. What was the Attributable profit figure for 2005?

- (a) £0.23 million
- (b) £1.03 million
- (c) £1.83 million
- (d) £1.87 million

**Model Test Paper 17**  
**General Study Paper II**

<p>28. If the target was to have an average profit (per unit) in excess of 50p, in which year or years was this achieved?</p> <p>(a) 2006</p> <p>(b) 2006 and 2007</p> <p>(c) 2010</p> <p>(d) 2007 and 2010</p> <p>29. In 2011, if Adjusted earnings increase by an eighth and there is a 2:3 ratio of (2011 Adjusted earnings: 2011 Cash flow), what will be the Cash flow in 2011?</p> <p>(a) £2.14 million</p> <p>(b) £1.87 million</p> <p>(c) £1.25 million</p> <p>(d) £0.83 million</p> <p>30. Which year had the lowest ratio of Adjusted earnings to Attributable profit?</p> <p>(a) 2006</p> <p>(b) 2007</p> <p>(c) 2008</p> <p>(d) 2009</p> <p>31. Which year experienced the greatest percentage change in Cash flow compared to the preceding year?</p> <p>(a) 2007</p>	<p>(b) 2008</p> <p>(c) 2009</p> <p>(d) 2010</p> <p>32. Embarrassed is to humiliated as frightened is to</p> <p>(a) terrified</p> <p>(b) agitated</p> <p>(c) courageous</p> <p>(d) reckless</p> <p>33. Odometer is to mileage as compass is to</p> <p>(a) speed</p> <p>(b) hiking</p> <p>(c) needle</p> <p>(d) direction</p> <p>34. Optimist is to cheerful as pessimist is to</p> <p>(a) gloomy</p> <p>(b) mean</p> <p>(c) petty</p> <p>(d) helpful</p> <p>35. Sponge is to porous as rubber is to</p> <p>(a) massive</p> <p>(b) solid</p>
--	--



**Model Test Paper 17**  
**General Study Paper II**

<p>(c) elastic</p> <p>(d) inflexible</p> <p>36. By the time they reach adulthood, most people can perform many different activities involving motor skills. Motor skills involve such diverse tasks as riding a bicycle, threading a needle, and cooking a dinner. What all these activities have in common is their dependence on precision and timing of muscular movement.</p> <p>This paragraph best supports the statement that</p> <p>(a) most adults have not refined their motor skills</p> <p>(b) all adults know how to ride a bicycle</p> <p>(c) refined motor skills are specifically limited to adults</p> <p>(d) threading a needle is a precise motor skill</p>	<p>38. Forest fires feed on decades-long accumulations of debris and leap from the tops of young trees into the branches of mature trees. Fires that jump from treetop to treetop can be devastating. In old-growth forests, however, the shade of mature trees keeps thickets of small trees from sprouting, and the lower branches of mature trees are too high to catch the flames.</p> <p>This paragraph best supports the statement that</p> <p>(a) forest fire damage is reduced in old-growth forests</p> <p>(b) small trees should be cut down to prevent forest fires</p> <p>(c) mature trees should be thinned out to prevent forest fires</p> <p>(d) forest fires do the most damage in oldgrowth forests</p>
<p>37. Close-up images of Mars by the Mariner 9 probe indicated networks of valleys that looked like the stream beds on Earth. These images also implied that Mars once had an atmosphere that was thick enough to trap the sun's heat. If this were true, something happened to Mars billions of years ago that stripped away the planet's atmosphere. This paragraph best supports the statement that</p> <p>(a) Mars now has little or no atmosphere</p> <p>(b) Mars once had a thicker atmosphere than Earth does</p> <p>(c) the Mariner 9 probe took the first pictures of Mars</p> <p>(d) Mars is closer to the sun than Earth is</p>	<p>39. Originating in the 1920s, the Pyramid scheme is one of the oldest con games going. Honest people are often pulled in, thinking the scheme is a legitimate investment enterprise. The first customer to "fall for" the Pyramid scheme will actually make big money and will therefore persuade friends and relatives to join also. The chain then continues with the con artist who originated the scheme pocketing, rather than investing, the money. Finally, the pyramid collapses, but by that time, the scam artist will usually have moved out of town, leaving no forwarding address.</p> <p>This paragraph best supports the statement that</p> <p>(a) it is fairly easy to spot a Pyramid scheme in the making</p> <p>(b) the first customer of a Pyramid scheme is the most gullible</p>

**Model Test Paper 17**  
**General Study Paper II**

(c) the people who set up Pyramid schemes are able to fool honest people

(d) the Pyramid scheme had its heyday in the 1920s, but it's making a comeback

40. Most Reality TV centers on two common motivators: fame and money. The shows transform waitresses, hairdressers, investment bankers, counselors, and teachers, to name a few, from obscure figures to household names. A lucky few successfully parlay their fifteen minutes of fame into celebrity. The luckiest stars of Reality TV also reap huge financial rewards for acts including eating large insects, marrying someone they barely know, and revealing their innermost thoughts to millions of people.

This paragraph best supports the statement that

(a) the stars of Reality TV are interested in being rich and famous

(b) Reality TV is the best thing that has happened to network television in a long time

(c) for Reality TV stars, fame will last only as long as their particular television show

(d) traditional dramas and sitcoms are being replaced by Reality TV programming at an alarming rate

41. Which one of the following expressions has an even integer value for all integers  $a$  and  $c$  ?

(a)  $8a + 2ac$

(b)  $3a + 3c$

(c)  $2a + c$

(d)  $a + 2c$

42. A neighborhood recreation program serves a total of 280 children who are either 11 years old or 12 years old. The sum of the children's ages is 3,238 years. How many 11-year-old children does the recreation program serve?

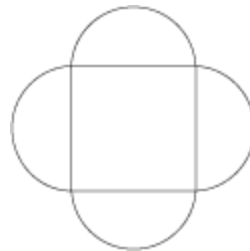
(a) 55

(b) 122

(c) 132

(d) 158

43. The geometric figure shown below consists of a square and 4 semicircles. The diameters of the semicircles are the sides of the square, and each diameter is 10 centimeters long. Which of the following is the closest approximation of the total area, in square centimeters, of this geometric figure?



(a) 100

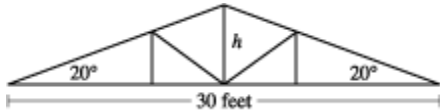
(b) 160

(c) 260

(d) 400

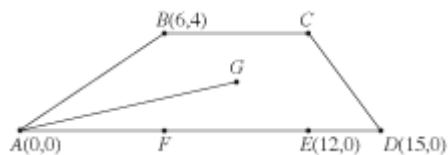
**Model Test Paper 17**  
**General Study Paper II**

44. Which of the following expressions is the closest approximation to the height  $h$ , in feet, of the roof truss shown below?



- (a)  $15 \tan 20^\circ$
- (b)  $15 \sin 20^\circ$
- (c)  $30 \tan 20^\circ$
- (d)  $30 \sin 20^\circ$

45. Quadrilateral ABCD is drawn on the standard  $(x,y)$  coordinate plane as shown below, with points E and F on AD. Point G is the center of rectangle BCEF. How many coordinate units long is AG ?



- (a)  $\sqrt{10}$
- (b)  $\sqrt{13}$
- (c)  $\sqrt{85}$
- (d)  $\sqrt{97}$

46. What is the x-intercept of the graph of  $y = x^2 - 4x + 4$  ?

- (a)  $-2$
- (b)  $-1$
- (c)  $0$
- (d)  $2$

47. For all nonzero real numbers  $p$ ,  $t$ ,  $x$ , and  $y$  such that  $\frac{x}{y} = \frac{3p}{2t}$ , which of the following expressions is equivalent to  $t$  ?

- (a)  $y/2$
- (b)  $3pz/2y$
- (c)  $6py/x$
- (d)  $3py/2x$

48. Ms. Hernandez began her math class by saying: I'm thinking of 5 numbers such that their mean is equal to their median. If 4 of the numbers are 14, 8, 16, and 14, what is the 5th number? What is the 5th number Ms. Hernandez is thinking of?

- (a) 13
- (b) 14
- (c) 15
- (d) 18

**Model Test Paper 17**  
**General Study Paper II**

49. Jerome wrote each of the integers 1 through 20, inclusive, on a separate index card. He placed the cards in a box, and then drew cards one at a time randomly from the box, without returning the cards he had already drawn to the box. In order to ensure that the sum of all cards he drew was even, how many cards did Jerome have to draw?

- (a) 11
- (b) 12
- (c) 13
- (d) 14

50. Which of the following is equivalent to  $\frac{5}{k} + \frac{k+3}{k+5}$  ?

- (a)  $\frac{k+8}{2k+5}$
- (b)  $\frac{k+8}{k(k+5)}$
- (c)  $\frac{5(k+3)}{k(k+5)}$
- (d)  $\frac{k^2+8k+25}{k(k+5)}$

51. In how many ways can 11 # signs and 8\* signs be arranged in a row so that no two \* signs come together?

- (a) 295
- (b) 395
- (c) 495
- (d) 595

52. A bag of 10 marbles contains 3 red marbles and 7 blue marbles. If two marbles are selected at random, what is the probability that at least one marble is blue?

- (a) 21/50
- (b) 3/13
- (c) 47/50
- (d) 14/15

53. A certain deck of cards contains 2 blue cards, 2 red cards, 2 yellow cards, and 2 green cards. If two cards are randomly drawn from the deck, what is the probability that they will both are not blue?

- (a) 15/28
- (b) 1/4
- (c) 9/16
- (d) 1/32

54. There are 5 red marbles, 3 blue marbles, and 2 green marbles. If a user chooses two marbles, what is the probability that the two marbles will be a different color?

- (a) 19/45
- (b) 22/45
- (c) 31/45
- (d) 34/45

**Model Test Paper 17**  
**General Study Paper II**

<p>The population of the world is increasing by around 83 million per year. This figure actually represents a decline by almost 50% in the growth rate from its peak of 2.2% in 1963 and further reductions are expected over the coming decades. The 20th century saw the biggest global increase of all time in the population and if the current levels of growth continue the world population will be around 9 billion by the year 2042. The increases are due to increased life expectancy and reduced mortality rates resulting from improvements in healthcare and agricultural productivity. Growth rates vary by region. There are estimates that over 90% of population growth in the future will be in developing countries. Central and Eastern Europe are experiencing a net decrease of population with Japan and some Western European countries expected to follow suit within the next 10 years.</p> <p>55. The annual rate of increase of the global population has fallen by 50% per annum since 1963</p> <p>(a) True</p> <p>(b) False</p> <p>(c) Cannot say</p> <p>(d)</p> <p>56. The European Union will suffer a net decrease in population over the next 10 years</p> <p>(a) True</p> <p>(b) False</p> <p>(c) Cannot say</p> <p>(d)</p>	<p>57. Global population is predicted to reach 9 billion by 2042 as the annual global population growth rate continues to rise</p> <p>(a) True</p> <p>(b) False</p> <p>(c) Cannot say</p> <p>(d)</p> <p>There are statistics which suggest that in some of the most underdeveloped countries almost one half of the population is now in the 10-19 age range. These countries have experienced a much smaller decrease in birth rates than has been seen in more developed countries. Charities and other agencies are calling for additional funds to be made available to provide improved education for these young people as well as easier access to contraception. There has also been a rapid increase in the number of people aged 65 or older. In the next 50 years, 95% of this increase will happen in developing countries like India, while in countries like Japan, Germany and Italy the percentage of the population aged 65 or more is set to rise to 40%. Increases in the numbers of the very young and the very old place stress on societies and governments may find it difficult to cope with the demands of an increasing number of dependent elderly citizens in addition to providing healthcare and education for the young.</p> <p>58. Those countries that have high numbers of younger people will be better positioned in the longer term to cope with their growing older population</p> <p>(a) True</p> <p>(b) False</p> <p>(c) Cannot say</p>
---	---

**Model Test Paper 17**  
**General Study Paper II**

<p>(d)</p> <p>59. In Japan and Germany less than 60% of the population is under 65 years of age</p> <p>(a) True</p> <p>(b) False</p> <p>(c) Cannot say</p> <p>(d)</p> <p>60. Birth rate decreases are not restricted to developed countries</p> <p>(a) True</p> <p>(b) False</p> <p>(c) Cannot say</p> <p>(d)</p> <p>Work-related stress is one of the biggest causes of sick leave in the UK. If you've noticed you always seem to be rushing about, or miss meal breaks, take work home or don't have enough time for relaxation, for your family or for exercise, then you may well find yourself under stress, especially at work. There is often no single cause of work-related stress, but it can be caused by poor working conditions, long hours, relationship problems with colleagues, or lack of job security. Stress is often the result of a combination of these factors that builds up over time. Work-related stress can result in both physical problems, such as headaches, muscular tension, back or neck pain, tiredness, digestive problems and sweating; or emotional problems, such as a lower sex drive, feelings of inadequacy, irritability and lack of concentration. According to recent surveys, one in six of all working individuals in the UK said their</p>	<p>job is very stressful, and thirty percent of men said that the demands of their job interferes with their private lives.</p> <p>61. Stress at work is often caused by relationship problems with your partner</p> <p>(a) True</p> <p>(b) False</p> <p>(c) Cannot say</p> <p>(d)</p> <p>62. Work-related stress can result in tiredness and a lack of concentration</p> <p>(a) True</p> <p>(b) False</p> <p>(c) Cannot say</p> <p>(d)</p> <p>63. One in six working men said their job is very stressful</p> <p>(a) True</p> <p>(b) False</p> <p>(c) Cannot say</p> <p>(d)</p>
---	--

**Model Test Paper 17**  
**General Study Paper II**

64. If you spend more time with your family, you will not suffer from stress

- (a) True
- (b) False
- (c) Cannot say
- (d)

65. Which word does NOT belong with the others?

- (a) fair
- (b) just
- (c) equitable
- (d) favorable

66. Which word does NOT belong with the others?

- (a) defendant
- (b) prosecutor
- (c) trial
- (d) judge

67. Which word does NOT belong with the others?

- (a) area
- (b) variable
- (c) circumference
- (d) quadrilateral

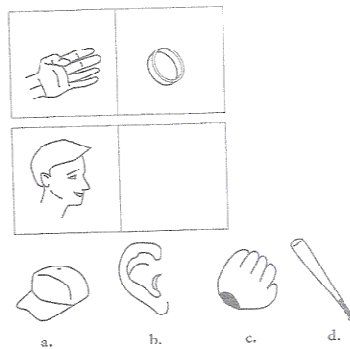
68. Which word does NOT belong with the others?

- (a) mayor
- (b) lawyer
- (c) governor
- (d) senator

69. Which word does NOT belong with the others?

- (a) acute
- (b) right
- (c) obtuse
- (d) parallel

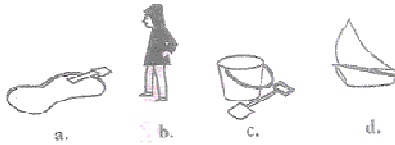

70.



- (a) A
- (b) B
- (c) C
- (d) D

Model Test Paper 17  
General Study Paper II

71.



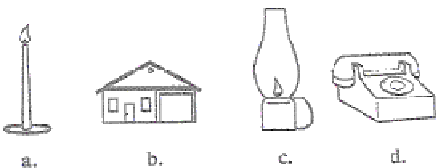
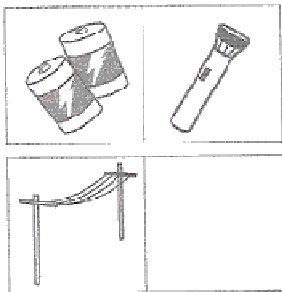
(a) A

(b) B

(c) C

(d) D

72.



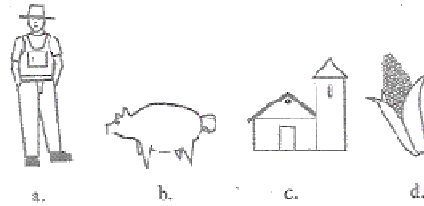
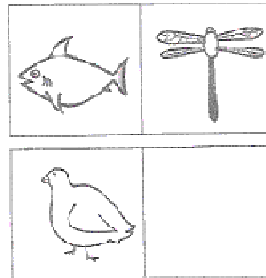
(a) A

(b) B

(c) C

(d) D

73.



(a) A

(b) B

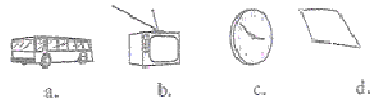

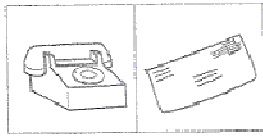
(c) C

(d) D



Model Test Paper 17  
General Study Paper II

74.



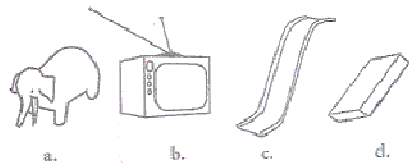


(a) A

(b) B

(c) C

(d) D

75.



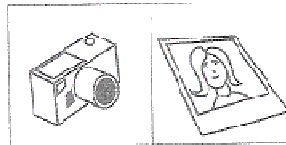
(a) A

(b) B

(c) C

(d) D

76.



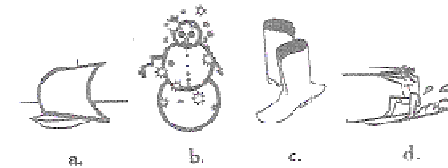
(a) A

(b) B

(c) C

(d) D

77.



Model Test Paper 17  
General Study Paper II

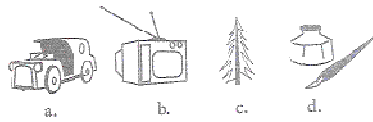
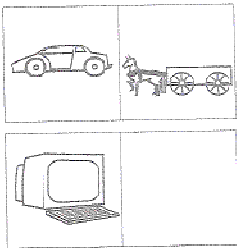
(a) A

(b) B

(c) C

(d) D

78.




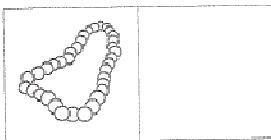
(a) A

(b) B

(c) C

(d) D

79.



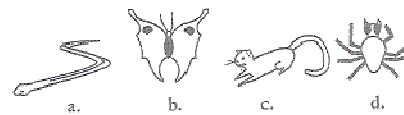
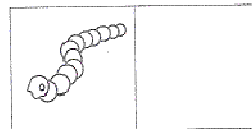
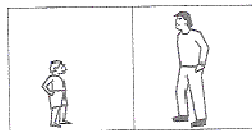
(a) A

(b) B

(c) C

(d) D

80.



(a) A

(b) B

(c) C

(d) D

Model Test Paper 17  
General Study Paper II

--	--

Answer Sheet

	A	B	C	D		A	B	C	D		A	B	C	D		A	B	C	D			
1	<input type="radio"/>	<input type="radio"/>	<input type="radio"/>	<input type="radio"/>		21	<input type="radio"/>	<input type="radio"/>	<input type="radio"/>	<input type="radio"/>		41	<input type="radio"/>	<input type="radio"/>	<input type="radio"/>	<input type="radio"/>		61	<input type="radio"/>	<input type="radio"/>	<input type="radio"/>	<input type="radio"/>
2	<input type="radio"/>	<input type="radio"/>	<input type="radio"/>	<input type="radio"/>		22	<input type="radio"/>	<input type="radio"/>	<input type="radio"/>	<input type="radio"/>		42	<input type="radio"/>	<input type="radio"/>	<input type="radio"/>	<input type="radio"/>		62	<input type="radio"/>	<input type="radio"/>	<input type="radio"/>	<input type="radio"/>
3	<input type="radio"/>	<input type="radio"/>	<input type="radio"/>	<input type="radio"/>		23	<input type="radio"/>	<input type="radio"/>	<input type="radio"/>	<input type="radio"/>		43	<input type="radio"/>	<input type="radio"/>	<input type="radio"/>	<input type="radio"/>		63	<input type="radio"/>	<input type="radio"/>	<input type="radio"/>	<input type="radio"/>
4	<input type="radio"/>	<input type="radio"/>	<input type="radio"/>	<input type="radio"/>		24	<input type="radio"/>	<input type="radio"/>	<input type="radio"/>	<input type="radio"/>		44	<input type="radio"/>	<input type="radio"/>	<input type="radio"/>	<input type="radio"/>		64	<input type="radio"/>	<input type="radio"/>	<input type="radio"/>	<input type="radio"/>
5	<input type="radio"/>	<input type="radio"/>	<input type="radio"/>	<input type="radio"/>		25	<input type="radio"/>	<input type="radio"/>	<input type="radio"/>	<input type="radio"/>		45	<input type="radio"/>	<input type="radio"/>	<input type="radio"/>	<input type="radio"/>		65	<input type="radio"/>	<input type="radio"/>	<input type="radio"/>	<input type="radio"/>
6	<input type="radio"/>	<input type="radio"/>	<input type="radio"/>	<input type="radio"/>		26	<input type="radio"/>	<input type="radio"/>	<input type="radio"/>	<input type="radio"/>		46	<input type="radio"/>	<input type="radio"/>	<input type="radio"/>	<input type="radio"/>		66	<input type="radio"/>	<input type="radio"/>	<input type="radio"/>	<input type="radio"/>
7	<input type="radio"/>	<input type="radio"/>	<input type="radio"/>	<input type="radio"/>		27	<input type="radio"/>	<input type="radio"/>	<input type="radio"/>	<input type="radio"/>		47	<input type="radio"/>	<input type="radio"/>	<input type="radio"/>	<input type="radio"/>		67	<input type="radio"/>	<input type="radio"/>	<input type="radio"/>	<input type="radio"/>
8	<input type="radio"/>	<input type="radio"/>	<input type="radio"/>	<input type="radio"/>		28	<input type="radio"/>	<input type="radio"/>	<input type="radio"/>	<input type="radio"/>		48	<input type="radio"/>	<input type="radio"/>	<input type="radio"/>	<input type="radio"/>		68	<input type="radio"/>	<input type="radio"/>	<input type="radio"/>	<input type="radio"/>
9	<input type="radio"/>	<input type="radio"/>	<input type="radio"/>	<input type="radio"/>		29	<input type="radio"/>	<input type="radio"/>	<input type="radio"/>	<input type="radio"/>		49	<input type="radio"/>	<input type="radio"/>	<input type="radio"/>	<input type="radio"/>		69	<input type="radio"/>	<input type="radio"/>	<input type="radio"/>	<input type="radio"/>
10	<input type="radio"/>	<input type="radio"/>	<input type="radio"/>	<input type="radio"/>		30	<input type="radio"/>	<input type="radio"/>	<input type="radio"/>	<input type="radio"/>		50	<input type="radio"/>	<input type="radio"/>	<input type="radio"/>	<input type="radio"/>		70	<input type="radio"/>	<input type="radio"/>	<input type="radio"/>	<input type="radio"/>
11	<input type="radio"/>	<input type="radio"/>	<input type="radio"/>	<input type="radio"/>		31	<input type="radio"/>	<input type="radio"/>	<input type="radio"/>	<input type="radio"/>		51	<input type="radio"/>	<input type="radio"/>	<input type="radio"/>	<input type="radio"/>		71	<input type="radio"/>	<input type="radio"/>	<input type="radio"/>	<input type="radio"/>
12	<input type="radio"/>	<input type="radio"/>	<input type="radio"/>	<input type="radio"/>		32	<input type="radio"/>	<input type="radio"/>	<input type="radio"/>	<input type="radio"/>		52	<input type="radio"/>	<input type="radio"/>	<input type="radio"/>	<input type="radio"/>		72	<input type="radio"/>	<input type="radio"/>	<input type="radio"/>	<input type="radio"/>
13	<input type="radio"/>	<input type="radio"/>	<input type="radio"/>	<input type="radio"/>		33	<input type="radio"/>	<input type="radio"/>	<input type="radio"/>	<input type="radio"/>		53	<input type="radio"/>	<input type="radio"/>	<input type="radio"/>	<input type="radio"/>		73	<input type="radio"/>	<input type="radio"/>	<input type="radio"/>	<input type="radio"/>
14	<input type="radio"/>	<input type="radio"/>	<input type="radio"/>	<input type="radio"/>		34	<input type="radio"/>	<input type="radio"/>	<input type="radio"/>	<input type="radio"/>		54	<input type="radio"/>	<input type="radio"/>	<input type="radio"/>	<input type="radio"/>		74	<input type="radio"/>	<input type="radio"/>	<input type="radio"/>	<input type="radio"/>
15	<input type="radio"/>	<input type="radio"/>	<input type="radio"/>	<input type="radio"/>		35	<input type="radio"/>	<input type="radio"/>	<input type="radio"/>	<input type="radio"/>		55	<input type="radio"/>	<input type="radio"/>	<input type="radio"/>	<input type="radio"/>		75	<input type="radio"/>	<input type="radio"/>	<input type="radio"/>	<input type="radio"/>
16	<input type="radio"/>	<input type="radio"/>	<input type="radio"/>	<input type="radio"/>		36	<input type="radio"/>	<input type="radio"/>	<input type="radio"/>	<input type="radio"/>		56	<input type="radio"/>	<input type="radio"/>	<input type="radio"/>	<input type="radio"/>		76	<input type="radio"/>	<input type="radio"/>	<input type="radio"/>	<input type="radio"/>
17	<input type="radio"/>	<input type="radio"/>	<input type="radio"/>	<input type="radio"/>		37	<input type="radio"/>	<input type="radio"/>	<input type="radio"/>	<input type="radio"/>		57	<input type="radio"/>	<input type="radio"/>	<input type="radio"/>	<input type="radio"/>		77	<input type="radio"/>	<input type="radio"/>	<input type="radio"/>	<input type="radio"/>
18	<input type="radio"/>	<input type="radio"/>	<input type="radio"/>	<input type="radio"/>		38	<input type="radio"/>	<input type="radio"/>	<input type="radio"/>	<input type="radio"/>		58	<input type="radio"/>	<input type="radio"/>	<input type="radio"/>	<input type="radio"/>		78	<input type="radio"/>	<input type="radio"/>	<input type="radio"/>	<input type="radio"/>
19	<input type="radio"/>	<input type="radio"/>	<input type="radio"/>	<input type="radio"/>		39	<input type="radio"/>	<input type="radio"/>	<input type="radio"/>	<input type="radio"/>		59	<input type="radio"/>	<input type="radio"/>	<input type="radio"/>	<input type="radio"/>		79	<input type="radio"/>	<input type="radio"/>	<input type="radio"/>	<input type="radio"/>
20	<input type="radio"/>	<input type="radio"/>	<input type="radio"/>	<input type="radio"/>		40	<input type="radio"/>	<input type="radio"/>	<input type="radio"/>	<input type="radio"/>		60	<input type="radio"/>	<input type="radio"/>	<input type="radio"/>	<input type="radio"/>		80	<input type="radio"/>	<input type="radio"/>	<input type="radio"/>	<input type="radio"/>