

Model Test Paper 63
General Study Paper II

DO NOT OPEN THIS BOOKLET UNTIL YOU ARE TOLD TO DO SO

TEST BOOKLET
GENERAL STUDIES
Paper-II

C

Time Allowed : Two Hours

Maximum Marks : 200

INSTRUCTIONS

1. IMMEDIATELY AFTER THE COMMENCEMENT OF THE EXAMINATION YOU SHOULD CHECK THAT THE TEST BOOKLET *DOES NOT* HAVE ANY UNPRINTED OR TORN OR MISSING PAGES OR ITEMS, ETC, IF SO, GET IT REPLACED BY A COMPLETE TEST BOOKLET.
2. **Please note that it is the candidate's responsibility to encode and fill in the Roll Number and Test Booklet Series A, B, C or D carefully and without any omission or discrepancy at the appropriate place in the OMR Answer Sheet. Any omission/discrepancy will render the Answer Sheet liable for rejection.**
3. You have to enter your Roll Number on the Test Booklet in the Box provided alongside . *DO NOT* write *anything else* on the Test Booklet.
4. This Test Booklet contains **80** items (questions). Each item comprises four responses (answers). You will select the response which you want to mark on the Answer Sheet. In case you feel that there is more than one correct response, mark the response which you consider the best. In any case, choose *ONLY ONE* response for each item.
5. You have to mark all your responses *ONLY* on the separate Answer Sheet provided.
6. **All** items carry equal marks.
7. Before you proceed to mark in the Answer Sheet the response to various items in the Test Booklet, you have to fill in some particulars in the Answer Sheet as per instructions sent to you with your Admission Certificate.
8. After you have completed filling in all your responses on the Answer Sheet and the examination has concluded, you should hand over to the invigilator only the *Answer Sheet*. You are permitted to take away with you the Test Booklet.
9. Sheets for rough work are appended in the Test Booklet at the end.
10. **Penalty for wrong Answers :**
THERE WILL BE PENALTY FOR WRONG ANSWERS MARKED BY A CANDIDATE IN THE OBJECTIVE TYPE QUESTION PAPERS.
(i) There are four alternatives for the answer to every question. For each question for which a wrong answer has been given by the candidate, **one-third** of the marks assigned to that question will be deducted as penalty.
(ii) If a candidate gives more than one answer, it will be treated as a **wrong answer** even if one of the given answers happens to be correct and there will be same penalty as above to that question.
(iii) If a question is left blank, i.e., no answer is given by the candidate, there will be **no penalty** for that question.

DO NOT OPEN THIS BOOKLET UNTIL YOU ARE TOLD TO DO SO

Model Test Paper 63
General Study Paper II

<p>To Whom it May Concern:</p> <p>On March 5, 2010, I bought a Perfect Muffin Kit from your store at Midfield Mall. The cashier who assisted me was George. George was very friendly and assured me that the Perfect Muffin Kit would live up to the guarantee on the box: "Perfect Muffins Every Time!"</p> <p>Unfortunately, this product did not live up to its claim. Although the box promised, as I stated above, to provide "Perfect Muffins Every Time," the muffins I made were far from perfect. I followed the directions included in the package very carefully. First, I removed the bag of mix from the box. Then, I poured it into a bowl. Next, I added the correct amount of water to the mix and stirred it. The directions said that after stirring the mixture, I could, and I quote, "add half a cup of raisins, nuts, berries, or another favorite ingredient." My favorite ingredient happens to be hot sauce. I find that a dash of hot sauce makes pizza, pasta, and soup taste very delicious. So, continuing to follow the directions, I added half a cup of hot sauce to the mix and stirred it. Finally, I poured the mix into muffin tins and baked it in the oven at 350 degrees for exactly 20 minutes.</p> <p>When the muffins finished baking, I was very excited to eat the "Perfect Muffins" as promised on the box. You can imagine my disappointment when, upon tasting the muffins, I discovered that they were not perfect. These muffins were, in fact, absolutely terrible. Not even my dog was interested in eating these supposedly "perfect" muffins.</p> <p>I would appreciate a full refund (\$3.99) for this product as soon as possible. Enclosed are the receipt, the empty box, and one of the un-perfect muffins so that you can experience it for yourself. Thank you for your prompt attention to this matter.</p> <p>Sincerely, Michelle Bauer</p> <p>1. This letter is most likely addressed to</p> <p>(a) the owner of the muffin mix company (b) a local storeowner (c) the clerk at a local muffin bakery (d) George, the cashier who sold Michelle the muffin mix</p> <p>2. The tone of the author can best be described as</p>	<p>(a) furious (b) disgusted (c) embarrassed (d) frustrated</p> <p>3. As used in paragraph 1, which is the best synonym for guarantee?</p> <p>(a) lie (b) warning (c) promise (d) sentence</p> <p>4. Which of the following best describes the organization of paragraph 2?</p> <p>(a) The paragraph follows chronological order, in which events are presented in the sequence that they occur (b) The author explains a problem and then proposes a solution to that problem (c) The author makes an argument and then provides evidence to support that argument (d) The paragraph follows a cause-and-effect order, in which a series of causes are given, followed by their effects</p> <p>5. It can be understood that the author is disappointed by the product because</p> <p>(a) it was worth less money than she paid for it (b) it did not fulfill the promise made on the box (c) the directions included with the product contained a mistake (d) the directions included with the product were too difficult to follow</p> <p>6. It can be understood that the author put hot sauce in the muffins because she</p> <p>(a) wanted to get a full refund (b) did not read the directions carefully (c) was out of raisins, nuts, and berries (d) considered it one of her favorite ingredients</p>
---	---

Model Test Paper 63
General Study Paper II

<p>7. The author's main purpose in writing this letter is to</p> <p>(a) complain about how bad the muffins tasted</p> <p>(b) obtain a full refund for her money</p> <p>(c) prevent others from making the same mistake she did</p> <p>(d) persuade the company to change the wording on their box</p> <p>8. Which of the following words best describes the author?</p> <p>(a) shrewd</p> <p>(b) senseless</p> <p>(c) unreasonable</p> <p>(d) careful</p> <p>9. Instead of hot sauce, which of the following ingredients might the author have reasonably added to enhance the flavor of the muffins?</p> <p>I. raspberries II. banana nuts III. chocolate chips</p> <p>(a) I only</p> <p>(b) I and II only</p> <p>(c) II and III only</p> <p>(d) I, II, and III</p> <p>10. According to the author, the muffins tasted "absolutely terrible." This is the result of</p> <p>(a) misinterpretation</p> <p>(b) negligence</p> <p>(c) forgetfulness</p> <p>(d) recklessness</p> <p>Mount Vesuvius, a volcano located between the ancient Italian cities of Pompeii and Herculaneum, has received much attention because of its frequent and destructive eruptions. The most famous of these eruptions occurred in A.D. 79.</p>	<p>The volcano had been inactive for centuries. There was little warning of the coming eruption, although one account unearthed by archaeologists says that a hard rain and a strong wind had disturbed the celestial calm during the preceding night. Early the next morning, the volcano poured a huge river of molten rock down upon Herculaneum, completely burying the city and filling the harbor with coagulated lava.</p> <p>Meanwhile, on the other side of the mountain, cinders, stone and ash rained down on Pompeii. Sparks from the burning ash ignited the combustible rooftops quickly. Large portions of the city were destroyed in the conflagration. Fire, however, was not the only cause of destruction. Poisonous sulfuric gases saturated the air. These heavy gases were not buoyant in the atmosphere and therefore sank toward the earth and suffocated people.</p> <p>Over the years, excavations of Pompeii and Herculaneum have revealed a great deal about the behavior of the volcano. By analyzing data, much as a zoologist dissects an animal specimen, scientists have concluded that the eruption changed large portions of the area's geography. For instance, it turned the Sarno River from its course and raised the level of the beach along the Bay of Naples. Meteorologists studying these events have also concluded that Vesuvius caused a huge tidal wave that affected the world's climate.</p> <p>In addition to making these investigations, archaeologists have been able to study the skeletons of victims by using distilled water to wash away the volcanic ash. By strengthening the brittle bones with acrylic paint, scientists have been able to examine the skeletons and draw conclusions about the diet and habits of the residents. Finally, the excavations at both Pompeii and Herculaneum have yielded many examples of classical art, such as jewelry made of bronze, which is an alloy of copper and tin. The eruption of Mount Vesuvius and its tragic consequences have provided everyone with a wealth of data about the effects that volcanoes can have on the surrounding area. Today, volcanologists can locate and predict eruptions, saving lives and preventing the destruction of other cities and cultures.</p> <p>11. Herculaneum and its harbor were buried under _____ lava</p> <p>(a) liquid</p> <p>(b) solid</p> <p>(c) flowing</p> <p>(d) gas</p>
---	---

Model Test Paper 63
General Study Paper II

<p>12. The poisonous gases were not _____ in the air</p> <p>(a) able to float (b) visible (c) able to evaporate (d) invisible</p> <p>13. Scientists analyzed data about Vesuvius in the same way that a zoologist _____ a specimen</p> <p>(a) describes in detail (b) studies by cutting apart (c) photographs (d) chart</p> <p>14. _____ have concluded that the volcanic eruption caused a tidal wave</p> <p>(a) Scientists who study oceans (b) Scientists who study atmospheric conditions (c) Scientists who study ash (d) Scientists who study animal behavior</p> <p>15. Scientists have used _____ water to wash away volcanic ash from the skeletons of victims</p> <p>(a) bottled (b) volcanic (c) purified (d) sea</p> <p>English Ivy betrays its poor reputation as a nuisance by its unparalleled ability to provide shade. By seamlessly covering the exterior of a building, it works as a natural insulator, blocking the sun and decreasing air conditioning costs. This means big savings for both building tenants and homeowners alike. And it can happen quickly, too. Under the proper conditions, established English Ivy can grow to cover an area of roughly 500 square feet per year. Given that most homes have a roof measuring roughly 2000 square feet, ivy-friendly homeowners can rest assured that their roofs will be completely covered in about four</p>	<p>years. When considering growth rates of newly planted ivy, just remember the old adage: First year, it sleeps. Second year, it creeps. Third year, it leaps! For English Ivy, this is especially true.</p> <p>Now, detractors may take this opportunity to remind readers about how invasive English Ivy can be. For what ivy enthusiast hasn't been cautioned about its ability to burrow holes, fracture windows, and even deteriorate brick? But be warned. Oftentimes, this suggestion is taken to the comical extreme. Naysayers take a strange pleasure in spinning yarns about a particularly malevolent strand of ivy—one that slips in through the cracks on a hot summer night, silently strangling homeowners in their sleep. Admittedly, this can be a funny story to tell. But are we to believe such a tale? The intelligent gardener will quickly dismiss such rubbish for what it is.</p> <p>16. The primary purpose of the passage is to</p> <p>(a) highlight the reasons why English Ivy's fast growth rate is beneficial (b) argue that English Ivy is an essential plant for homeowners (c) educate readers about how to use English Ivy to insulate their homes (d) defend the reputation of English Ivy</p> <p>17. As used in paragraph 1, which is the best definition for betrays?</p> <p>(a) gives away (b) contradicts (c) reveals (d) supports</p> <p>18. In paragraph 1, the author states, "Given that most homes have a roof measuring roughly 2000 square feet, ivy-friendly homeowners can rest assured that their roofs will be completely covered in about four years." Which of the following logical mistakes does the author make in drawing this conclusion?</p> <p>I. English Ivy will not cover the area of most roofs in 4 years if it only grows 500 square feet per year II. Most homes may not have the proper conditions necessary for English Ivy to grow at the specified rate III. Newly planted ivy does not grow as fast as established ivy</p>
--	--

Model Test Paper 63
General Study Paper II

<p>(a) I only</p> <p>(b) II only</p> <p>(c) I and II only</p> <p>(d) II and III only</p> <p>19. As used in paragraph 2, which is the best definition for deteriorate?</p> <p>(a) wear away</p> <p>(b) shield</p> <p>(c) add to</p> <p>(d) climb on</p> <p>20. Based on information in paragraph 1, which of the following would most likely be considered an insulator?</p> <p>(a) an umbrella</p> <p>(b) an automobile</p> <p>(c) suntan lotion</p> <p>(d) a winter jacket</p> <p>21. As used in paragraph 2, which is the best antonym for malevolent?</p> <p>(a) wary</p> <p>(b) sensitive</p> <p>(c) virtuous</p> <p>(d) injured</p> <p>22. This passage would most likely be found</p> <p>(a) in a scholarly journal about botany</p> <p>(b) in a magazine article about gardening</p> <p>(c) in a letter from one gardener to another</p> <p>(d) on a website identifying different types of plants</p> <p>23. The author's tone can best be described as</p> <p>(a) passionate</p>	<p>(b) indignant</p> <p>(c) argumentative</p> <p>(d) persuasive</p> <p>Rupert Brooke is dead. A telegram from the Admiral at Lemnos tells us that this life has closed at the moment when it seemed to have reached its springtime. A voice had become audible, a note had been struck, more true, more thrilling, more able to do justice to the nobility of our youth in arms engaged in this present war, than any other more able to express their thoughts of self-surrender, and with a power to carry comfort to those who watch them so intently from afar. The voice has been swiftly stilled. Only the echoes and the memory remain; but they will linger. During the last few months of his life, months of preparation in gallant comradeship and open air, the poet-soldier told with all the simple force of genius the sorrow of youth about to die, and the sure triumphant consolations of a sincere and valiant spirit. He expected to die: he was willing to die for the dear England whose beauty and majesty he knew: and he advanced towards the brink in perfect serenity, with absolute conviction of the rightness of his country's cause and a heart devoid of hate for fellow-men.</p> <p>The thoughts to which he gave expression in the very few incomparable war sonnets which he has left behind will be shared by many thousands of young men moving resolutely and blithely forward in this, the hardest, the cruelest, and the least-rewarded of all the wars that men have fought. They are a whole history and revelation of Rupert Brooke himself. Joyous, fearless, versatile, deeply instructed, with classic symmetry of mind and body, ruled by high undoubting purpose, he was all that one would wish England's noblest sons to be in the days when no sacrifice but the most precious is acceptable, and the most precious is that which is most freely proffered.</p> <p>24. According to the passage, Rupert Brooke was</p> <p>I. a writer</p> <p>II. a soldier</p> <p>III. a scientist</p> <p>(a) I only</p> <p>(b) II only</p> <p>(c) I and II</p> <p>(d) I and III</p>
---	---

Model Test Paper 63
General Study Paper II

<p>34. Nominalism is more problematic than conceptualism but less problematic than direct realism. Conceptualism is more problematic than Poinsettianism. Poinsettianism is more problematic than direct realism. If the first two statements are true, the third is</p> <p>(a) true (b) uncertain (c) false (d)</p> <p>35. Which number should come next in this series? 25,24,22,19,15</p> <p>(a) 4 (b) 5 (c) 10 (d) 14</p> <p>36. Which number should come next in this series? 3,5,8,13,21,</p> <p>(a) 4 (b) 21 (c) 31 (d) 34</p> <p>37. Which number should replace the question mark?</p> <table style="margin-left: 20px;"><tr><td>17</td><td>18</td><td>5</td><td>5</td></tr><tr><td>13</td><td>7</td><td>5</td><td>4</td></tr><tr><td>6</td><td>12</td><td>6</td><td>3</td></tr><tr><td>10</td><td>6</td><td>4</td><td>?</td></tr></table> <p>(a) 4 (b) 5 (c) 6 (d) 7</p>	17	18	5	5	13	7	5	4	6	12	6	3	10	6	4	?	<p>38. Which number should replace the question mark?</p> <table style="margin-left: 20px;"><tr><td>8</td><td>5</td><td>21</td></tr><tr><td>35</td><td>32</td><td>12</td></tr><tr><td>32</td><td>28</td><td>31</td></tr><tr><td>4</td><td>?</td><td>28</td></tr></table> <p>(a) 3 (b) -2 (c) -6 (d) 48</p> <p>39. Speed of a boat in standing water is 9 kmph and the speed of the stream is 1.5 kmph. A man rows to a place at a distance of 105 km and comes back to the starting point. The total time taken by him is</p> <p>(a) 16 hours (b) 18 hours (c) 20 hours (d) 24 hours</p> <p>40. 4 mat-weavers can weave 4 mats in 4 days. At the same rate, how many mats would be woven by 8 mat-weavers in 8 days?</p> <p>(a) 4 (b) 8 (c) 12 (d) 16</p> <p>41. Look carefully for the pattern, and then choose which pair of numbers comes next 3 5 35 10 12 35 17</p> <p>(a) 22 35 (b) 35 19 (c) 19 35 (d) 19 24</p>	8	5	21	35	32	12	32	28	31	4	?	28
17	18	5	5																										
13	7	5	4																										
6	12	6	3																										
10	6	4	?																										
8	5	21																											
35	32	12																											
32	28	31																											
4	?	28																											

Model Test Paper 63
General Study Paper II

<p>42. Look carefully for the pattern, and then choose which pair of numbers comes next</p> <p>13 29 15 26 17 23 19</p> <p>(a) 21 23 (b) 20 21 (c) 20 17 (d) 25 27</p> <p>43. An automobile financier claims to be lending money at simple interest, but he includes the interest every six months for calculating the principal. If he is charging an interest of 10%, the effective rate of interest becomes</p> <p>(a) 10% (b) 10.25% (c) 10.5% (d) None of these</p> <p>44. Statements: Jade plant has thick leaves and it requires little water</p> <p>Conclusions:</p> <p>1. All plants with thick leaves require little water 2. Jade plants may be grown in places where water is not in abundance</p> <p>(a) Only conclusion I follows (b) Only conclusion II follows (c) Either I or II follows (d) Neither I nor II follows</p> <p>45. Statements: Use "Kraft" colours. They add colour to our life. - An advertisement</p> <p>Conclusions:</p> <p>1. Catchy slogans do not attract people 2. People like dark colours</p> <p>(a) Only conclusion I follows (b) Only conclusion II follows (c) Either I or II follows (d) Neither I nor II follows</p>	<p>46. Statement: Should adult education programme be given priority over compulsory education programme?</p> <p>Arguments:</p> <p>1. No. It will also help in success of compulsory education programme 2. Yes. It will help to eliminate the adult illiteracy</p> <p>(a) Only argument I is strong (b) Only argument II is strong (c) Either I or II is strong (d) Neither I nor II is strong</p> <p>47. Statement: Should colleges be given the status of a university in India?</p> <p>Arguments:</p> <p>1. Yes. Colleges are in a better position to assess the student's performance and therefore the degrees will be more valid 2. No. It is Utopian to think that there will not be nepotism and corruption in awarding degrees by colleges</p> <p>(a) Only argument I is strong (b) Only argument II is strong (c) Either I or II is strong (d) Neither I nor II is strong</p> <p>For questions 48 to 51 choose the answer which is a necessary part of the given word</p> <p>48. lightning</p> <p>(a) electricity (b) thunder (c) brightness (d) rain</p> <p>49. ovation</p> <p>(a) outburst (b) bravo (c) applause (d) encore</p>
---	---

Model Test Paper 63
General Study Paper II

50. bonus

- (a) reward
- (b) raise
- (c) cash
- (d) employer

51. antique

- (a) rarity
- (b) artifact
- (c) aged
- (d) prehistoric

52. An Informal Gathering occurs when a group of people get together in a casual, relaxed manner. Which situation below is the best example of an Informal Gathering?

- (a) The book club meets on the first Thursday evening of every month
- (b) After finding out about his promotion, Jeremy and a few coworkers decide to go out for a quick drink after work
- (c) Mary sends out 25 invitations for the bridal shower she is giving for her sister
- (d) Whenever she eats at the Mexican restaurant, Clara seems to run into Peter

53.

Which one will replace the question mark ?

18	24	32
12	14	16
3	?	4
72	112	128

(a) 2

(b) 3

(c) 4

(d) 5

54. QPO, NML, KJI, _____, EDC

(a) HGF

(b) CAB

(c) JKL

(d) GHI

55. JAK, KBL, LCM, MDN, _____

(a) OEP

(b) NEO

(c) MEN

(d) PFQ

Answer the questions based on the given line graph

Ratio of Exports to Imports (in terms of money in million Singapore Dollar) of Two Companies Over the Years

Model Test Paper 63
General Study Paper II



56. In how many of the given years were the exports more than the imports for Company A?

- (a) 2
- (b) 3
- (c) 4
- (d) 5

57. If the imports of Company A in 1997 were increased by 40 percent, what would be the ratio of exports to the increased imports?

- (a) 1.20
- (b) 1.25
- (c) 1.30
- (d) Cannot be determined

58. If the exports of Company A in 1998 were 237 million Singapore Dollar, what was the amount of imports in that year?

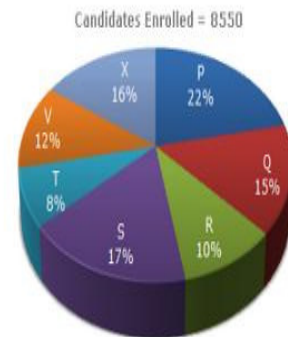
- (a) 189.6 million Singapore Dollar
- (b) 243 million Singapore Dollar
- (c) 281 million Singapore Dollar
- (d) 316 million Singapore Dollar

59. In which year(s) was the difference between imports and exports of Company B the maximum?

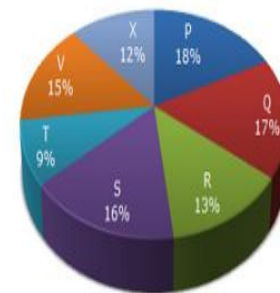
- (a) 2000
- (b) 1996
- (c) 1998 and 2000
- (d) Cannot be determined

Study the following graph carefully and answer the questions given below

Distribution of candidates who were enrolled for MBA entrance exam and the candidates (out of those enrolled) who passed the exam in different institutes:



Candidates who Passed the Exam = 5700



60. What percentage of candidates passed the Exam from institute T out of the total number of candidates enrolled from the same institute?

- (a) 50%
- (b) 62.5%
- (c) 75%
- (d) 80%

Model Test Paper 63
General Study Paper II

61. Which institute has the highest percentage of candidates passed to the candidates enrolled?

- (a) Q
- (b) R
- (c) V
- (d) T

62. The number of candidates passed from institutes S and P together exceeds the number of candidates enrolled from institutes T and R together by

- (a) 228
- (b) 279
- (c) 399
- (d) 407

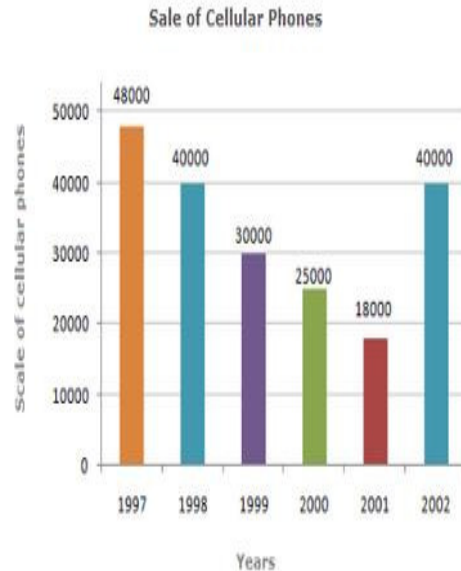
63. What is the percentage of candidates passed to the candidates enrolled for institutes Q and R together?

- (a) 68%
- (b) 80%
- (c) 74%
- (d) 65%

64. What is the ratio of candidates passed to the candidates enrolled from institute P?

- (a) 9 : 11
- (b) 14 : 17
- (c) 6 : 11
- (d) 9 : 17

Study the bar chart and answer the questions



65. The difference in the sales of cellular phones for the years 1997 and 1999 is ?

- (a) 500 units
- (b) 1,000 units
- (c) 5,000 units
- (d) 18,000 units

66. The two years between which the rate of change of cellular phones is minimum are ?

- (a) 1997 and 1998
- (b) 1999 and 2000
- (c) Both option (A) and (B)
- (d) 2001 and 2002

67. The sum of sales of cellular phones in the years 1999 and 2001 is equal to that in ?

- (a) 1997
- (b) 1998
- (c) 2000
- (d) 2002

Model Test Paper 63
General Study Paper II

<p>68. The percentage increases in sales from 2001 to 2002 was ?</p> <p>(a) 115 % (b) 128 % (c) 122 % (d) 118 %</p> <p>69. Statement: Most of those who study in premier engineering colleges in China migrate to developed nations for better prospects in their professional pursuits</p> <p>Courses of Action</p> <p>1. All the students joining these colleges should be asked to sign a bond at the time of admission to the effect that they will remain in China at least for ten years after they complete education 2. All those students who desire to settle in the developed nations should be asked to pay entire cost of their education which the government subsidises</p> <p>(a) Only I follows (b) Only II follows (c) Either I or II follow (d) Neither I nor II follows</p> <p>70. Statement: There is an unprecedented increase in migration of villagers to urban areas as repeated crop failure has put them into precarious financial situation</p> <p>Courses of Action</p> <p>1. The villagers should be provided with alternate source of income in their villages which will make them stay put 2. The migrated villagers should be provided with jobs in the urban areas to help them survive</p> <p>(a) Only I follows (b) Only II follows (c) Either I or II follows (d) Neither I nor II follows</p>	<p>71. Statements</p> <p>1. The prices of petrol and diesel in the domestic market have remained unchanged for the past few months 2. The crude oil prices in the international market have gone up substantially in the last few months</p> <p>(a) Statement I is the cause and statement II is its effect (b) Statement II is the cause and statement I is its effect (c) Both the statements I and II are independent causes (d) Both the statements I and II are effects of independent causes</p> <p>72. Statements</p> <p>1. The government has recently fixed the fees for professional courses offered by the unaided institutions which are much lower than the fees charged last year 2. The parents of the aspiring students launched a severe agitation last year protesting against the high fees charged by the unaided institutions</p> <p>(a) Statement I is the cause and statement II is its effect (b) Statement II is the cause and statement I is its effect (c) Both the statements I and II are independent causes (d) Both the statements I and II are effects of independent causes</p> <p>73. Here are some words translated from an artificial language</p> <p>gorblflur means fan belt pixngorbl means ceiling fan arthtusl means tile roof</p> <p>Which word could mean "ceiling tile"?</p> <p>(a) gorbtlusl (b) flurgorbl (c) arthflur (d) pixnarth</p>
--	---

Model Test Paper 63
General Study Paper II

<p>74. Here are some words translated from an artificial language</p> <p>hapllesh means cloudburst srenchoch means pinball resbosrench means ninepin</p> <p>Which word could mean "cloud nine"?</p> <p>(a) leshsrench (b) ochhapl (c) haploch (d) haplresbo</p> <p>75. Out of the following four group of letters three are similar in a certain way while one is different. Select the one which is different from the others</p> <p>(a) RBWG (b) IZNE (c) VBAG (d) RDWJ</p> <p>76. Out of the following four numbers three are similar in a certain way while one is different. Select the one which is different from the others</p> <p>(a) 674 (b) 172 (c) 246 (d) 358</p> <p>77. Select the numeral pair / group which is different from others</p> <p>(a) 27 - 18 (b) 48 - 56 (c) 39 - 36 (d) 28 - 51</p> <p>78. If PALAM could be given the code number 43, what code number can be given to SANTACRUZ?</p> <p>(a) 85</p>	<p>(b) 123 (c) 75 (d) 120</p> <p>79. If in a code language, COULD is written as BNTKC and MARGIN is written as LZQFHM, how will MOULDING be written in that code?</p> <p>(a) LNKTCHEMF (b) CHMFINTK (c) NITKHCMF (d) LNTKCHMF</p> <p>80. In a March Past, seven persons are standing in a row. Q is standing left to R but right to P. O is standing right to N and left to P. Similarly, S is standing right to R and left to T. Find out who is standing in the middle</p> <p>(a) Q (b) P (c) O (d) R</p>
--	---

Model Test Paper 63
General Study Paper II



Answer Sheet

	A	B	C	D		A	B	C	D		A	B	C	D		A	B	C	D
1	<input type="radio"/>	<input type="radio"/>	<input type="radio"/>	<input type="radio"/>	21	<input type="radio"/>	<input type="radio"/>	<input type="radio"/>	<input type="radio"/>	41	<input type="radio"/>	<input type="radio"/>	<input type="radio"/>	<input type="radio"/>	61	<input type="radio"/>	<input type="radio"/>	<input type="radio"/>	<input type="radio"/>
2	<input type="radio"/>	<input type="radio"/>	<input type="radio"/>	<input type="radio"/>	22	<input type="radio"/>	<input type="radio"/>	<input type="radio"/>	<input type="radio"/>	42	<input type="radio"/>	<input type="radio"/>	<input type="radio"/>	<input type="radio"/>	62	<input type="radio"/>	<input type="radio"/>	<input type="radio"/>	<input type="radio"/>
3	<input type="radio"/>	<input type="radio"/>	<input type="radio"/>	<input type="radio"/>	23	<input type="radio"/>	<input type="radio"/>	<input type="radio"/>	<input type="radio"/>	43	<input type="radio"/>	<input type="radio"/>	<input type="radio"/>	<input type="radio"/>	63	<input type="radio"/>	<input type="radio"/>	<input type="radio"/>	<input type="radio"/>
4	<input type="radio"/>	<input type="radio"/>	<input type="radio"/>	<input type="radio"/>	24	<input type="radio"/>	<input type="radio"/>	<input type="radio"/>	<input type="radio"/>	44	<input type="radio"/>	<input type="radio"/>	<input type="radio"/>	<input type="radio"/>	64	<input type="radio"/>	<input type="radio"/>	<input type="radio"/>	<input type="radio"/>
5	<input type="radio"/>	<input type="radio"/>	<input type="radio"/>	<input type="radio"/>	25	<input type="radio"/>	<input type="radio"/>	<input type="radio"/>	<input type="radio"/>	45	<input type="radio"/>	<input type="radio"/>	<input type="radio"/>	<input type="radio"/>	65	<input type="radio"/>	<input type="radio"/>	<input type="radio"/>	<input type="radio"/>
6	<input type="radio"/>	<input type="radio"/>	<input type="radio"/>	<input type="radio"/>	26	<input type="radio"/>	<input type="radio"/>	<input type="radio"/>	<input type="radio"/>	46	<input type="radio"/>	<input type="radio"/>	<input type="radio"/>	<input type="radio"/>	66	<input type="radio"/>	<input type="radio"/>	<input type="radio"/>	<input type="radio"/>
7	<input type="radio"/>	<input type="radio"/>	<input type="radio"/>	<input type="radio"/>	27	<input type="radio"/>	<input type="radio"/>	<input type="radio"/>	<input type="radio"/>	47	<input type="radio"/>	<input type="radio"/>	<input type="radio"/>	<input type="radio"/>	67	<input type="radio"/>	<input type="radio"/>	<input type="radio"/>	<input type="radio"/>
8	<input type="radio"/>	<input type="radio"/>	<input type="radio"/>	<input type="radio"/>	28	<input type="radio"/>	<input type="radio"/>	<input type="radio"/>	<input type="radio"/>	48	<input type="radio"/>	<input type="radio"/>	<input type="radio"/>	<input type="radio"/>	68	<input type="radio"/>	<input type="radio"/>	<input type="radio"/>	<input type="radio"/>
9	<input type="radio"/>	<input type="radio"/>	<input type="radio"/>	<input type="radio"/>	29	<input type="radio"/>	<input type="radio"/>	<input type="radio"/>	<input type="radio"/>	49	<input type="radio"/>	<input type="radio"/>	<input type="radio"/>	<input type="radio"/>	69	<input type="radio"/>	<input type="radio"/>	<input type="radio"/>	<input type="radio"/>
10	<input type="radio"/>	<input type="radio"/>	<input type="radio"/>	<input type="radio"/>	30	<input type="radio"/>	<input type="radio"/>	<input type="radio"/>	<input type="radio"/>	50	<input type="radio"/>	<input type="radio"/>	<input type="radio"/>	<input type="radio"/>	70	<input type="radio"/>	<input type="radio"/>	<input type="radio"/>	<input type="radio"/>
11	<input type="radio"/>	<input type="radio"/>	<input type="radio"/>	<input type="radio"/>	31	<input type="radio"/>	<input type="radio"/>	<input type="radio"/>	<input type="radio"/>	51	<input type="radio"/>	<input type="radio"/>	<input type="radio"/>	<input type="radio"/>	71	<input type="radio"/>	<input type="radio"/>	<input type="radio"/>	<input type="radio"/>
12	<input type="radio"/>	<input type="radio"/>	<input type="radio"/>	<input type="radio"/>	32	<input type="radio"/>	<input type="radio"/>	<input type="radio"/>	<input type="radio"/>	52	<input type="radio"/>	<input type="radio"/>	<input type="radio"/>	<input type="radio"/>	72	<input type="radio"/>	<input type="radio"/>	<input type="radio"/>	<input type="radio"/>
13	<input type="radio"/>	<input type="radio"/>	<input type="radio"/>	<input type="radio"/>	33	<input type="radio"/>	<input type="radio"/>	<input type="radio"/>	<input type="radio"/>	53	<input type="radio"/>	<input type="radio"/>	<input type="radio"/>	<input type="radio"/>	73	<input type="radio"/>	<input type="radio"/>	<input type="radio"/>	<input type="radio"/>
14	<input type="radio"/>	<input type="radio"/>	<input type="radio"/>	<input type="radio"/>	34	<input type="radio"/>	<input type="radio"/>	<input type="radio"/>	<input type="radio"/>	54	<input type="radio"/>	<input type="radio"/>	<input type="radio"/>	<input type="radio"/>	74	<input type="radio"/>	<input type="radio"/>	<input type="radio"/>	<input type="radio"/>
15	<input type="radio"/>	<input type="radio"/>	<input type="radio"/>	<input type="radio"/>	35	<input type="radio"/>	<input type="radio"/>	<input type="radio"/>	<input type="radio"/>	55	<input type="radio"/>	<input type="radio"/>	<input type="radio"/>	<input type="radio"/>	75	<input type="radio"/>	<input type="radio"/>	<input type="radio"/>	<input type="radio"/>
16	<input type="radio"/>	<input type="radio"/>	<input type="radio"/>	<input type="radio"/>	36	<input type="radio"/>	<input type="radio"/>	<input type="radio"/>	<input type="radio"/>	56	<input type="radio"/>	<input type="radio"/>	<input type="radio"/>	<input type="radio"/>	76	<input type="radio"/>	<input type="radio"/>	<input type="radio"/>	<input type="radio"/>
17	<input type="radio"/>	<input type="radio"/>	<input type="radio"/>	<input type="radio"/>	37	<input type="radio"/>	<input type="radio"/>	<input type="radio"/>	<input type="radio"/>	57	<input type="radio"/>	<input type="radio"/>	<input type="radio"/>	<input type="radio"/>	77	<input type="radio"/>	<input type="radio"/>	<input type="radio"/>	<input type="radio"/>
18	<input type="radio"/>	<input type="radio"/>	<input type="radio"/>	<input type="radio"/>	38	<input type="radio"/>	<input type="radio"/>	<input type="radio"/>	<input type="radio"/>	58	<input type="radio"/>	<input type="radio"/>	<input type="radio"/>	<input type="radio"/>	78	<input type="radio"/>	<input type="radio"/>	<input type="radio"/>	<input type="radio"/>
19	<input type="radio"/>	<input type="radio"/>	<input type="radio"/>	<input type="radio"/>	39	<input type="radio"/>	<input type="radio"/>	<input type="radio"/>	<input type="radio"/>	59	<input type="radio"/>	<input type="radio"/>	<input type="radio"/>	<input type="radio"/>	79	<input type="radio"/>	<input type="radio"/>	<input type="radio"/>	<input type="radio"/>
20	<input type="radio"/>	<input type="radio"/>	<input type="radio"/>	<input type="radio"/>	40	<input type="radio"/>	<input type="radio"/>	<input type="radio"/>	<input type="radio"/>	60	<input type="radio"/>	<input type="radio"/>	<input type="radio"/>	<input type="radio"/>	80	<input type="radio"/>	<input type="radio"/>	<input type="radio"/>	<input type="radio"/>