

Model Test Paper 64
General Study Paper II

DO NOT OPEN THIS BOOKLET UNTIL YOU ARE TOLD TO DO SO

TEST BOOKLET
GENERAL STUDIES
Paper-II

D

Time Allowed : Two Hours

Maximum Marks : 200

INSTRUCTIONS

1. IMMEDIATELY AFTER THE COMMENCEMENT OF THE EXAMINATION YOU SHOULD CHECK THAT THE TEST BOOKLET *DOES NOT* HAVE ANY UNPRINTED OR TORN OR MISSING PAGES OR ITEMS, ETC, IF SO, GET IT REPLACED BY A COMPLETE TEST BOOKLET.
2. **Please note that it is the candidate's responsibility to encode and fill in the Roll Number and Test Booklet Series A, B, C or D carefully and without any omission or discrepancy at the appropriate place in the OMR Answer Sheet. Any omission/discrepancy will render the Answer Sheet liable for rejection.**
3. You have to enter your Roll Number on the Test Booklet in the Box provided alongside . *DO NOT* write *anything else* on the Test Booklet.
4. This Test Booklet contains **80** items (questions). Each item comprises four responses (answers). You will select the response which you want to mark on the Answer Sheet. In case you feel that there is more than one correct response, mark the response which you consider the best. In any case, choose *ONLY ONE* response for each item.
5. You have to mark all your responses *ONLY* on the separate Answer Sheet provided.
6. **All** items carry equal marks.
7. Before you proceed to mark in the Answer Sheet the response to various items in the Test Booklet, you have to fill in some particulars in the Answer Sheet as per instructions sent to you with your Admission Certificate.
8. After you have completed filling in all your responses on the Answer Sheet and the examination has concluded, you should hand over to the invigilator only the *Answer Sheet*. You are permitted to take away with you the Test Booklet.
9. Sheets for rough work are appended in the Test Booklet at the end.
10. **Penalty for wrong Answers :**
THERE WILL BE PENALTY FOR WRONG ANSWERS MARKED BY A CANDIDATE IN THE OBJECTIVE TYPE QUESTION PAPERS.
(i) There are four alternatives for the answer to every question. For each question for which a wrong answer has been given by the candidate, **one-third** of the marks assigned to that question will be deducted as penalty.
(ii) If a candidate gives more than one answer, it will be treated as a **wrong answer** even if one of the given answers happens to be correct and there will be same penalty as above to that question.
(iii) If a question is left blank, i.e., no answer is given by the candidate, there will be **no penalty** for that question.

DO NOT OPEN THIS BOOKLET UNTIL YOU ARE TOLD TO DO SO

Model Test Paper 64
General Study Paper II

<p>Mona doesn't like to ask people for help. But it is hard for her to perform daily activities on her own. She is almost 13, yet she is no larger than a 5-year-old. Mona has trouble keeping her balance and can't walk very far. When she uses a wheelchair, she can't push it herself. Fortunately, Mona has a wonderful service dog named Sam. A service dog is a dog that has been trained to assist someone who has a physical problem. Sam lets Mona lean on him when she walks. He also pulls her wheelchair and turns lights on and off. When Mona drops something, Sam picks it up. He even pulls her socks off at night.</p> <p>Sam also helps Mona with everyday tasks at school. He carries her books from class to class in a special backpack. He puts Mona's completed assignments in her teachers' homework trays. In the lunchroom he throws away her trash.</p> <p>Besides making Mona less dependent on other people, Sam helps her lead a fuller life. Mona's classmates flock around Sam like geese. This has helped her make friends. Sam also helps Mona be more active. With his aid, she raised over \$500 in a walk-a-thon for her local humane society.</p> <p>Because of Sam, Mona doesn't have to ask people for help. Sam brings her closer to other kids. And he even helps her contribute to her community.</p> <p>1. Which of the following would be the best title for this passage?</p> <p>(a) Why Mona Loses Her Balance</p> <p>(b) How Mona's Service Dog Helps Her</p> <p>(c) Sam Helps Mona at School</p> <p>(d) Raising Money for the Humane Society</p> <p>2. Using the passage as a guide, which of the following dogs is most likely a service dog?</p> <p>(a) Frank's dog, who turns on the lights when Frank enters the room</p> <p>(b) Raul's dog, who fetches the newspaper for Raul while he is busy getting dressed</p> <p>(c) Mei's dog, who licks Mei's face when she cries</p> <p>(d) Teddy's dog, who loves to play catch, go on walks, and watch movies with the family</p>	<p>3. According to the passage, Sam helps Mona by</p> <p>I. helping her to walk II. performing everyday tasks for her III. bringing her closer to her classmates</p> <p>(a) I only</p> <p>(b) I and II only</p> <p>(c) II and III only</p> <p>(d) I, II, and III</p> <p>4. In paragraph 4, the author writes, "Mona's classmates flock around Sam like geese." Which of the following literary techniques is used in this sentence?</p> <p>(a) allusion, characterized by a reference to, or representation of, people, places, events, literary work, myths, or works of art, either directly or by implication</p> <p>(b) personification, characterized by giving human traits to nonhuman things, such as animals or objects</p> <p>(c) irony, characterized by the use of words to express the opposite of their usual meaning</p> <p>(d) simile, characterized by the making of a comparison using the words "like" or "as"</p> <p>When you imagine the desert, you probably think of a very hot place covered with sand. Although this is a good description for many deserts, Earth's largest desert is actually a very cold place covered with ice: Antarctica.</p> <p>In order for an area to be considered a desert, it must receive very little rainfall. More specifically, it must receive an average of less than ten inches of precipitation—which can be rain, sleet, hail, or snow—on the ground every year. Antarctica, the coldest place on earth, has an average temperature that usually falls below the freezing point. And because cold air holds less moisture than warm air, the air in Antarctica does not hold much moisture at all. This is evident in the low precipitation statistics recorded for Antarctica. For example, the central part of Antarctica receives an average of less than 2 inches of snow every year. The coastline of Antarctica receives a little bit more—between seven and eight inches a year. Because Antarctica gets so little precipitation every year, it is considered a desert.</p>
---	--

Model Test Paper 64
General Study Paper II

<p>When precipitation falls in hot deserts, it quickly evaporates back into the atmosphere. The air over Antarctica is too cold to hold water vapor, so there is very little evaporation. Due to this low rate of evaporation, most of the snow that falls to the ground remains there permanently, eventually building up into thick ice sheets. Any snow that does not freeze into ice sheets becomes caught up in the strong winds that constantly blow over Antarctica. These snow-filled winds can make it look as if it is snowing. Even though snowfall is very rare there, blizzards are actually very common on Antarctica.</p> <p>5. The main purpose of paragraph 1 is to</p> <p>(a) accept a conclusion (b) introduce an argument (c) provide a brief history (d) deny a common belief</p> <p>6. The best title for this passage would be</p> <p>(a) Earth's Many Deserts (b) Antarctica: The Coldest Place on Earth (c) A Desert of Ice (d) Unusual Blizzards</p> <p>7. Africa's Sahara Desert is the second-largest desert on earth. Based on the information in the passage, what characteristic must the Sahara share with Antarctica?</p> <p>(a) low temperatures (b) high temperatures (c) frequent blizzards (d) low precipitation</p> <p>8. As used in paragraph 2, which is the best definition for precipitation?</p> <p>(a) moisture in the air that falls to the ground (b) any type of weather event (c) weather events that only happen in very cold areas (d) a blizzard that occurs in areas with limited snowfall</p>	<p>9. In paragraph 2 the author writes, "And because cold air holds less moisture than warm air, the air in Antarctica does not hold much moisture at all." Using this information, it can be understood that</p> <p>(a) air in Africa holds more moisture than the air in Antarctica (b) air surrounding a tropical island holds less moisture than the air in Antarctica (c) air in the second floor of a house is typically warmer than air on the first floor (d) air at the mountains is typically colder than the air at the beach</p> <p>10. According to the final paragraph, any snow that falls over Antarctica</p> <p>I. becomes part of the Antarctic ice sheet II. is blown around by strong winds III. evaporates back into the atmosphere</p> <p>(a) I only (b) I and II only (c) II and III only (d) I, II, and III</p> <p>11. Based on the information in the final paragraph, it can be understood that blizzards in Antarctica are mainly the result of</p> <p>(a) freezing cold temperatures (b) large amounts of snowfall (c) low amounts of precipitation (d) strong winds</p> <p>Conflict had existed between Spain and England since the 1570s. England wanted a share of the wealth that Spain had been taking from the lands it had claimed in the Americas. Elizabeth I, Queen of England, encouraged her staunch admiral of the navy, Sir Francis Drake, to raid Spanish ships and towns. Though these raids were on a small scale, Drake achieved dramatic success, adding gold and silver to England's treasury and diminishing Spain's supremacy.</p>
--	--

Model Test Paper 64
General Study Paper II

Religious differences also caused conflict between the two countries. Whereas Spain was Roman Catholic, most of England had become Protestant. King Philip II of Spain wanted to claim the throne and make England a Catholic country again. To satisfy his ambition and also to retaliate against England's theft of his gold and silver, King Philip began to build his fleet of warships, the Spanish Armada, in January 1586.

Philip intended his fleet to be indestructible. In addition to building new warships, he marshaled 130 sailing vessels of all types and recruited more than 19,000 robust soldiers and 8,000 sailors. Although some of his ships lacked guns and others lacked ammunition, Philip was convinced that his Armada could withstand any battle with England.

The martial Armada set sail from Lisbon, Portugal, on May 9, 1588, but bad weather forced it back to port. The voyage resumed on July 22 after the weather became more stable.

The Spanish fleet met the smaller, faster, and more maneuverable English ships in battle off the coast of Plymouth, England, first on July 31 and again on August 2. The two battles left Spain vulnerable, having lost several ships and with its ammunition depleted. On August 7, while the Armada lay at anchor on the French side of the Strait of Dover, England sent eight burning ships into the midst of the Spanish fleet to set it on fire. Blocked on one side, the Spanish ships could only drift away, their crews in panic and disorder. Before the Armada could regroup, the English attacked again on August 8.

Although the Spaniards made a valiant effort to fight back, the fleet suffered extensive damage. During the eight hours of battle, the Armada drifted perilously close to the rocky coastline. At the moment when it seemed that the Spanish ships would be driven onto the English shore, the wind shifted, and the Armada drifted out into the North Sea. The Spaniards recognized the superiority of the English fleet and returned home, defeated.

12. Sir Francis Drake added wealth to the treasury and diminished Spain's _____

- (a) unlimited power
- (b) unrestricted growth
- (c) territory
- (d) treaties

13. King Philip recruited many _____ soldiers and sailors

- (a) warlike
- (b) strong
- (c) accomplished
- (d) timid

14. The _____ Armada set sail on May 9, 1588

- (a) complete
- (b) warlike
- (c) independent
- (d) isolated

15. The two battles left the Spanish fleet _____

- (a) open to change
- (b) triumphant
- (c) open to attack
- (d) defeated

16. The Armada was _____ on one side

- (a) closed off
- (b) damaged
- (c) alone
- (d) circled

The word euthanasia is of Greek origin and literally means "a good death." The American Heritage Dictionary defines it as "the act of killing a person painlessly for reasons of mercy." Such killing can be done through active means, such as administering a lethal injection, or by passive means, such as withholding medical care or food and water.

In recent years in the United States, there have been numerous cases of active euthanasia in the news. They usually involve the deliberate killing of ill or incapacitated persons by relatives or friends who plead that they can no longer bear to see their loved ones suffer. Although such killings are a crime, the perpetrators are often dealt with leniently by our legal system, and the media usually portrays them as compassionate heroes

Model Test Paper 64
General Study Paper II

<p>who take personal risks to save another from unbearable suffering.</p> <p>The seeming acceptance of active forms of euthanasia is alarming, but we face a bigger, more insidious threat from passive forms of euthanasia. Every year, in hospitals and nursing homes around the country, there are growing numbers of documented deaths caused by caregivers withholding lifesustaining care, including food and water, from vulnerable patients who cannot speak for themselves.</p> <p>While it is illegal to kill someone directly, for example with a gun or knife, in many cases the law has put its stamp of approval on causing death by omitting needed care. Further, many states have "living will" laws designed to protect those who withhold treatment, and there have been numerous court rulings which have approved of patients being denied care and even starved and dehydrated to death.</p> <p>Because such deaths occur quietly within the confines of hospitals and nursing homes, they can be kept hidden from the public. Most euthanasia victims are old or very ill, so their deaths might be attributed to a cause other than the denial of care that really killed them. Further, it is often relatives of the patient who request that care be withheld. In one court case, the court held that decisions to withhold life sustaining care may be made not only by close family members but also by a number of third parties, and that such decisions need not be reviewed by the judicial system if there is no disagreement between decision makers and medical staff. The court went so far as to rule that a nursing home may not refuse to participate in the fatal withdrawal of food and water from an incompetent patient!</p> <p>"Extraordinary" or "heroic" treatment need not be used when the chance for recovery is poor and medical intervention would serve only to prolong the dying process. But to deny customary and reasonable care or to deliberately starve or dehydrate someone because he or she is very old or very ill should not be permitted. Most of the cases coming before the courts do not involve withholding heroic measures from imminently dying people, but rather they seek approval for denying basic care, such as administration of food and water, to people who are not elderly or terminally ill, but who are permanently incapacitated. These people could be expected to live indefinitely, though in an impaired state, if they were given food and water and minimal treatment.</p> <p>No one has the right to judge that another's life is not worth living. The basic right to life should not</p>	<p>be abridged because someone decides that someone else's quality of life is too low. If we base the right to life on quality of life standards, there is no logical place to draw the line.</p> <p>To protect vulnerable patients, we must foster more positive attitudes towards people with serious and incapacitating illnesses and conditions. Despite the ravages of their diseases, they are still our fellow human beings and deserve our care and respect. We must also enact positive legislation that will protect vulnerable people from those who consider their lives meaningless or too costly to maintain and who would cause their deaths by withholding life-sustaining care such as food and water</p> <p>17. The tone of the author can best be described as</p> <p>(a) pleading</p> <p>(b) argumentative</p> <p>(c) compassionate</p> <p>(d) emphatic</p> <p>18. In paragraph 3, the author finds starvation and dehydration induced euthanasia is to be "more insidious" because</p> <p>(a) euthanasia is legally considered to be a criminal act</p> <p>(b) the public's attitude toward euthanasia is becoming more positive</p> <p>(c) it often involves those who cannot protest</p> <p>(d) the patient has asked to die with dignity</p> <p>19. As used in paragraph 3, what is the best synonym for insidious?</p> <p>(a) mischievous</p> <p>(b) treacherous</p> <p>(c) seductive</p> <p>(d) apparent</p> <p>20. The author maintains that death by withholding care is</p> <p>(a) largely confined to hospitals</p> <p>(b) largely confined to the terminally ill</p>
--	---

Model Test Paper 64
General Study Paper II

<p>(c) often requested by family members</p> <p>(d) approved by living wills</p> <p>21. As used in paragraph 7, which is the best definition of abridged?</p> <p>(a) trimmed</p> <p>(b) curtailed</p> <p>(c) lengthened</p> <p>(d) extended</p> <p>22. Using the passage as a guide, it can be inferred that the author would find euthanasia less objectionable in cases in which</p> <p>I. the patient's death is imminent</p> <p>II. the patient has left instructions in a living will not to provide care</p> <p>III. the patient refuses to accept nourishment</p> <p>(a) I only</p> <p>(b) II only</p> <p>(c) I and II only</p> <p>(d) I, II and III</p> <p>23. The main idea of paragraph 7 is that</p> <p>(a) lawyers will be unable to prosecute or defend caregivers</p> <p>(b) no comprehensive right or wrong definition of euthanasia will exist</p> <p>(c) using a subjective standard will make the decision to end an individual's life arbitrary</p> <p>(d) no boundary will exist between euthanasia and care omission</p> <p>24. In the final paragraph the author writes, "Despite the ravages of their diseases, they are still our fellow human beings and deserve our care and respect." The main purpose of this statement is to</p> <p>(a) prove a previous argument</p> <p>(b) illustrate an example</p> <p>(c) gainsay a later statement</p> <p>(d) justify an earlier statement</p>	<p>The full-time unemployment rate cannot be determined with great precision. One thing is certain: it cannot be zero or even close to zero. A zero unemployment rate would mean that no one ever entered or re-entered the labor force, that no one ever quit a job or was laid off, and that for new entrants or re-entrants, the process of searching for a job consumed no time. Moreover, full-time employment cannot be defined as an equality between the number of unemployed persons and the number of unfilled jobs. By this definition, almost any unemployment rate could be consistent with the full-time employment rate.</p> <p>The customary definition of the full-time U.S. unemployment rate is the lowest rate of unemployment that can be attained without resulting in an accelerated rate of inflation, given the existing economic conditions. However, no one can be sure exactly what the unemployment rate is, based on this definition, since it is not possible to predict exactly how great a change in the rate of inflation will be associated with any given change in the unemployment rate. In the early 1960s, President Kennedy's Council of Economic Advisors (CEA) determined that 4 percent was the best estimate of the full-time U.S. unemployment rate. That rate was based on data collected during the period from mid-1955 to mid-1957, when the U.S. unemployment rate fluctuated around an average of 4.1 percent and the consumer price index advanced at an average rate of 2.5 percent per year. Although a 4-percent U.S. unemployment rate may have been consistent with an acceptably low rate of inflation in the mid-1950s, by the 1960s this proposition had become increasingly doubtful. Our experience since then has been such that those who accept the customary definition of the full-time U.S. unemployment rate now consider 4.5 percent to be the optimal rate under the existing circumstances.</p> <p>The principal reason for this upward adjustment in the full-time U.S. unemployment rate is the changed composition of the labor force. As the labor force becomes increasingly composed of elderly people and women, the number of workers has increased. Similarly, the number of workers who are now eligible to collect benefits has increased. To the extent that these changes have increased voluntary and involuntary layoff rates and the average length of time unemployed persons spend looking for work, the full-time unemployment rate has risen.</p> <p>25. The passage states that the full-time unemployment rate represents</p>
--	--

Model Test Paper 64
General Study Paper II

<p>(a) A rate consistent with the greatest number of job opportunities for the greatest number of workers</p> <p>(b) The greatest degree of stability in the placement of the labor force that is practically attainable</p> <p>(c) A figure below which unemployment is unlikely to fall without having negative economic effects</p> <p>(d) an ideal matching of unemployed workers with the number and type of unfilled jobs available</p> <p>26. According to the passage, all of the following factors must be considered in estimating the full-time unemployment rate EXCEPT</p> <p>(a) The percentage of women in the work force</p> <p>(b) The ratio of the number of unemployed workers to the number of vacant positions</p> <p>(c) The strength of inflationary tendencies in the economic system</p> <p>(d) The number of young people in the job market</p> <p>27. The author is most likely a(n)</p> <p>(a) politician</p> <p>(b) economist</p> <p>(c) statistician</p> <p>(d) journalist</p> <p>28. The author believes that a zero unemployment rate is</p> <p>(a) imminent</p> <p>(b) plausible</p> <p>(c) convincing</p> <p>(d) impossible</p> <p>29. The purpose of the third paragraph is to</p> <p>(a) explain how unemployment works</p> <p>(b) make a prediction about the unemployment rate</p> <p>(c) provide evidence for a statement made in paragraph 2</p>	<p>(d) contribute to the overall message of the passage</p> <p>30. The passage implies that the extension of unemployment insurance to new groups of workers and the lengthening of the period for benefit payments may have encouraged</p> <p>I. Layoffs of workers by employers II. Abandonment of unsatisfactory jobs by employees III. Longer periods of job hunting by unemployed workers</p> <p>(a) I only</p> <p>(b) I and II only</p> <p>(c) I and III only</p> <p>(d) I, II, and III</p> <p>31. The passage provides information to answer which of the following questions?</p> <p>(a) Why is a zero unemployment rate unlikely ever to be attained?</p> <p>(b) What is the likely future trend of the full-employment unemployment rate?</p> <p>(c) Why has the percentage of younger workers in the job market increased?</p> <p>(d) What rate of inflation is generally considered to be the highest acceptable rate?</p> <p>32. The author's attitude toward the existence of a zero unemployment rate is one of</p> <p>(a) perplexity</p> <p>(b) uncertainty</p> <p>(c) suspicion</p> <p>(d) indignation</p> <p>33. The purpose of the second paragraph is to</p> <p>(a) explain the complex process in which a term was defined</p> <p>(b) express doubt about the validity of a term</p> <p>(c) provide statistical evidence for the resolution of a conflict</p> <p>(d) show the role of government in creating unemployment.</p>
--	---

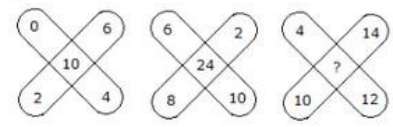
Model Test Paper 64
General Study Paper II

<p>34. Mathematics is more abstract than natural philosophy but less abstract than metaphysics. Optics is more abstract than natural philosophy but less abstract than mathematics. Optics is more abstract than metaphysics. If the first two statements are true, the third is</p> <p>(a) uncertain (b) false (c) true (d)</p> <p>35. Hamburgers are more enjoyable than yogurt but less enjoyable than tuna steak. Tuna steak is more enjoyable than bacon. Bacon is less enjoyable than hamburgers. If the first two statements are true, the third is</p> <p>(a) uncertain (b) false (c) true (d)</p> <p>36. Cigars have oilier smoke than cigarettes but less oily smoke than pipes. Cornhusks have oilier smoke than pipes. Cigarettes have less oily smoke than cornhusks. If the first two statements are true, the third is</p> <p>(a) true (b) false (c) uncertain (d)</p> <p>37. Milk is healthier than apple juice and less healthy than carrot juice. Apple juice is healthier than syrup water. Syrup water is less healthy than milk. If the first two statements are true, the third is</p> <p>(a) false (b) uncertain (c) true (d)</p>	<p>38. Cajetan is more logical than Sylvester. John is less logical than Cajetan but more logical than Francisco. Francisco is less logical than Cajetan. If the first two statements are true, the third is</p> <p>(a) uncertain (b) true (c) false (d)</p> <p>39. Symphonies are more edifying than plays but less edifying than organ concerts. Silence is more edifying than organ concerts. Plays are less edifying than silence. If the first two statements are true, the third is</p> <p>(a) false (b) uncertain (c) true (d)</p> <p>40. CRIME : PUNISHMENT</p> <p>(a) lawyer : judge (b) court : room (c) accused : defendant (d) homicide : penalty</p> <p>41. K/T : 11/20 :: J/R : ?</p> <p>(a) 10/18 (b) 11/19 (c) 10/8 (d) 9/10</p>
--	--

Model Test Paper 64
General Study Paper II

<p>42. A man takes twice as long to row a distance against the stream as to row the same distance in favour of the stream. The ratio of the speed of the boat (in still water) and the stream is</p> <p>(a) 2 : 1 (b) 3 : 1 (c) 3 : 2 (d) 4 : 3</p> <p>43. Look carefully for the pattern, and then choose which pair of numbers comes next 14 14 26 26 38 38 50</p> <p>(a) 60 72 (b) 50 62 (c) 50 72 (d) 62 62</p> <p>44. Look carefully for the pattern, and then choose which pair of numbers comes next 44 41 38 35 32 29 26</p> <p>(a) 24 21 (b) 22 19 (c) 23 19 (d) 23 20</p> <p>45. A person takes a loan of 200 at 5% simple interest. He returns 100 at the end of 1 year. In order to clear his dues at the end of 2 years, he would pay</p> <p>(a) 105 (b) 110 (c) 115 (d) 115.50</p> <p>46. Statement: Should the prestigious people who have committed crime unknowingly, be met with special treatment? Arguments:</p>	<p>1. Yes. The prestigious people do not commit crime intentionally 2. No. It is our policy that everybody is equal before the law</p> <p>(a) Only argument I is strong (b) Only argument II is strong (c) Either I or II is strong (d) Neither I nor II is strong</p> <p>47. Statement: Can pollution be controlled? Arguments:</p> <p>1. Yes. If everyone realizes the hazards it may create and cooperates to get rid of it, pollution may be controlled 2. No. The crowded highways, factories and industries and an ever-growing population eager to acquire more and more land for constructing houses are beyond control</p> <p>(a) Only argument I is strong (b) Only argument II is strong (c) Either I or II is strong (d) Neither I nor II is strong</p> <p>48. Statements: All those political prisoners were released on bail who had gone to jail for reasons other than political reasons. Bail was not granted to persons involved in murders Conclusions:</p> <p>1. No political - prisoner had committed murder 2. Some politicians were not arrested</p> <p>(a) Only conclusion I follows (b) Only conclusion II follows (c) Either I or II follows (d) Neither I nor II follows</p> <p>49. Statements: Modern man influences his destiny by the choice he makes unlike in the past Conclusions:</p> <p>1. Earlier there were fewer options available to man</p>
--	---

Model Test Paper 64
General Study Paper II

<p>2. There was no desire in the past to influence the destiny</p> <p>(a) Only conclusion I follows (b) Only conclusion II follows (c) Either I or II follows (d) Neither I nor II follows</p> <p>For questions 50 to 53 choose the answer which is a necessary part of the given word</p> <p>50. culture</p> <p>(a) civility (b) education (c) agriculture (d) customs</p> <p>51. knowledge</p> <p>(a) school (b) teacher (c) textbook (d) learning</p> <p>52. domicile</p> <p>(a) tenant (b) dwelling (c) kitchen (d) house</p> <p>53. vertebrate</p> <p>(a) backbone (b) reptile (c) mammal (d) animal</p>	<p>54. People speculate when they consider a situation and assume something to be true based on inconclusive evidence. Which situation below is the best example of Speculation ?</p> <p>(a) Francine decides that it would be appropriate to wear jeans to her new office on Friday after reading about "Casual Fridays" in her employee handbook (b) Mary spends thirty minutes sitting in traffic and wishes that she took the train instead of driving (c) After consulting several guidebooks and her travel agent, Jennifer feels confident that the hotel she has chosen is first-rate (d) When Emily opens the door in tears, Theo guesses that she's had a death in her family</p> <p>55. Posthumous Publication occurs when a book is published after the author's death. Which situation below is the best example of Posthumous Publication ?</p> <p>(a) Richard's illness took his life before he was able to enjoy the amazing early reviews of his novel (b) Melissa's publisher cancels her book contract after she fails to deliver the manuscript on time (c) Clarence never thought he'd live to see the third book in his trilogy published (d) Elizabeth is honored with a prestigious literary award for her writing career and her daughter accepts the award on behalf of her deceased mother</p> <p>56.</p> <p>Which one will replace the question mark ?</p>  <p>(a) 36 (b) 48 (c) 38 (d) 30</p>
---	--

Model Test Paper 64
General Study Paper II

57. BCB, DED, FGF, HIH, ____

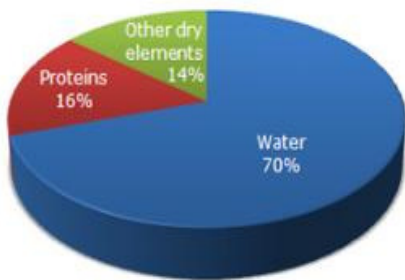
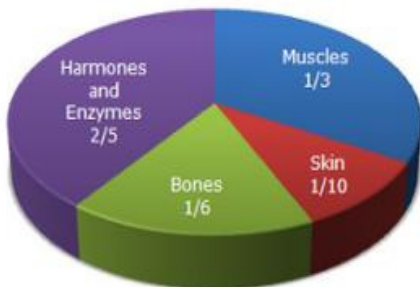
- (a) JKJ
- (b) HJH
- (c) IJI
- (d) JHJ

58. P5QR, P4QS, P3QT, _____, P1QV

- (a) PQW
- (b) PQV2
- (c) P2QU
- (d) PQ3U

Study the following pie-diagrams carefully and answer the questions given below it

Percentage Composition of Human Body



59. What percent of the total weight of human body is equivalent to the weight of the proteins in skin in human body?

- (a) 0.016

- (b) 1.6
- (c) 0.16
- (d) Data inadequate

60. What will be the quantity of water in the body of a person weighing 50 kg?

- (a) 20 kg
- (b) 35 kg
- (c) 41 kg
- (d) 42.5 kg

61. What is the ratio of the distribution of proteins in the muscles to that of the distribution of proteins in the bones?

- (a) 1 : 18
- (b) 1 : 2
- (c) 2 : 1
- (d) 18 : 1

62. To show the distribution of proteins and other dry elements in the human body, the arc of the circle should subtend at the centre an angle of

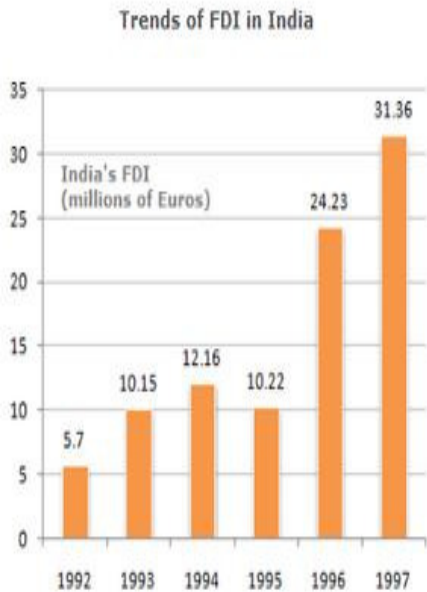
- (a) 54°
- (b) 126°
- (c) 108°
- (d) 252°

63. In the human body, what part is made of neither bones nor skin?

- (a) 1/40
- (b) 3/80
- (c) 2/5
- (d) None of these

Model Test Paper 64
General Study Paper II

The following bar chart shows the trends of foreign direct investments(FDI) into India from all over the world



64. What was the ratio of investment in 1997 over the investment in 1992 ?

- (a) 5.50
- (b) 5.36
- (c) 5.64
- (d) 5.75

65. What was absolute difference in the FDI to India in between 1996 and 1997 ?

- (a) 7.29
- (b) 7.13
- (c) 8.13
- (d) None of these

66. If India FDI from OPEC countries was proportionately the same in 1992 and 1997 as the total FDI from all over the world and if the FDI in 1992 from the OPEC countries was Euro 2 million. What was the amount of FDI from the OPEC countries in 1997 ?

- (a) 11
- (b) 10.72
- (c) 11.28
- (d) 11.5

67. Which year exhibited the highest growth in FDI in India over the period shown ?

- (a) 1993
- (b) 1994
- (c) 1995
- (d) 1996

68. What was India's total FDI for the period shown in the figure ?

- (a) 93.82
- (b) 93.22
- (c) 93.19
- (d) None of these

69. Statement: As stated in the recent census report the female to male ratio is alarmingly low

Courses of Action

1. The government should conduct another census to verify the results
2. The government should immediately issue orders to all the departments to encourage people to improve the ratio

- (a) Only I follows
- (b) Only II follows
- (c) Either I or II follows
- (d) Neither I nor II follows

70. Statement: Four districts in State A have been experiencing severe drought for the last three years resulting into exodus of people from these districts

Courses of Action

1. The government should immediately start food for work programme in the district to put a halt to the exodus

Model Test Paper 64
General Study Paper II

<p>2. The government should make since efforts to provide drinking/potable water to these districts</p> <p>(a) Only I follows (b) Only II follows (c) Either I or II follows (d) Both I and II follow</p> <p>71. Statements</p> <p>1. All the schools in the area had to be kept closed for most part of the week 2. Many parents have withdrawn their children from the local schools</p> <p>(a) Statement I is the cause and statement II is its effect (b) Statement II is the cause and statement I is its effect (c) Both the statements I and II are independent causes (d) Both the statements I and II are effects of independent causes</p> <p>72. Statements</p> <p>1. There is unprecedented increase in the number of young unemployed in comparison to the previous year 2. A large number of candidates submitted applications against an advertisement for the post of manager issued by a bank</p> <p>(a) Statement I is the cause and statement II is its effect (b) Statement II is the cause and statement I is its effect (c) Both the statements I and II are independent causes (d) Both the statements I and II are effects of independent causes</p> <p>73. Here are some words translated from an artificial language</p> <p>agnoscrenia means poisonous spider delanocrenia means poisonous snake agnosdeery means brown spider</p>	<p>Which word could mean "black widow spider"?</p> <p>(a) deeryclostagnos (b) agnosdelano (c) agnosvitriblunin (d) trymuttiagnos</p> <p>74. Here are some words translated from an artificial language</p> <p>moolokarn means blue sky wilkospadi means bicycle race moolowilko means blue bicycle</p> <p>Which word could mean "racecar"?</p> <p>(a) wilkozwet (b) spadiwilko (c) moolobreil (d) spadivolo</p> <p>75. Out of the following four group of letters three are similar in a certain way while one is different. Select the one which is different from the others</p> <p>(a) CFHI (b) HKMN (c) SVXY (d) LNPR</p> <p>76. Out of the following four numbers three are similar in a certain way while one is different. Select the one which is different from the others</p> <p>(a) 160 (b) 240 (c) 320 (d) 120</p> <p>77. Select the numeral pair / group which is different from others</p> <p>(a) 70 - 140 (b) 80 - 150</p>
---	---

Model Test Paper 64
General Study Paper II

(c) 14 - 21

(d) 35 - 42

78. In a certain code GARIMA is written as 725432 and TINA is written as 6482. How is MARTINA written in that code?

(a) 3265842

(b) 3645862

(c) 3658426

(d) 3256482

79. If JOSEPH is coded as FKOALD, the GEORGE will be coded as

(a) CAKNIT

(b) CADMNO

(c) JAKINS

(d) CAKNCA

80. Six friends A, B, C, D, E and F are sitting in a closed circle facing the centre. A is facing D. C is between A and B. F is between E and A. Who is to the immediate left of B?

(a) C

(b) E

(c) A

(d) D

Model Test Paper 64
General Study Paper II

Answer Sheet

	A	B	C	D		A	B	C	D		A	B	C	D		A	B	C	D
1	<input type="radio"/>	<input type="radio"/>	<input type="radio"/>	<input type="radio"/>	21	<input type="radio"/>	<input type="radio"/>	<input type="radio"/>	<input type="radio"/>	41	<input type="radio"/>	<input type="radio"/>	<input type="radio"/>	<input type="radio"/>	61	<input type="radio"/>	<input type="radio"/>	<input type="radio"/>	<input type="radio"/>
2	<input type="radio"/>	<input type="radio"/>	<input type="radio"/>	<input type="radio"/>	22	<input type="radio"/>	<input type="radio"/>	<input type="radio"/>	<input type="radio"/>	42	<input type="radio"/>	<input type="radio"/>	<input type="radio"/>	<input type="radio"/>	62	<input type="radio"/>	<input type="radio"/>	<input type="radio"/>	<input type="radio"/>
3	<input type="radio"/>	<input type="radio"/>	<input type="radio"/>	<input type="radio"/>	23	<input type="radio"/>	<input type="radio"/>	<input type="radio"/>	<input type="radio"/>	43	<input type="radio"/>	<input type="radio"/>	<input type="radio"/>	<input type="radio"/>	63	<input type="radio"/>	<input type="radio"/>	<input type="radio"/>	<input type="radio"/>
4	<input type="radio"/>	<input type="radio"/>	<input type="radio"/>	<input type="radio"/>	24	<input type="radio"/>	<input type="radio"/>	<input type="radio"/>	<input type="radio"/>	44	<input type="radio"/>	<input type="radio"/>	<input type="radio"/>	<input type="radio"/>	64	<input type="radio"/>	<input type="radio"/>	<input type="radio"/>	<input type="radio"/>
5	<input type="radio"/>	<input type="radio"/>	<input type="radio"/>	<input type="radio"/>	25	<input type="radio"/>	<input type="radio"/>	<input type="radio"/>	<input type="radio"/>	45	<input type="radio"/>	<input type="radio"/>	<input type="radio"/>	<input type="radio"/>	65	<input type="radio"/>	<input type="radio"/>	<input type="radio"/>	<input type="radio"/>
6	<input type="radio"/>	<input type="radio"/>	<input type="radio"/>	<input type="radio"/>	26	<input type="radio"/>	<input type="radio"/>	<input type="radio"/>	<input type="radio"/>	46	<input type="radio"/>	<input type="radio"/>	<input type="radio"/>	<input type="radio"/>	66	<input type="radio"/>	<input type="radio"/>	<input type="radio"/>	<input type="radio"/>
7	<input type="radio"/>	<input type="radio"/>	<input type="radio"/>	<input type="radio"/>	27	<input type="radio"/>	<input type="radio"/>	<input type="radio"/>	<input type="radio"/>	47	<input type="radio"/>	<input type="radio"/>	<input type="radio"/>	<input type="radio"/>	67	<input type="radio"/>	<input type="radio"/>	<input type="radio"/>	<input type="radio"/>
8	<input type="radio"/>	<input type="radio"/>	<input type="radio"/>	<input type="radio"/>	28	<input type="radio"/>	<input type="radio"/>	<input type="radio"/>	<input type="radio"/>	48	<input type="radio"/>	<input type="radio"/>	<input type="radio"/>	<input type="radio"/>	68	<input type="radio"/>	<input type="radio"/>	<input type="radio"/>	<input type="radio"/>
9	<input type="radio"/>	<input type="radio"/>	<input type="radio"/>	<input type="radio"/>	29	<input type="radio"/>	<input type="radio"/>	<input type="radio"/>	<input type="radio"/>	49	<input type="radio"/>	<input type="radio"/>	<input type="radio"/>	<input type="radio"/>	69	<input type="radio"/>	<input type="radio"/>	<input type="radio"/>	<input type="radio"/>
10	<input type="radio"/>	<input type="radio"/>	<input type="radio"/>	<input type="radio"/>	30	<input type="radio"/>	<input type="radio"/>	<input type="radio"/>	<input type="radio"/>	50	<input type="radio"/>	<input type="radio"/>	<input type="radio"/>	<input type="radio"/>	70	<input type="radio"/>	<input type="radio"/>	<input type="radio"/>	<input type="radio"/>
11	<input type="radio"/>	<input type="radio"/>	<input type="radio"/>	<input type="radio"/>	31	<input type="radio"/>	<input type="radio"/>	<input type="radio"/>	<input type="radio"/>	51	<input type="radio"/>	<input type="radio"/>	<input type="radio"/>	<input type="radio"/>	71	<input type="radio"/>	<input type="radio"/>	<input type="radio"/>	<input type="radio"/>
12	<input type="radio"/>	<input type="radio"/>	<input type="radio"/>	<input type="radio"/>	32	<input type="radio"/>	<input type="radio"/>	<input type="radio"/>	<input type="radio"/>	52	<input type="radio"/>	<input type="radio"/>	<input type="radio"/>	<input type="radio"/>	72	<input type="radio"/>	<input type="radio"/>	<input type="radio"/>	<input type="radio"/>
13	<input type="radio"/>	<input type="radio"/>	<input type="radio"/>	<input type="radio"/>	33	<input type="radio"/>	<input type="radio"/>	<input type="radio"/>	<input type="radio"/>	53	<input type="radio"/>	<input type="radio"/>	<input type="radio"/>	<input type="radio"/>	73	<input type="radio"/>	<input type="radio"/>	<input type="radio"/>	<input type="radio"/>
14	<input type="radio"/>	<input type="radio"/>	<input type="radio"/>	<input type="radio"/>	34	<input type="radio"/>	<input type="radio"/>	<input type="radio"/>	<input type="radio"/>	54	<input type="radio"/>	<input type="radio"/>	<input type="radio"/>	<input type="radio"/>	74	<input type="radio"/>	<input type="radio"/>	<input type="radio"/>	<input type="radio"/>
15	<input type="radio"/>	<input type="radio"/>	<input type="radio"/>	<input type="radio"/>	35	<input type="radio"/>	<input type="radio"/>	<input type="radio"/>	<input type="radio"/>	55	<input type="radio"/>	<input type="radio"/>	<input type="radio"/>	<input type="radio"/>	75	<input type="radio"/>	<input type="radio"/>	<input type="radio"/>	<input type="radio"/>
16	<input type="radio"/>	<input type="radio"/>	<input type="radio"/>	<input type="radio"/>	36	<input type="radio"/>	<input type="radio"/>	<input type="radio"/>	<input type="radio"/>	56	<input type="radio"/>	<input type="radio"/>	<input type="radio"/>	<input type="radio"/>	76	<input type="radio"/>	<input type="radio"/>	<input type="radio"/>	<input type="radio"/>
17	<input type="radio"/>	<input type="radio"/>	<input type="radio"/>	<input type="radio"/>	37	<input type="radio"/>	<input type="radio"/>	<input type="radio"/>	<input type="radio"/>	57	<input type="radio"/>	<input type="radio"/>	<input type="radio"/>	<input type="radio"/>	77	<input type="radio"/>	<input type="radio"/>	<input type="radio"/>	<input type="radio"/>
18	<input type="radio"/>	<input type="radio"/>	<input type="radio"/>	<input type="radio"/>	38	<input type="radio"/>	<input type="radio"/>	<input type="radio"/>	<input type="radio"/>	58	<input type="radio"/>	<input type="radio"/>	<input type="radio"/>	<input type="radio"/>	78	<input type="radio"/>	<input type="radio"/>	<input type="radio"/>	<input type="radio"/>
19	<input type="radio"/>	<input type="radio"/>	<input type="radio"/>	<input type="radio"/>	39	<input type="radio"/>	<input type="radio"/>	<input type="radio"/>	<input type="radio"/>	59	<input type="radio"/>	<input type="radio"/>	<input type="radio"/>	<input type="radio"/>	79	<input type="radio"/>	<input type="radio"/>	<input type="radio"/>	<input type="radio"/>
20	<input type="radio"/>	<input type="radio"/>	<input type="radio"/>	<input type="radio"/>	40	<input type="radio"/>	<input type="radio"/>	<input type="radio"/>	<input type="radio"/>	60	<input type="radio"/>	<input type="radio"/>	<input type="radio"/>	<input type="radio"/>	80	<input type="radio"/>	<input type="radio"/>	<input type="radio"/>	<input type="radio"/>