

Model Test Paper 32  
General Study Paper II

---

DO NOT OPEN THIS BOOKLET UNTIL YOU ARE TOLD TO DO SO

---

TEST BOOKLET  
GENERAL STUDIES  
Paper-II

C

Time Allowed : Two Hours

Maximum Marks : 200

---

INSTRUCTIONS

1. IMMEDIATELY AFTER THE COMMENCEMENT OF THE EXAMINATION YOU SHOULD CHECK THAT THE TEST BOOKLET *DOES NOT* HAVE ANY UNPRINTED OR TORN OR MISSING PAGES OR ITEMS, ETC, IF SO, GET IT REPLACED BY A COMPLETE TEST BOOKLET.
2. **Please note that it is the candidate's responsibility to encode and fill in the Roll Number and Test Booklet Series A, B, C or D carefully and without any omission or discrepancy at the appropriate place in the OMR Answer Sheet. Any omission/discrepancy will render the Answer Sheet liable for rejection.**
3. You have to enter your Roll Number on the Test Booklet in the Box provided alongside . *DO NOT* write *anything else* on the Test Booklet.
4. This Test Booklet contains **80** items (questions). Each item comprises four responses (answers). You will select the response which you want to mark on the Answer Sheet. In case you feel that there is more than one correct response, mark the response which you consider the best. In any case, choose *ONLY ONE* response for each item.
5. You have to mark all your responses *ONLY* on the separate Answer Sheet provided.
6. **All** items carry equal marks.
7. Before you proceed to mark in the Answer Sheet the response to various items in the Test Booklet, you have to fill in some particulars in the Answer Sheet as per instructions sent to you with your Admission Certificate.
8. After you have completed filling in all your responses on the Answer Sheet and the examination has concluded, you should hand over to the invigilator only the *Answer Sheet*. You are permitted to take away with you the Test Booklet.
9. Sheets for rough work are appended in the Test Booklet at the end.
10. **Penalty for wrong Answers :**  
THERE WILL BE PENALTY FOR WRONG ANSWERS MARKED BY A CANDIDATE IN THE OBJECTIVE TYPE QUESTION PAPERS.  
(i) There are four alternatives for the answer to every question. For each question for which a wrong answer has been given by the candidate, **one-third** of the marks assigned to that question will be deducted as penalty.  
(ii) If a candidate gives more than one answer, it will be treated as a **wrong answer** even if one of the given answers happens to be correct and there will be same penalty as above to that question.  
(iii) If a question is left blank, i.e., no answer is given by the candidate, there will be **no penalty** for that question.

---

DO NOT OPEN THIS BOOKLET UNTIL YOU ARE TOLD TO DO SO

---

**Model Test Paper 32**  
**General Study Paper II**

<p>Men and women should be treated primarily as people. and not primarily as members of opposite sexes. Their shared humanity and common attributes should be stressed and not their gender difference. Neither sex should be stereotyped or arbitrarily assigned to a leading or secondary role. Women and men should be treated with the same respect, dignity and seriousness. Women should not be described by physical attributes when men are being described by mental attributes or professional position. Instead, both sexes should be dealt with in the same terms. References to a man's or woman's appearance, charm or intuition should be avoided when irrelevant.</p> <p>1. Men and women should be treated first</p> <p>(a) as human beings</p> <p>(b) as belonging to opposite sexes</p> <p>(c) in terms of their physical attributes</p> <p>(d) as stereotypes</p> <p>2. Dealing with both sexes "in the same terms" means</p> <p>(a) stereotyping both men and women</p> <p>(b) describing them by physical attributes</p> <p>(c) treating them equally</p> <p>(d) describing women by mental attributes</p> <p>3. All the suggestions in the passage are meant</p> <p>(a) to make women more powerful</p> <p>(b) to reduce the power of men</p> <p>(c) to minimise the possibility of conflict between men and women</p>	<p>(d) to remove gender discrimination</p> <p>Socrates used to move about the roads or stand in the market place all day long. He talked to anyone who cared to greet him. He argued and asked many questions. Sometimes he left his listeners in a very confused state of mind because he seemed to be questioning, doubting or trying to change things about which people had never really thought, but had taken for granted. Socrates believed that everyone should learn to think for himself. He believed that every one should have the power to see what was right, just, true and beautiful. He wanted Athens to be a perfect state and he believed that this could happen if every citizen educated his own mind to see what was right and noble.</p> <p>4. People were confused by Socrates' questions because</p> <p>(a) he asked them in the market place</p> <p>(b) the questions were addressed to anyone and everyone</p> <p>(c) he was argumentative and asked too many questions</p> <p>(d) the questions were on topics that people had never really thought about</p> <p>5. Socrates believed that everyone should learn</p> <p>(a) to read and write</p> <p>(b) to be wise</p> <p>(c) to think for himself</p> <p>(d) whatever was good and noble</p>
---	--

**Model Test Paper 32**  
**General Study Paper II**

<p>6. Socrates thought that Athens would become a perfect state if</p> <p>(a) its people attained perfection</p> <p>(b) everyone became educated in the arts</p> <p>(c) its people did great things</p> <p>(d) its people developed a sense of right and just</p> <p>The difficulty of keeping the glasses clean is one of the minor discomforts of glasses, but it is nevertheless a most annoying one. On damp and rainy days, the atmosphere clouds them. On hot days the perspiration from the body may have a similar effect. On cold days, they are often clouded by the moisture of the breath. Everyday they are so subject to contamination by dust and moisture, the touch of the fingers and to unavoidable handling, that they seldom afford an absolutely unobstructed view of the objects regarded.</p> <p>7. The reason why glasses seldom afford an absolutely clear view of objects is that</p> <p>(a) Glasses are always contaminated by the atmosphere</p> <p>(b) People use them carelessly</p> <p>(c) It is very difficult to keep them absolutely clear</p> <p>(d) Of handling by dirty fingers</p> <p>8. What is the major cause of poor view afforded by glasses on a hot day?</p> <p>(a) Moisture in the atmosphere</p> <p>(b) Dampness of the weather</p> <p>(c) perspiration from the body</p>	<p>(d) Contamination by the touch of fingers</p> <p>9. What is the general effect produced on the reader on reading the above passage?</p> <p>(a) He knows more about weather</p> <p>(b) He knows more about glasses</p> <p>(c) He is warned against handling glasses carelessly</p> <p>(d) He is persuaded not to use glasses, if avoidable</p> <p>On the day of the Christmas concert the entire orchestra entered the gymnasium where a large throng of pupils and parents were gathered. The school choir had gathered on the balcony with candles and the orchestra began "Silent Night". Slowly the lights dimmed, leaving us in darkness except for the hundred glimmering candles held by the choir as they softly sang the carol. Slowly, and just as dramatically, the orchestra began to falter - in direct proportion to the dimming of the lights, when the lights faded out completely, so did the orchestra, because no one read his music. Except for me, for my music was in my head. From a corner of the stage, the sound of my violin filled the gymnasium. The choir and I went through verse after verse. When it was all over, the ovation was positively thunderous.</p> <p>10. The narrator is</p> <p>(a) a priest</p> <p>(b) the leader of pupils</p> <p>(c) an instrumentalist</p> <p>(d) a singer</p>
---	---

**Model Test Paper 32**  
**General Study Paper II**

<p>11. Why did the orchestra begin to falter?</p> <p>(a) The orchestra was not led properly</p> <p>(b) The dimming of lights caused it</p> <p>(c) The violin dominated the other instruments</p> <p>(d) There was no coordination in the chorus</p> <p>12. How could the choir sing when the lights dimmed?</p> <p>(a) They had memorized the songs</p> <p>(b) They could sing in candle light</p> <p>(c) There was some natural light at the choir side</p> <p>(d) The narrator helped them sing</p> <p>13. The statements that "the ovation was positively thunderous" means that</p> <p>(a) There was a joyful expression of appreciation by the people</p> <p>(b) The audience joined the singers and sang aloud</p> <p>(c) The audience made circles and danced in ecstasy</p> <p>(d) The audience made a noise resembling thunder</p> <p>14. How was it possible for the narrator to continue with his music?</p> <p>(a) He was at the corner of the stage where he could get light</p> <p>(b) His instrument did not need electric power</p>	<p>(c) He played in candle light</p> <p>(d) He did not need to read his music</p> <p>Patriotism is easy enough during war. For one thing, people become actively conscious of their country when it is threatened. For another, since everyone or nearly everyone feels it, there is a strong collective emotion flowing through the country. But when the war is over, the country recedes from the consciousness, and it is rarely even at the back of the mind. The question, "Am I doing any good to the country?" doesn't occur to the mind; and even the question, "Is what I am doing good or bad for the country?" occurs only rarely. A limited patriotism is better than none, but it is not enough.</p> <p>15. The author says that one reason why patriotism is easy during war-time is that</p> <p>(a) war is the only factor responsible for arousing patriotism</p> <p>(b) when the country is in danger, we become conscious of it</p> <p>(c) we become patriotic when we are in a fighting mood</p> <p>(d) patriotism is always in the consciousness</p> <p>16. Another reason suggested by the author for the emergence of patriotic feeling during war-time is that</p> <p>(a) patriotism is specially required during war-time</p> <p>(b) we become deeply conscious of danger to ourselves during war-time</p> <p>(c) patriotism become contagious because one finds a lot of other people feeling patriotism</p>
---	--

**Model Test Paper 32**  
**General Study Paper II**

<p>(d) every one feels that he/she should strive to protect the others</p> <p>17. When the threat of war is over,</p> <p>(a) there is no need for people to be interested in other's welfare</p> <p>(b) people do not consider it necessary to serve the country</p> <p>(c) people tend to become totally unmindful of national interests</p> <p>(d) people are generally anxious to serve the country</p> <p>18. When the author says that the country "recedes from the consciousness", he means to say that</p> <p>(a) people no longer feel that they belong to the country</p> <p>(b) people do not have the country clearly in the forefront of their mind</p> <p>(c) people are not capable of understanding what is good and desirable for them</p> <p>(d) the moral values which they have so far upheld would disappear from their minds</p> <p>19. By a "limited patriotism", the author refers to</p> <p>(a) the people's attitude of indifference to the welfare of their country</p> <p>(b) the attitude of people who love other countries as much as they love their own country</p> <p>(c) those who are self-centered and mainly concerned about their own welfare</p>	<p>(d) the attitude of people who are indifferent to the welfare of their country except during war-time</p> <p>Most people lead the lives that circumstances have thrust upon them. But Wilson had boldly taken the course of his life into his own hands. At 35, he had quit his job to lead a pleasant life on an exotic island with just enough money to last for twenty five years. Once, fifteen years after he had been on the island, I happened to meet him and enquired about his financial situation. He said, "It will carry me on till I am sixty." "But one cannot be sure of dying at sixty", I said. "Well..." he replied, "it depends on oneself, doesn't it"?</p> <p>20. According to the author, most people</p> <p>(a) do not allow circumstances to affect their lives</p> <p>(b) have fatalistic attitude towards life</p> <p>(c) do not know how to cope with their situation</p> <p>(d) do nothing to change the condition they live in</p> <p>21. Wilson's boldest decision was that he</p> <p>(a) quit his job</p> <p>(b) saved a lot of money to lead a pleasant life</p> <p>(c) preferred to live in isolation</p> <p>(d) wanted to live without depending on others</p> <p>22. "..... depends on oneself" suggests that Wilson, at 60, would</p> <p>(a) depend on his own resources</p> <p>(b) surrender himself to destiny</p>
--	--

**Model Test Paper 32**  
**General Study Paper II**

<p>(c) take away his own life</p> <p>(d) carry on living in the same way</p> <p>A soap opera is a kind of a sandwich, whose recipe is simple enough. Between thick slices of advertising, spread twenty minutes of dialogue, and predicament, villainy, and female suffering in equal measure, throw in a dash of nobility, sprinkle with tears, season with organ music, cover with a rich announcer sauce, and serve five times a week. It may also contain a teaser, a give-away, a contest offer, or a cowcatcher or hitch-hike for another of the sponsor's products. It is the hope of every advertiser to habituate the housewife to an engrossing narrative whose optimum length is forever and at the same time to saturate all levels of her consciousness with the miracle of a given product, so that she will be aware of it all the days of her life and mutter its name in her sleep.</p> <p>23. The second sentence of the passage contains the description of a/an</p> <p>(a) programme announcement</p> <p>(b) recipe for sandwich</p> <p>(c) advertisement</p> <p>(d) melodrama</p> <p>24. Which of the following accurately describes the author's style in the passage?</p> <p>(a) Scientific and objective style</p> <p>(b) Romantic style</p> <p>(c) Satirical style</p> <p>(d) Sentimental and melodramatic style</p>	<p>25. According to the author, the advertisers aim is at</p> <p>(a) educating and enlightening the housewives</p> <p>(b) brainwashing the housewives</p> <p>(c) selling their wares very cheap</p> <p>(d) offering pure and wholesome entertainment</p> <p>Slavery is a system under which certain persons are totally deprived of personal freedom and compelled to perform labor or services. Although outlawed in nearly all countries, slavery is still practiced in some parts of the world. The evidence for slavery predates written records. It can be found in almost all cultures and continents. Historically, most slaves were captured in wars but some persons were sold into slavery by their parents, or by themselves, as a means of surviving extreme conditions. Ancient Warfare often resulted in slavery for prisoners and their families. Captives were often considered the property of those who captured them and were looked upon as a prize of war. Those captured sometimes differed in ethnicity, nationality, religion, or race from their enslavers, but often were the same as the captors. The dominant group in an area might take captives and turn them into slaves. The possibility always existed of reversals of fortune at the height of the Roman Empire, when powerful nations fought among themselves, anyone could find himself enslaved.</p> <p>26. According to the passage, slavery</p> <p>(a) is a system in which the enslaved person has some amount of freedom</p> <p>(b) started with the establishment of the Roman Empire</p>
---	--

**Model Test Paper 32**  
**General Study Paper II**

<p>(c) was banned by international agreements between countries a long time ago</p> <p>(d) meant for some people surviving the conditions they had to endure</p> <p>27. It is stated in the passage that the practice of slavery</p> <p>(a) was the most common in the Roman Empire</p> <p>(b) goes back to ancient times</p> <p>(c) has been abolished by all nations now</p> <p>(d) still exists secretly in many communities today</p> <p>28. It can be understood from the passage that the captives of the wars in ancient times</p> <p>(a) were killed as soon as they were caught</p> <p>(b) were accepted as the property of the leader of the dominant group in an area</p> <p>(c) usually shared certain features in common with the ones who captured them</p> <p>(d) were mostly the civilians as the captured soldiers were quickly executed</p> <p>29. How many 4-letter words with or without meaning, can be formed out of the letters of the word, 'LOGARITHMS', if repetition of letters is not allowed?</p> <p>(a) 40</p> <p>(b) 400</p> <p>(c) 5040</p> <p>(d) 2520</p>	<p>30. A man buys a watch for Rs.1950 in cash and sells it for Rs.2200 at a credit of 1 year. If the rate of interests is 10% per annum, the man</p> <p>(a) gain Rs.55</p> <p>(b) gain Rs.30</p> <p>(c) loses Rs.30</p> <p>(d) gains Rs.50</p> <p>31. Sakshi can do a piece of work in 20 days. Tanya is 25% more efficient than Sakshi. The number of days taken by tanya to do the same piece of work is</p> <p>(a) 15</p> <p>(b) 16</p> <p>(c) 18</p> <p>(d) 25</p> <p>32. Sound is said to travel in air at about 1100 feet per second. A man hears the axe striking the tree, <math>11/5</math> seconds after he sees it strike the tree. How far is the man from the wood chopper?</p> <p>(a) 2197 ft</p> <p>(b) 2420 ft</p> <p>(c) 2500 ft</p> <p>(d) 2629 ft</p>
---	--

**Model Test Paper 32**  
**General Study Paper II**

<p>33. A invested some money in 10% stock at 96. If B wants to invest in an equality good 12% stock, he must purchase a stock worth of</p> <p>(a) Rs. 50</p> <p>(b) Rs. 50.20</p> <p>(c) Rs. 115.20</p> <p>(d) Rs. 125.40</p> <p>34. N number of persons decided to raise Rs. 3 lakhs by equal contribution from each. Had they contributed Rs. 50 each extra, the contribution would have been Rs. 3.25 lakhs. How many persons are there?</p> <p>(a) 400</p> <p>(b) 500</p> <p>(c) 550</p> <p>(d) 600</p> <p>35. The price of a T.V set worth Rs. 20,000 is to be paid in 20 instalments of Rs. 1000 each. If the rate of interest be 6% per annum, and the first instalments be paid at the time of purchase, then the value of the last instalments covering the interest as well will be</p> <p>(a) 1050</p> <p>(b) 2050</p> <p>(c) 3000</p> <p>(d) 19000</p>	<p>36. A cube of edge 5 cm is cut into cubes of each edge 1 cm. The ratio of the total surface area of one of the small cubes to that of the large cube is equal to</p> <p>(a) 1 : 5</p> <p>(b) 1 : 25</p> <p>(c) 1 : 125</p> <p>(d) 1 : 625</p> <p>37. A person takes a loan of Rs. 200 at 5% simple interest. He returns Rs. 100 at the end of 1 year. In order to clear his dues at the end of 2 years, he would pay</p> <p>(a) Rs. 105</p> <p>(b) Rs. 110</p> <p>(c) Rs. 115</p> <p>(d) Rs. 115.50</p> <p>38. AZ, CX, FU, ?</p> <p>(a) IR</p> <p>(b) IV</p> <p>(c) JQ</p> <p>(d) KP</p>
--	---



**Model Test Paper 32**  
**General Study Paper II**

<p>39. BD, GI, LN, QS, ?</p> <p>(a) TV</p> <p>(b) UW</p> <p>(c) WX</p> <p>(d) VX</p> <p>40. A, CD, GHI, ?, UVWXY</p> <p>(a) LMNO</p> <p>(b) MNO</p> <p>(c) MNOP</p> <p>(d) NOPQ</p> <p>41. JZZ, K4X, 17V, ?, H16R, M22P</p> <p>(a) L11S</p> <p>(b) L12T</p> <p>(c) L11T</p> <p>(d) L12S</p> <p>42. ba_ba_bac_acb_cbac</p> <p>(a) aacb</p> <p>(b) bbca</p> <p>(c) ccba</p> <p>(d) cbac</p>	<p>43. Find the odd one out</p> <p>(a) flourish</p> <p>(b) renovate</p> <p>(c) blossom</p> <p>(d) thrive</p> <p>44. In a certain code ADVENTURES is written as TRDESAUVEN. How is PRODUCED written in that code ?</p> <p>(a) IUIPGSSRNP</p> <p>(b) IUIPGSRSNR</p> <p>(c) IUIINGSSRRP</p> <p>(d) IRIPGSSNRR</p> <p>45. A told B, "The girl I met yesterday was the youngest daughter of the brother-in-law of my friend's mother." How is the girl related to A's friend?</p> <p>(a) Niece</p> <p>(b) Cousin</p> <p>(c) Friend</p> <p>(d) Daughter</p> <p>46. There are six persons A, B, C, D, E and F. C is the sister of F. B is the brother of E's husband. D is the father of A and grandfather of F. There are two fathers, three brothers and a mother in the group. Who is E's husband ?</p> <p>(a) A</p>
---	--

**Model Test Paper 32**  
**General Study Paper II**

(b) B	(b) 33
(c) C	(c) 35
(d) F	(d) 28
47. Khaled left the office last. Salim left before Fatima. Fatima left after Hassan. Hassan left before Salim. Faisal left after Fatima. Who left the office first?	50. Flight 945 passed over Paris at 04:45 and later over Amsterdam at 06:15. The distance between Paris and Amsterdam is 450 miles, what was the average speed of the aircraft?
(a) Salim	(a) 300mph
(b) Faisal	(b) 450mph
(c) Hassan	(c) 675mph
(d) Fatima	(d) 525mph
48. Peter is slow but Tim is even slower. Jacob is faster than Tim. Who is the slowest?	51. In the town of Idaville there are three major electronic stores. Last year MegaElectronics sold one and a half times as many televisions at Funtech. Funtech sold one-fifth more televisions than ElectroMall. ElectroMall sold 600 televisions last year. How many televisions did MegaElectronics sell last year?
(a) Peter	(a) 1080
(b) Jacob	(b) 1440
(c) Tim	(c) 1260
(d) All are equally slow	(d) 1320
49.	52. Three friends split an amount of money. Julie gets 268 dollars, Michael gets 200 dollars and Lily gets 40 percent. What is the amount?
<div style="background-color: #e0e0e0; padding: 10px;"><p>A = 10 B = 0 C = 5 D = 3 E = 15</p><math display="block">\frac{E}{C} + AB + AD - (BC)^C = ?</math></div>	(a) 820 dollars
(a) 13	

Model Test Paper 32  
General Study Paper II

(b) 720 dollars

(c) 760 dollars

(d) 780 dollars

53. A survey was conducted by the Department of Home Safety.  $\frac{4}{16}$  of the survey takers answered they had a grade 4 or higher security system installed at their home.  $\frac{3}{9}$  answered they had a grade 3 or lower home security system. 125 answered they had no home security system, which was the remaining option. How many answered they had a grade 4 or higher security system?

(a) 125

(b) 150

(c) 75

(d) 100

54. 3 pumps working 6 hours a day, can empty a water tank in 2 days. How many hours a day must 9 pumps work to empty the same tank in 1 day?

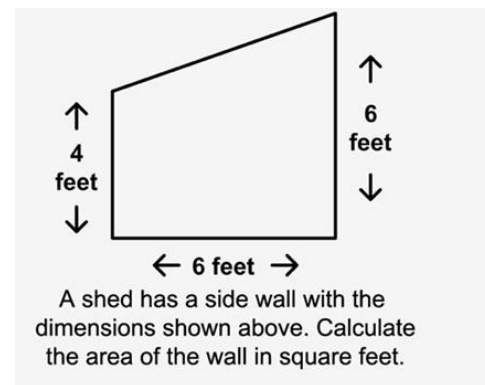
(a) 8

(b) 2

(c) 12

(d) 4

55.



(a) 30

(b) 33

(c) 36

(d) 27

56. Find the missing number:  
720, 120, 24, 6, ?

(a) 2

(b) 4

(c) 3

(d) -12

57. Find the missing number:  
5, 7, 15, 21, 45, ?

(a) 59

(b) 61

(c) 63

(d) 65

Model Test Paper 32  
General Study Paper II

58.

Find the missing number:

27	15	30	20	37
?	28	17	33	24

- (a) 40
- (b) 26
- (c) 14
- (d) 13

59.

The graph illustrates the monthly number (in thousands) of vehicles crossing the Jimitro Bridge.

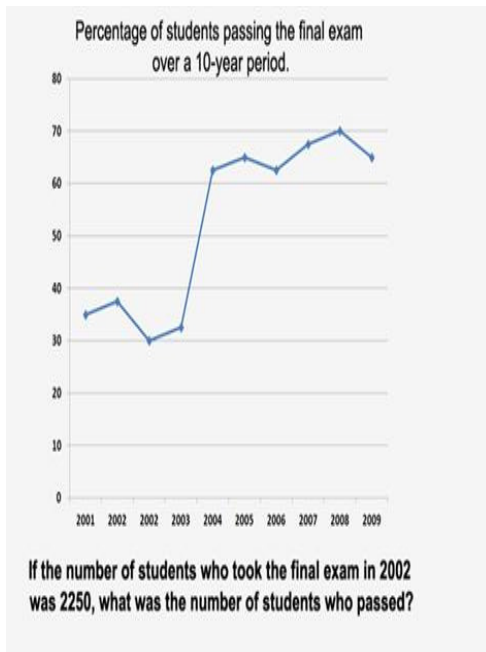


The highest decrease in traffic was between September and October.  
By how what percent did the traffic decrease?

- (a) 18%
- (b) 15%
- (c) 22%
- (d) 32%

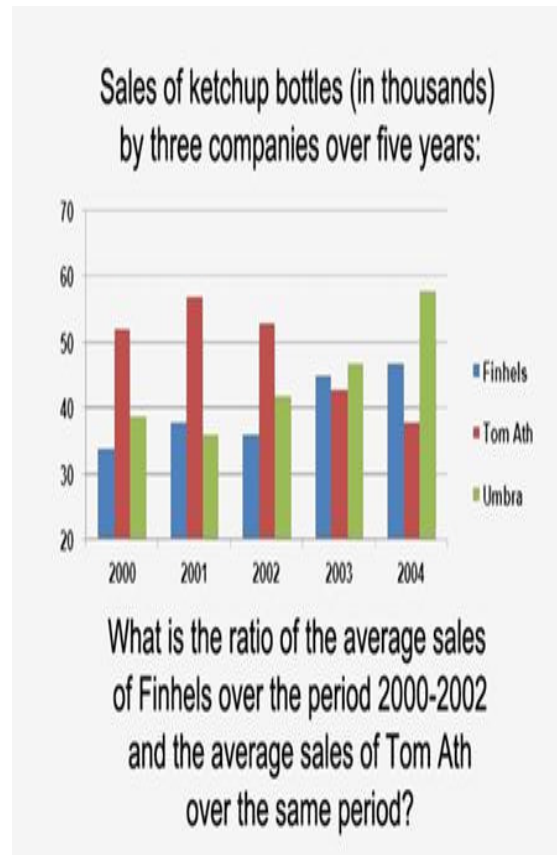
Model Test Paper 32  
General Study Paper II

60.



- (a) 787
- (b) 675
- (c) 565
- (d) 750

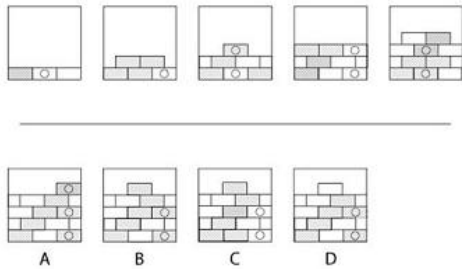
61.



- (a) 3:4
- (b) 1:1
- (c) 1:3
- (d) 2:3

**Model Test Paper 32**  
**General Study Paper II**

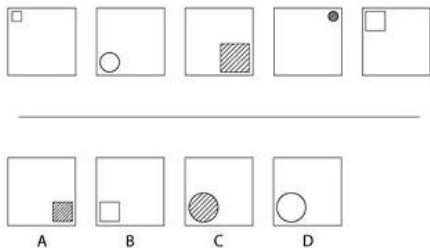
62.



What comes next in the sequence?

- (a)
- (b)
- (c)
- (d)

63.



What comes next in the sequence?

- (a)
- (b)

(c)

(d)

64. A company staff satisfaction survey revealed that 60% of staff provided negative responses on one or more question items on the survey. Of this 60% of staff,  $\frac{1}{2}$  stated low opportunities for advancement,  $\frac{1}{4}$  stated that payment and benefits were unsatisfactory and  $\frac{3}{8}$  stated that problems with their line manager were common. There are 3,461 members of staff at the company and the survey had an 86% response rate. How many members of staff stated that problems with line managers were common?

- (a) 660 members of staff
- (b) 670 members of staff
- (c) 680 members of staff
- (d) 690 members of staff

65. Gareth's household budget is £250.  $\frac{1}{2}$  of this budget is spent on rent,  $\frac{1}{2}$  of this budget is spent on rent, 12.5% is spent on bills and 27.5% is spent on food. Every month  $\frac{3}{4}$  of the budget not accounted for by rent, food and bills is placed in a savings account. How long would it take Gareth to save up €900 from his left over house hold budget?

- (a) 42 weeks
- (b) 44 weeks
- (c) 46 weeks
- (d) 48 weeks

**Model Test Paper 32**  
**General Study Paper II**

<p>66. An investor purchased 25 ounces of gold in 2007 for a total of £16,225. When the investor sold the metal in 2012, the price of gold per gram was €50.74. The profits gained from this transaction were used to buy silver at the market price of £27.57 per ounce. What is the largest amount of silver that the investor could purchase using profits generated from selling their gold? (1 gram – 0.035274 ounces).</p> <p>(a) 512 ounces of silver</p> <p>(b) 596 ounces of silver</p> <p>(c) 678 ounces of silver</p> <p>(d) 716 ounces of silver</p> <p>67. Architectural bronze is an alloy, typically composed of 57% copper, 3% lead and 40% zinc. The current price of copper is €3,670 per metric ton and the current price of zinc is £1,240 per metric ton. If a foundry has 1275 tons of lead, how much would it cost to purchase enough copper and zinc to produce the maximum amount of architectural bronze possible with the existing amount of lead?</p> <p>(a) 86,282,920 Pounds</p> <p>(b) 92,282,170 Pounds</p> <p>(c) 101,272,280 Pounds</p> <p>(d) 109,985,750 Pounds</p> <p>68. The wild population of Snow Leopards was recorded at 6,590 in 2003. At the time 34% of Wild Snow Leopards resided in China, 23% resided in Mongolia and 12.5% resided in India, with the remaining population residing in other Asian countries. By 2012, wild snow leopard populations had grown by 16% in China, 3.5% in Mongolia, decreased by 2.9% in India and remained</p>	<p>unchanged in other Asian countries. In 2012 and additional 600 Snow Leopards resided in Zoos, what was the total Snow Leopard population in 2012?</p> <p>(a) 7,578 Snow Leopards</p> <p>(b) 7,754 Snow Leopards</p> <p>(c) 7,956 Snow Leopards</p> <p>(d) 8,145 Snow Leopards</p> <p>69. Claire provides freelance consulting services at €30 per hour, with a 1 hour unpaid lunch break and paid overtime at 1.5 times the usual hourly rate. Her latest contract requires her to work from 8:30 am till 5:45 pm, for billable days, with an extra 1 and a half hours overtime per day. Assuming Clarie pays 30% in taxes on her income, how much will Clarie earn from her latest contract after tax?</p> <p>(a) 2,568.75 Pounds</p> <p>(b) 2,863.50 Pounds</p> <p>(c) 3,010.00 Pounds</p> <p>(d) 3,307.50 Pounds</p> <p>70. An Organization spends 5.5% of its annual training and development budget on evaluating the effectiveness of training programs. 65% of the money spent on evaluation is used to evaluate employee's immediate reaction to the training, using reaction sheets. <math>\frac{3}{4}</math> of the money spent on capturing reactions to the training programs is spent on analyzing and benchmarking the data collected. If the organization's training and development budget is £2.7 million per year, how much is spent analyzing reaction data per month on average?</p>
---	---

**Model Test Paper 32**  
**General Study Paper II**

- (a) 5,583.32 Pounds
- (b) 5,736.93 Pounds
- (c) 6,032.81 Pounds
- (d) 6,258.38 Pounds

71. Daniel holds 170 shares of Company A, 80 shares of Company B and 110 shares of Company C. At the time of purchase, Company A shares were valued at £2.82 per share, Company B shares were valued at £1.92 per share and Company C shares were valued at £2.78 per share. When Daniel sold his shares, Company A and B shares had risen in value by 5% and 6% respectively, and the value of Company C shares had dropped by 2%, how much profit did Daniel generate from selling his shares?

- (a) 24.89 Pounds
- (b) 27.07 Pounds
- (c) 29.64 Pounds
- (d) 32.45 Pounds

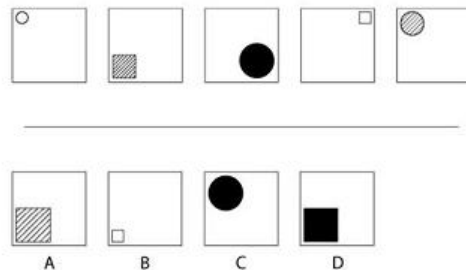
72. An organization is refurbishing its offices by providing its employees with new chairs, desks and filing cabinets. Each office requires 18 desks, 18 chairs and 36 filing cabinets. The furniture supplier provides desks at £145.95 per desk, chairs at £45.95 per chair and filing cabinets £39.95 per cabinet. The organization has 7 offices which require refurbishing. What will be the total cost of the new office furniture?

- (a) 32,198.70 Pounds
- (b) 34,246.80 Pounds
- (c) 36,829.80 Pounds
- (d) 38,298.90 Pounds

73. A storage container has 1100 cubic feet of storage space. This storage container is used to hold identically sized boxes with the following dimensions: width = 2 ft, length = 4 ft, height = 2 ft. What is the maximum number of these boxes which could be held in this storage container?

- (a) 67 boxes
- (b) 68 boxes
- (c) 69 boxes
- (d) 70 boxes

74.



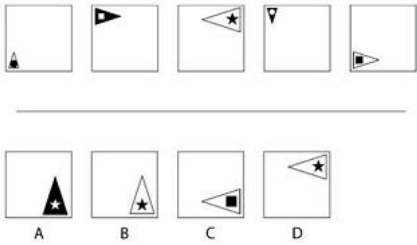
What comes next in the sequence?

- (a)
- (b)
- (c)
- (d)



**Model Test Paper 32**  
**General Study Paper II**

75.



What comes next in the sequence?

- (a)
- (b)
- (c)
- (d)

Read the following passage below and answer the following questions

Accounting is the language of the business. Corporations need to communicate their results to the world. Their audience includes employees, investors, creditors, customers, suppliers and communities. Within the company, accounting information provides a means to control, evaluate and plan operations. Whatever the audience or function, accounting is numbers. Accountants "count the beans" so that the business activity can be recorded, summarized and analysed. Accountants have been around from the beginning of time and professors don't let you forget it. In biblical times the accountants kept track of how much grain was stored in the communities' silos. How do you think King Solomon knew that there was only a thirty-day supply of grain during a drought? It was from the accountants. Throughout the ages accountants have kept track with their

fingers, abacusses and calculators. In modern times accounting has gone beyond the physical count of grain in storage to complex accounting activities.

76. Accounting in different forms has been around since the times of

- (a) Biblical times
- (b) King Solomon
- (c) Britishers
- (d) Abacusses

77. Accounting is need to communicate ----- to the world

- (a) Company news
- (b) news
- (c) Company results
- (d) Company status

78. Internally, accounting is essential for planning and -----

- (a) Business
- (b) News
- (c) Control
- (d) Summary

**Model Test Paper 32**  
**General Study Paper II**

79. Accounting is a ----- method of summarising and analysing business

- (a) Numerical
- (b) Statistical
- (c) Mathematical
- (d) Rational

80. Accounting primarily deals with

- (a) People
- (b) Statistics
- (c) Investors
- (d) Numbers

Model Test Paper 32  
General Study Paper II

Answer Sheet

	A	B	C	D		A	B	C	D		A	B	C	D		A	B	C	D
1	<input type="radio"/>	<input type="radio"/>	<input type="radio"/>	<input type="radio"/>	21	<input type="radio"/>	<input type="radio"/>	<input type="radio"/>	<input type="radio"/>	41	<input type="radio"/>	<input type="radio"/>	<input type="radio"/>	<input type="radio"/>	61	<input type="radio"/>	<input type="radio"/>	<input type="radio"/>	<input type="radio"/>
2	<input type="radio"/>	<input type="radio"/>	<input type="radio"/>	<input type="radio"/>	22	<input type="radio"/>	<input type="radio"/>	<input type="radio"/>	<input type="radio"/>	42	<input type="radio"/>	<input type="radio"/>	<input type="radio"/>	<input type="radio"/>	62	<input type="radio"/>	<input type="radio"/>	<input type="radio"/>	<input type="radio"/>
3	<input type="radio"/>	<input type="radio"/>	<input type="radio"/>	<input type="radio"/>	23	<input type="radio"/>	<input type="radio"/>	<input type="radio"/>	<input type="radio"/>	43	<input type="radio"/>	<input type="radio"/>	<input type="radio"/>	<input type="radio"/>	63	<input type="radio"/>	<input type="radio"/>	<input type="radio"/>	<input type="radio"/>
4	<input type="radio"/>	<input type="radio"/>	<input type="radio"/>	<input type="radio"/>	24	<input type="radio"/>	<input type="radio"/>	<input type="radio"/>	<input type="radio"/>	44	<input type="radio"/>	<input type="radio"/>	<input type="radio"/>	<input type="radio"/>	64	<input type="radio"/>	<input type="radio"/>	<input type="radio"/>	<input type="radio"/>
5	<input type="radio"/>	<input type="radio"/>	<input type="radio"/>	<input type="radio"/>	25	<input type="radio"/>	<input type="radio"/>	<input type="radio"/>	<input type="radio"/>	45	<input type="radio"/>	<input type="radio"/>	<input type="radio"/>	<input type="radio"/>	65	<input type="radio"/>	<input type="radio"/>	<input type="radio"/>	<input type="radio"/>
6	<input type="radio"/>	<input type="radio"/>	<input type="radio"/>	<input type="radio"/>	26	<input type="radio"/>	<input type="radio"/>	<input type="radio"/>	<input type="radio"/>	46	<input type="radio"/>	<input type="radio"/>	<input type="radio"/>	<input type="radio"/>	66	<input type="radio"/>	<input type="radio"/>	<input type="radio"/>	<input type="radio"/>
7	<input type="radio"/>	<input type="radio"/>	<input type="radio"/>	<input type="radio"/>	27	<input type="radio"/>	<input type="radio"/>	<input type="radio"/>	<input type="radio"/>	47	<input type="radio"/>	<input type="radio"/>	<input type="radio"/>	<input type="radio"/>	67	<input type="radio"/>	<input type="radio"/>	<input type="radio"/>	<input type="radio"/>
8	<input type="radio"/>	<input type="radio"/>	<input type="radio"/>	<input type="radio"/>	28	<input type="radio"/>	<input type="radio"/>	<input type="radio"/>	<input type="radio"/>	48	<input type="radio"/>	<input type="radio"/>	<input type="radio"/>	<input type="radio"/>	68	<input type="radio"/>	<input type="radio"/>	<input type="radio"/>	<input type="radio"/>
9	<input type="radio"/>	<input type="radio"/>	<input type="radio"/>	<input type="radio"/>	29	<input type="radio"/>	<input type="radio"/>	<input type="radio"/>	<input type="radio"/>	49	<input type="radio"/>	<input type="radio"/>	<input type="radio"/>	<input type="radio"/>	69	<input type="radio"/>	<input type="radio"/>	<input type="radio"/>	<input type="radio"/>
10	<input type="radio"/>	<input type="radio"/>	<input type="radio"/>	<input type="radio"/>	30	<input type="radio"/>	<input type="radio"/>	<input type="radio"/>	<input type="radio"/>	50	<input type="radio"/>	<input type="radio"/>	<input type="radio"/>	<input type="radio"/>	70	<input type="radio"/>	<input type="radio"/>	<input type="radio"/>	<input type="radio"/>
11	<input type="radio"/>	<input type="radio"/>	<input type="radio"/>	<input type="radio"/>	31	<input type="radio"/>	<input type="radio"/>	<input type="radio"/>	<input type="radio"/>	51	<input type="radio"/>	<input type="radio"/>	<input type="radio"/>	<input type="radio"/>	71	<input type="radio"/>	<input type="radio"/>	<input type="radio"/>	<input type="radio"/>
12	<input type="radio"/>	<input type="radio"/>	<input type="radio"/>	<input type="radio"/>	32	<input type="radio"/>	<input type="radio"/>	<input type="radio"/>	<input type="radio"/>	52	<input type="radio"/>	<input type="radio"/>	<input type="radio"/>	<input type="radio"/>	72	<input type="radio"/>	<input type="radio"/>	<input type="radio"/>	<input type="radio"/>
13	<input type="radio"/>	<input type="radio"/>	<input type="radio"/>	<input type="radio"/>	33	<input type="radio"/>	<input type="radio"/>	<input type="radio"/>	<input type="radio"/>	53	<input type="radio"/>	<input type="radio"/>	<input type="radio"/>	<input type="radio"/>	73	<input type="radio"/>	<input type="radio"/>	<input type="radio"/>	<input type="radio"/>
14	<input type="radio"/>	<input type="radio"/>	<input type="radio"/>	<input type="radio"/>	34	<input type="radio"/>	<input type="radio"/>	<input type="radio"/>	<input type="radio"/>	54	<input type="radio"/>	<input type="radio"/>	<input type="radio"/>	<input type="radio"/>	74	<input type="radio"/>	<input type="radio"/>	<input type="radio"/>	<input type="radio"/>
15	<input type="radio"/>	<input type="radio"/>	<input type="radio"/>	<input type="radio"/>	35	<input type="radio"/>	<input type="radio"/>	<input type="radio"/>	<input type="radio"/>	55	<input type="radio"/>	<input type="radio"/>	<input type="radio"/>	<input type="radio"/>	75	<input type="radio"/>	<input type="radio"/>	<input type="radio"/>	<input type="radio"/>
16	<input type="radio"/>	<input type="radio"/>	<input type="radio"/>	<input type="radio"/>	36	<input type="radio"/>	<input type="radio"/>	<input type="radio"/>	<input type="radio"/>	56	<input type="radio"/>	<input type="radio"/>	<input type="radio"/>	<input type="radio"/>	76	<input type="radio"/>	<input type="radio"/>	<input type="radio"/>	<input type="radio"/>
17	<input type="radio"/>	<input type="radio"/>	<input type="radio"/>	<input type="radio"/>	37	<input type="radio"/>	<input type="radio"/>	<input type="radio"/>	<input type="radio"/>	57	<input type="radio"/>	<input type="radio"/>	<input type="radio"/>	<input type="radio"/>	77	<input type="radio"/>	<input type="radio"/>	<input type="radio"/>	<input type="radio"/>
18	<input type="radio"/>	<input type="radio"/>	<input type="radio"/>	<input type="radio"/>	38	<input type="radio"/>	<input type="radio"/>	<input type="radio"/>	<input type="radio"/>	58	<input type="radio"/>	<input type="radio"/>	<input type="radio"/>	<input type="radio"/>	78	<input type="radio"/>	<input type="radio"/>	<input type="radio"/>	<input type="radio"/>
19	<input type="radio"/>	<input type="radio"/>	<input type="radio"/>	<input type="radio"/>	39	<input type="radio"/>	<input type="radio"/>	<input type="radio"/>	<input type="radio"/>	59	<input type="radio"/>	<input type="radio"/>	<input type="radio"/>	<input type="radio"/>	79	<input type="radio"/>	<input type="radio"/>	<input type="radio"/>	<input type="radio"/>
20	<input type="radio"/>	<input type="radio"/>	<input type="radio"/>	<input type="radio"/>	40	<input type="radio"/>	<input type="radio"/>	<input type="radio"/>	<input type="radio"/>	60	<input type="radio"/>	<input type="radio"/>	<input type="radio"/>	<input type="radio"/>	80	<input type="radio"/>	<input type="radio"/>	<input type="radio"/>	<input type="radio"/>