

Model Test Paper 34
General Studies Paper I

DO NOT OPEN THIS BOOKLET UNTIL YOU ARE TOLD TO DO SO

TEST BOOKLET
GENERAL STUDIES
Paper-I

D

Time Allowed : Two Hours

Maximum Marks : 200

INSTRUCTIONS

1. IMMEDIATELY AFTER THE COMMENCEMENT OF THE EXAMINATION YOU SHOULD CHECK THAT THE TEST BOOKLET *DOES NOT* HAVE ANY UNPRINTED OR TORN OR MISSING PAGES OR ITEMS, ETC, IF SO, GET IT REPLACED BY A COMPLETE TEST BOOKLET.
2. **Please note that it is the candidate's responsibility to encode and fill in the Roll Number and Test Booklet Series A, B, C or D carefully and without any omission or discrepancy at the appropriate place in the OMR Answer Sheet. Any omission/discrepancy will render the Answer Sheet liable for rejection.**
3. You have to enter your Roll Number on the Test Booklet in the Box provided alongside . *DO NOT* write *anything else* on the Test Booklet.
4. This Test Booklet contains **100** items (questions). Each item comprises four responses (answers). You will select the response which you want to mark on the Answer Sheet. In case you feel that there is more than one correct response, mark the response which you consider the best. In any case, choose *ONLY ONE* response for each item.
5. You have to mark all your responses *ONLY* on the separate Answer Sheet provided.
6. **All** items carry equal marks.
7. Before you proceed to mark in the Answer Sheet the response to various items in the Test Booklet, you have to fill in some particulars in the Answer Sheet as per instructions sent to you with your Admission Certificate.
8. After you have completed filling in all your responses on the Answer Sheet and the examination has concluded, you should hand over to the invigilator only the *Answer Sheet*. You are permitted to take away with you the Test Booklet.
9. Sheets for rough work are appended in the Test Booklet at the end.
10. **Penalty for wrong Answers :**
THERE WILL BE PENALTY FOR WRONG ANSWERS MARKED BY A CANDIDATE IN THE OBJECTIVE TYPE QUESTION PAPERS.
(i) There are four alternatives for the answer to every question. For each question for which a wrong answer has been given by the candidate, **one-third** of the marks assigned to that question will be deducted as penalty.
(ii) If a candidate gives more than one answer, it will be treated as a **wrong answer** even if one of the given answers happens to be correct and there will be same penalty as above to that question.
(iii) If a question is left blank, i.e., no answer is given by the candidate, there will be **no penalty** for that question.

DO NOT OPEN THIS BOOKLET UNTIL YOU ARE TOLD TO DO SO


Model Test Paper 34
General Studies Paper I

<p>1. The group of which figures prominently in the context of cattle raids in Rigveda was that of</p> <p>(a) Mlcchchhas (b) Dasas and Dasyus (c) Panis (d) Nishadas</p> <p>2. Which one of the following system of Buddhism emerged around the Seventh Century A.D.?</p> <p>(a) Thervada (b) Hinayana (c) Mahayana (d) Vajrayana</p> <p>3. The first Tamil Sangama is said to have been instituted by</p> <p>(a) Tiruvalluvar (b) Parasurama (c) Mamulanar (d) Agastya</p> <p>4. Among the following sites, sculptural evidence regarding the first representation of the Buddha in human form has come from</p> <p>(a) Bharhut (b) Mathura (c) Sanchi (d) Amaravati</p> <p>5. The term Nirgrantha is associated with</p> <p>(a) Ajivikas (b) Charvakas (c) Jainas (d) Pasupatas</p> <p>6. The Hindu God who has sometimes been identified by Greek authors with Herakles is</p> <p>(a) Skanda (b) Siva</p>	<p>(c) Krishna (d) Prajanya</p> <p>7. Which of the following are matters on which a Constitutional amendment is possible only with the ratification of the legislatures of not less than one-half of the States?</p> <p>1. Election of the President 2. Representation of States in Parliament 3. Any of the list in the 7th schedule 4. Abolition of the Legislative Council of a State</p> <p>(a) 1, 2 and 3 (b) 1, 2 and 4 (c) 1, 3 and 4 (d) 2, 3 and 4</p> <p>8. Who among the following have the right to vote in the elections to both the Lok Sabha and the Raja Sabha?</p> <p>(a) Elected members of the Lower House of the Parliament (b) Elected members of the Upper House of the Parliament (c) Elected members of the Upper House of the State Legislatures (d) Elected members of the Lower House of the State Legislatures</p> <p>9. Which one of the following States of India does not have a Legislative Council so far even though the Constitution (Seventh Amendment) Act, 1956 provides for it?</p> <p>(a) Maharashtra (b) Bihar (c) Karnataka (d) Madhya Pradesh</p> <p>10. Prohibition on discrimination on grounds of religion etc. (Article 15 of the Constitution of India) is a Fundamental Right classifiable under</p> <p>(a) the Right to Freedom of Religion (b) the Right against Exploitation (c) the Cultural and Educational Right (d) the Right to Equality</p>
--	---

For Detailed Solution Please Visit:

www.PrelimsModelTests.com/order.html

Model Test Paper 34
General Studies Paper I

<p>11. The following map shows the mineral distribution of</p>  <p>(a) Dolomite (b) Sillimanite (c) Gypsum (d) Limestone</p> <p>12. Agricultural income tax is assigned to the State Government by</p> <p>(a) the Finance Commission (b) the National Development Council (c) the Inter-State Council (d) the Constitution of India</p> <p>13. Which of the following is not explicitly stated in the Constitution of India but followed as a convention?</p> <p>(a) The Finance Minister has to be a member of the Lower House (b) The Prime Minister has to resign if he loses majority in the Lower House (c) All the parts of India are to be represented in the Council of Ministers (d) In the event of both the President and the Vice President demitting office simultaneously before the end of their tenure the Speaker of the lower House of the Parliament will officiate as the President</p> <p>14. Which one of the following is incorrect in respect of Local Government in India?</p> <p>(a) According to the Indian Constitution, local government is not an independent tier in the federal system (b) 30% of the seats in local bodies are reserved for women (c) Local government finances are to be provided</p>	<p>by a Commission (d) Elections to local bodies are to be determined by a Commission</p> <p>15. Which of the following statements are correct about the security deposit for elections?</p> <p>1. The security deposit for Lok Sabha election is Rs. 50,000 2. The security deposit for Assembly election is Rs. 25,000</p> <p>(a) 1 only (b) 2 only (c) Both 1 and 2 (d) Neither 1 nor 2</p> <p>16. Which one of the following statements is not correct?</p> <p>(a) Highly weathered tropical and subtropical soils are called Oxisols (b) Grassland soils rich in organic matter and high in bases are called Mollisols (c) Soils in waterlogged areas with high organic matter are called Histosols (d) Young soils with no horizons are called Inceptisols</p> <p>17. The transition zone between two Ecosystems is called?</p> <p>(a) biome (b) biotope (c) ecotone (d) sere</p> <p>18. Which one of the following statements are not correct?</p> <p>(a) The energy levels within a food chain are called trophic levels (b) In deep oceans, primary production is almost nil (c) The primary consumers are called autotrophs (d) The decomposers are called saprotrophs</p>
--	--

Model Test Paper 34
General Studies Paper I

19. Match the following tribes with their countries

- A. Chukchi - 1. Indonesia
- B. Dayak - 2. Mexico
- C. Lacandon - 3. Russia
- D. Lese - 4. Zaire

(a) A-3, B-1, C-4, D-2

(b) A-1, B-3, C-2, D-4

(c) A-3, B-1, C-2, D-4

(d) A-1, B-3, C-4, D-2

20. Which one of the following natural regions is not correctly matched with its economic base?

(a) Canadian Prairies - Spring wheat cultivation

(b) Argentine Pampas - Beef cattle ranching

(c) Australian Downs - Nomadic herding

(d) South African Veld - Maize growing

21. The following map shows the mineral distribution of



(a) Barytes

(b) Gold

(c) Uranium

(d) Diamond

22. Which of the following statements are correct?

When with a fall in price of a commodity total expenditure

1. decreases, the demand for the commodity is elastic

2. increases, demand for the commodity is inelastic

3. remains constant, demand for the commodity is unitary elastic

(a) 1 only

(b) 1 and 3

(c) 3 only

(d) 1, 2 and 3

23. Regional disparity in per capita income in India has increased in the post reform period due to many factors. Which among the following factors has not contributed to the growth in such disparity?

(a) Decline in the share of the public investment

(b) Change in policy regime regulating investment locations

(c) Poor governance and poor infrastructure

(d) Allocation of Central Government funds through the award of Finance Commission

24. Which of the following statements are correct about deficient demand?

1. Deficient demand exists to the situation when aggregate demand for goods and services falls short of aggregate supply of output which is produced by fully employing the given resources of the economy

2. Deficient demand lowers both output and employment and gives rise to unemployment of labour

(a) 1 only

(b) 2 only

(c) Both 1 and 2

(d) Neither 1 nor 2

25. The growth process that is sustainable and yields broad-based benefits and ensures equality of opportunity for all is termed as

(a) Faster growth

(b) Inclusive growth

(c) Balanced growth

(d) Sustainable growth

26. Which one of the following is a transfer payment?

(a) Net factor income earned from abroad

(b) Interest on public debt paid by the Government


(c) Bonus to the employees by the government or enterprises

(d) Employer's contribution to contributory provident fund of employees

For Detailed Solution Please Visit:

www.PrelimsModelTests.com/order.html

Model Test Paper 34
General Studies Paper I

<p>27. Credit will contract when</p> <p>(a) bank rate is lowered (b) bank rate is raised (c) reserve requirement ratio is lowered (d) open market operations policy of buying government bonds is adopted</p> <p>28. Arrange the following markets according to increasing degree of barrier to entry into them:</p> <p>1. Monopoly 2. Perfect competition 3. Monopolistic competition 4. Oligopoly</p> <p>(a) 1, 2, 3, 4 (b) 2, 4, 3, 1 (c) 2, 3, 4, 1 (d) 3, 2, 4, 1</p> <p>29. The trickle-down theory</p> <p>(a) states that hydroelectric generating stations are the most efficient sources of power for developing nations (b) was suggested by Keynes when he noted that an increase in investment trickles down to the rest of the economy and brings about an increase in GNP (c) states that an increase in per capita income will eventually increase the well-being of all segments of society as it trickles down to these groups (d) is best understood by analyzing the economies of the third world countries</p> <p>30. Which of the following statements about the incidence of tax is/are correct?</p> <p>1. If the demand for a commodity is inelastic, its price can be raised by increasing a tax 2. If the demand for a commodity is elastic, burden of sales tax may be shifted partly to the consumers 3. If the supply of a commodity is perfectly elastic, the entire burden of the tax will be on the seller</p> <p>(a) 1 only (b) 1 and 2 (c) 2 only (d) 1, 2 and 3</p>	<p>31. The following map shows the industrial distribution of</p>  <p>(a) Iron and Steel (b) Aluminium (c) Fertilisers (d) Copper and Brass</p> <p>32. The Prisoner's dilemma</p> <p>1. is a game theory concept showing the disadvantages of not being able to reach binding agreements 2. has significant implications on the behaviour of oligopolists 3. explains how rivals behaving selfishly act contrary to their mutual or common interests 4. is a doctrine developed by H. Domer which explains the incentives to cheat by member of a cartel.</p> <p>Which of the statements given above are correct?</p> <p>(a) 1, 2 and 3 (b) 1 and 2 (c) 2 and 3 (d) 1, 3 and 4</p> <p>33. The gains from international trade depends on the</p> <p>1. differences in cost ratios in the two trading countries 2. terms of trade 3. size of the country</p> <p>(a) 2 and 3 (b) 1 and 2 (c) 1 and 3 (d) 1, 2 and 3</p>
---	--

Model Test Paper 34
General Studies Paper I

<p>34. Does the index number reflect only approximate changes in the relative level of a phenomenon? Why</p> <p>(a) Yes, because there is no unique formula</p> <p>(b) Yes, since index numbers are computed from sample data, all errors inherent in any sampling procedure creep into its construction</p> <p>(c) Yes, because weights depend upon subjective selection</p> <p>(d) No, if the index number satisfies the tests for adequacy, it reflects accurate changes</p> <p>35. Poverty gap is the</p> <p>(a) sum of the difference between the poverty line and actual income levels of all people living below that line</p> <p>(b) sum of the difference between the poverty line and actual income levels of all people living above that line</p> <p>(c) sum of the difference between per capita income and actual income</p> <p>(d) difference between number of persons above poverty line and number of persons below poverty line</p> <p>36. Which of the following is/are the possible effects of deficit financing?</p> <ol style="list-style-type: none"> 1. Increase in money supply with the public 2. The rise in the level of incomes 3. The fall in the general price level <p>(a) 1 only</p> <p>(b) 1 and 2</p> <p>(c) 2 only</p> <p>(d) 1, 2 and 3</p> <p>37. Which one of the following statement refers to "disinflation"?</p> <p>(a) A simultaneous existence of high rate of inflation and high unemployment in a country</p> <p>(b) A process of reversing inflation but without creating unemployment and reducing output</p> <p>(c) A policy of moderating rising prices and also to pull the system out of the depth of depression</p> <p>(d) A situation of general depression and widespread unemployment caused by deficiency of effective demand</p>	<p>38. Capital deepening ceases</p> <p>(a) as a result of population growth</p> <p>(b) when there is no additional increase in the population</p> <p>(c) when the rate of return from capital is equal to the real rate of interest</p> <p>(d) when the real rate of interest falls, ceteris paribus</p> <p>39. Which of the following statements are correct?</p> <ol style="list-style-type: none"> 1. India spends more than 1 per cent of its GDP on Research and Development (R&D) 2. India's spending on R&D in relation to GDP has increased in the past few years 3. In comparison to China, India's spending on R&D in relation to GDP is low <p>(a) 1, 2 and 3</p> <p>(b) 2 and 3</p> <p>(c) 1 and 3</p> <p>(d) 3 only</p> <p>40. What is meant by the term "neutrality of money"?</p> <p>(a) Management of money and credit to control inflation</p> <p>(b) Promotion of price stability and exchange stability</p> <p>(c) Doing away with the disturbing effects of changes in the quantity of money on important economic variables like income, output and employment</p> <p>(d) Acceleration of growth rate in the economy</p> <p>41. Which of the following is the correct sequence of the religious places from north to south?</p> <p>(a) Shirdi, Srisailam, Nashik, Mahabaleshwar</p> <p>(b) Nashik, Shirdi, Srisailam, Mahabaleshwar</p> <p>(c) Shirdi, Nashik, Mahabaleshwar, Srisailam</p> <p>(d) Nashik, Shirdi, Mahabaleshwar, Srisailam</p>
--	---

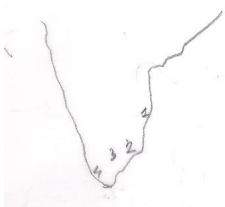
Model Test Paper 34
General Studies Paper I

<p>42. The most familiar form of radiant energy in sunlight that causes tanning and sunburning of human skin, is called?</p> <p>(a) ultraviolet radiation (b) visible radiation (c) infrared radiation (d) microwave radiation</p> <p>43. The polymeric fibre used as a substitute for wool in making synthetic blankets, sweaters, etc. is</p> <p>(a) Nylon (b) Teflon (c) Orlon (d) Bakelite</p> <p>44. Which one of the following plant is used for green manuring in India?</p> <p>(a) Barley (b) Sunhemp (c) Cotton (d) Sunflower</p> <p>45. Which among the following are the major reasons behind preferring Eucalyptus tree in the planned forestation process?</p> <p>1. Plantation grows very fast 2. Plantation makes the soil more fertile 3. Wood from Eucalyptus tree is easily converted into pulp for paper industry</p> <p>(a) 1 and 2 (b) 1 and 3 (c) 2 and 3 (d) 1, 2 and 3</p> <p>46. Match the following Alloys with their Constituents</p> <p>A. Solder - 1. Iron and Carbon B. Brass - 2. Copper and Zinc C. Bronze - 3. Copper and Tin D. Steel - 4. Lead and Tin</p> <p>(a) A-1, B-2, C-3, D-4 (b) A-4, B-2, C-3, D-1</p>	<p>(c) A-1, B-3, C-2, D-4 (d) A-4, B-3, C-2, D-1</p> <p>47. Which of the following statements are correct?</p> <p>1. Iodine is necessary for the thyroid gland to make adrenalin 2. Iodine deficiency leads to goitre in human beings 3. Iodine is secreted by pancreas and helps in regulating cholesterol level</p> <p>(a) 1, 2 and 3 (b) 1 and 2 (c) 1 and 3 (d) 2 only</p> <p>48. Which of the following statements are correct?</p> <p>1. A person with myopia can see distant objects distinctly but cannot see nearby objects clearly 2. A person with hypermetropia cannot see distant objects clearly 3. A person with presbyopia can see nearby objects without corrective glasses</p> <p>(a) 1, 2 and 3 (b) 1 and 2 (c) 2 and 3 (d) 3 only</p> <p>49. Match the following items with the toxic substance used in them</p> <p>A. CFL lamp - 1. Nitrogen oxides B. Automobile battery - 2. Phthalates C. Polymer - 3. Lead D. Diesel engine - 4. Mercury</p> <p>(a) A-4, B-2, C-3, D-1 (b) A-4, B-3, C-2, D-1 (c) A-1, B-2, C-3, D-4 (d) A-1, B-3, C-2, D-4</p>
--	--

Model Test Paper 34
General Studies Paper I

<p>50. Some statements about the benefits of organic farming are given below. Indicate whether they are true or false using the code given below the statements:</p> <ol style="list-style-type: none">1. It reduces CO₂ emission2. It does not lead to toxic effect3. It improves the water-retention capacity of the soil <p>(a) 1-False, 2-True, 3-False (b) 1-True, 2-True, 3-False (c) 1-False, 2-True, 3-True (d) 1-True, 2-True, 3-True</p> <p>51. Consider the following names</p> <ol style="list-style-type: none">1. Alfred Webb2. Badruddin Tyabji3. George Yule4. Rahamatulla Muhammad Sayani <p>Which of the above were the Presidents of Indian National Congress?</p> <p>(a) 1, 2 and 3 only (b) 2 and 3 only (c) 1 and 4 only (d) 1, 2, 3 and 4</p> <p>52. Which of the following statements are correct?</p> <ol style="list-style-type: none">1. Clear sky appears blue due to poor scattering of blue wavelength of visible light2. Red part of light shows more scattering than blue light in the atmosphere3. In the absence of atmosphere, there would be no scattering of light and sky will look black <p>(a) 1 only (b) 1 and 2 (c) 3 only (d) 1, 2 and 3</p> <p>53. Which one among the following plants cannot be multiplied by cuttings?</p> <p>(a) Rose (b) Bryophyllum (c) Banana (d) Marigold</p>	<p>54. Hairs of a shaving brush cling together when the brush is removed from water due to</p> <p>(a) viscosity (b) surface tension (c) friction (d) elasticity</p> <p>55. Which of the following statements about the Statutory Liquidity Ratio (SLR) are correct?</p> <ol style="list-style-type: none">1. To meet SLR, commercial banks can use cash only2. SLR is maintained by the banks with themselves3. SLR restricts the bank's leverage in pumping more money into the economy <p>(a) 1, 2 and 3 (b) 1 and 3 (c) 2 and 3 (d) 2 only</p> <p>56. Which of the following statements regarding the Fundamental Duties contained in the Constitution of India are correct?</p> <ol style="list-style-type: none">1. Fundamental Duties can be enforced through writ jurisdiction2. Fundamental Duties have formed part of the Constitution since its adoption3. Fundamental Duties became part of the Constitution in accordance with the Swaran Singh Committee4. Fundamental Duties are applicable only to the citizens of India <p>(a) 1 and 2 (b) 2 and 4 (c) 2 and 3 (d) 3 and 4</p> <p>57. When Lord Mountbatten became the first Governor-General of India, who among the following became the Governor-General for Pakistan?</p> <p>(a) Lord Mountbatten (b) M. A. Jinnah (c) Liaquat Ali Khan (d) Shaukat Ali</p>
---	--

Model Test Paper 34
General Studies Paper I

<p>58. 'Diarchy' was first introduced in India under</p> <p>(a) Morley-Minto Reforms (b) Montford Reforms (c) Simon Commission Plan (d) Government of India Act, 1935</p> <p>59. Consider the following statements :</p> <p>1. Infant mortality rate takes into account the death of infants within a month after birth 2. Infant mortality rate is the number of infant deaths in a particular year per 100 live births during that year Which of the above statements is/are correct ?</p> <p>(a) 1 only (b) 2 only (c) Both 1 and 2 (d) Neither 1 nor 2</p> <p>60. Which of the following was/were the main feature(s) of the Government of India Act, 1919?</p> <p>1. Introduction of separate electorates for Muslims 2. Devolution of legislative authority by the Centre to the Provinces 3. Expansion and reconstitution of Central and Provincial Legislatures</p> <p>(a) 2 only (b) 1 and 3 (c) 3 only (d) 2 and 3</p> <p>61. Consider the following map of south Indian region. Which of the following religious places are shown in the map?</p>  <p>(a) 1-Madurai, 2-Thanjavur, 3-Kanchipuram, 4-Thiruvananthapuram (b) 1-Thanjavur, 2-Kanchipuram, 3Thiruvananthapuram, 4-Madurai</p>	<p>(c) 1-Kanchipuram, 2-Thanjavur, 3-Madurai, 4-Thiruvananthapuram (d) 1-Kanchipuram, 2-Thanjavur, 3-Thiruvananthapuram, 4-Madurai</p> <p>62. Which one of the following is a Human Right as well as a Fundamental Right under the Constitution of India?</p> <p>(a) Right to information (b) Right to education (c) Right to work (d) Right to housing</p> <p>63. Which one of the following Commissions/Committees was appointed by the British Government to investigate into the massacre of Jalianwalla Bagh?</p> <p>(a) Welby Commsiion (b) Hunter Committee (c) Simon commission (d) Butler Committee</p> <p>64. Consider the following statements and identify the person referred to therein</p> <p>During his stay in England, he endeavored to educate the British people about their responsibilities as rulers of India. He delivered speeches and delivered articles to support his opposition to the unjust and oppressive regime of the British Raj. In 1867, he helped to establish the East India Association of which he became the Honorary Secretary</p> <p>(a) Pherozeshah Mehta (b) Mary Carpenter (c) Dadabhai Naoroji (d) Ananda Mohan Bose</p> <p>65. Which two of the following plays did Kalidasa write before writing Abhigyanashakuntalam?</p> <p>1. Vikramorvashiyam 2. Malavikagnimitram 3. Swapnavasavadattam 4. Kadambari</p> <p>(a) 1 and 2 (b) 1 and 3 (c) 1 and 4 (d) 3 and 4</p>
--	--

For Detailed Solution Please Visit:

www.PrelimsModelTests.com/order.html

Model Test Paper 34
General Studies Paper I

<p>66. "Use of white marble, long legs and slender frames, human beings as central characters and prominence of kings, princess and palaces" were the characteristic features of which one of the following ancient art forms of India?</p> <p>(a) Amaravati School of Art (b) Gandhara School of Art (c) Mathura School of Art (d) Pahari School of Art</p> <p>67. Who drafted the Constitution of Muslim League, "The Green Book"?</p> <p>(a) Rahamat Ali (b) Muhammad Iqbal (c) Muhammad Ali Jinnah (d) Maulana Muhammad Ali Jauhar</p> <p>68. 26th October, 1947 is an important date in the Indian history, because of</p> <p>(a) Maharaja Hari Singh's signing of Instrument of Accession (b) ceasefire with Pakistan (c) merger of Sind (d) declaration of war over India by Pakistan</p> <p>69. The Nehru-Liaquat pact between India and Pakistan was signed in 1950 to resolve the issue of</p> <p>(a) the protection of minorities (b) the accession of Princely States (c) the border disputes (d) the problem of refugees</p> <p>70. Which of the following statements are correct relating to the famous Muzaffarpur murders (1908)?</p> <p>1. The bomb which was hurled at Mrs. Pringle and her daughter was actually intended for Mr. Kingsford, the District Judge of Muzaffarpur 2. The revolutionaries wanted to kill Mr. Kingsford, because he had inflicted severe punishments on Swadeshi activists 3. Khudiram and Prafulla Chaki had to pay the penalty for their action by death</p> <p>(a) 1 only</p>	<p>(b) 2 only (c) 2 and 3 (d) 1, 2 and 3</p> <p>71. Match the following (Resolutions of the Indian National Congress and the All Parties Conference) ----- (Sessions and Dates of adoption) A. Attainment of Swaraj by all Peaceful and legitimate means - 1. Adopted at Lucknow session in 1899 B. Promotional by Constitutional means for the interest and well-being of the people of the Indian Empire- 2. Adopted at the Special Session in Calcutta September, 1920 C. Attainment of Dominion Status - 3. Adopted in the Madras Session, 1927 D. Complete National independence - 4. Adopted by the All-Parties Convention, 1928</p> <p>(a) A-4, B-3, C-2, D-1 (b) A-3, B-4, C-1, D-2 (c) A-2, B-1, C-4, D-3 (d) A-1, B-2, C-3, D-4</p> <p>72. After the death of Raja Rammohan Roy, the Brahmo Samaj split into two sections; the Brahmo Samaj of India and the Adi Brahmo Samaj. Who were the leaders of the two sections respectively?</p> <p>(a) Keshab Chandra Sen and Debendranath Tagore (b) Radhakant Deb and Debendranath Tagore (c) Keshab Chandra Sen and Radhakant Deb (d) Debendranath Tagore and Radhakant Deb</p> <p>73. Which of the following statements are correct? UNESCO's World Heritage mission is to</p> <p>1. take over the management, maintenance and preservation of the World Heritage sites 2. encourage State parties to the convention concerning the Protection of the World Cultural and Natural Heritage to nominate sites within their national territory for inclusion on the World Heritage List 3. provide emergency assistance for World Heritage sites in immediate danger</p> <p>(a) 1, 2 and 3 (b) 1 and 3 (c) 1 and 2 (d) 2 and 3</p>
--	---

Model Test Paper 34
General Studies Paper I

<p>74. Which one of the following statements regarding Harappan civilization is correct?</p> <p>(a) The standard Harappan seals were made of clay</p> <p>(b) The inhabitants of Harappa had neither knowledge of copper nor bronze</p> <p>(c) The Harappan civilization was rural based</p> <p>(d) The inhabitants of Harappa grew and used cotton</p> <p>75. Under which of the following conditions can citizenship be provided in India?</p> <p>1. One should be born in India 2. Either of whose parent was born in India 3. who has been ordinary resident of India for not less than five years</p> <p>(a) 1, 2 and 3</p> <p>(b) 1 and 2</p> <p>(c) 2 and 3</p> <p>(d) Eithe 1, 2 or 3</p> <p>76. Which one of the following inscriptions mentions Pulakesin II's military success against Harshavardhana?</p> <p>(a) Allahabad Pillar Inscription</p> <p>(b) Aihole Inscription</p> <p>(c) Damodarpur copperplate Inscription</p> <p>(d) Bilsad Inscription</p> <p>77. The Constitution (74th) Amendment Act mentions of the</p> <p>(a) composition of the National DEvelopment Council</p> <p>(b) structure of the Planning Commission of India</p> <p>(c) functions of the State Finance Commission</p> <p>(d) functions of the Kaveri Water Authority</p> <p>78. Which one of the following International Human Rights Instruments has been signed by India but not yet ratified?</p> <p>(a) Convention on the Rights of the child</p> <p>(b) Convention on the elimination of all forms of discrimination against women</p> <p>(c) Convention on the politicl rights of women</p>	<p>(d) Convention on the nationality of married women</p> <p>79. Which one of the following statements about Brihadeswara Temple at Thanjavur is not correct?</p> <p>(a) The Temple is a splendid example of Chola architecture</p> <p>(b) It was built by emperor Rajaraja</p> <p>(c) The temple is constructed of granite</p> <p>(d) The Temple is a monument dedicated to Lord Vishnu</p> <p>80. Consider the following statements in respect of protection of copyright in India:</p> <p>1. Copyright is a legal right given to creators of literacy, dramatic, musical and artistic works and producers of cinematograph films and sound recordings 2. Copyright protects only the expression and not the ideas. There is no copyright in an idea</p> <p>(a) 1 only</p> <p>(b) 2 only</p> <p>(c) Both 1 and 2</p> <p>(d) Neither 1 nor 2</p> <p>81. Which one of the following statements about Indian Air Force is not correct?</p> <p>(a) Chetak is a single engine turboshaft helicopter of Russian origin</p> <p>(b) SU-30 is a twin engine fighter of Russian origin</p> <p>(c) Mirage-2000 is multi-role fighter of French origin</p> <p>(d) MiG-29 is a twin engine fighter aircraft of Russian origin</p> <p>82. Which one of the following statements regarding Bharat Ratna award is not correct?</p> <p>(a) The original specifications for the award called for a circular gold medal, 35 mm in diameter, with the sun and the Hindi legend "Bharat Ratna" above and a floral wreath below. The reverse was to carry the State emblem and motto</p> <p>(b) The provision of Bharat Ratna was introduced in 1954</p> <p>(c) Bharat Ratna is awarded to Indian citizens only</p> <p>(d) The first ever Indian to receive this award was the famous scientist, Chandrasekhara Venkata Raman</p>
--	---

For Detailed Solution Please Visit:

www.PrelimsModelTests.com/order.html

Model Test Paper 34
General Studies Paper I

<p>83. Match the following Military Academies in India with their locations</p> <p>A. High Altitude Warfare School - 1. Agra B. Counter Insurgency and Jungle Warfare School - 2. Gulmarg C. Paratrooper's Training School - 3. Vairengte D. Combat Army Aviation Training School - 4. Nashik Road</p> <p>(a) A-2, B-3, C-1, D-4 (b) A-2, B-1, C-3, D-4 (c) A-4, B-1, C-3, D-2 (d) A-4, B-3, C-1, D-2</p> <p>84. Which of the following statements are correct?</p> <p>1. The Walker cup is associated with Golf 2. The event is contested biennially in odd numbered years 3. The teams contesting the trophy comprises the leading amateur golfers of the United States and Great Britain and Ireland</p> <p>(a) 1, 2 and 3 (b) 1 only (c) 2 and 3 (d) 1 and 3</p> <p>85. Which of the following are the likely effect of Nuclear war on the climate of the earth?</p> <p>1. Extreme summers 2. Cold winters 3. Reduced sunlight</p> <p>(a) 1 only (b) 2 only (c) 3 only (d) 2 and 3</p> <p>86. Mixed economy means an economy where</p> <p>(a) both agriculture and industry are equally promoted by the State (b) there is co-existence of public sector along with private sector (c) there is importance of small scale industries along with heavy industries (d) economy is controlled by military as well as civilian rulers</p>	<p>87. Which one of the following statements about Nobel Prize is correct?</p> <p>1. It is never awarded posthumously 2. Nobel Prize in Economics is given since 1901</p> <p>(a) 1 only (b) 2 only (c) Both 1 and 2 (d) Neither 1 nor 2</p> <p>88. Which one of the following statements regarding the Association of South East Asian Nations (ASEAN) is not correct?</p> <p>(a) ASEAN was established in the year 1966 in Bangkok by the five original countries (b) Singapore is one of the original members of ASEAN (c) India is a sectoral dialogue partner of ASEAN (d) There are 10 members of ASEAN</p> <p>89. Which one of the following statements are correct?</p> <p>1. Jim Corbett National Park is the oldest National Park of India 2. It was one of the nine Tiger Reserves created at the launch of the Project Tiger in 1973 3. Initially it was named as 'Hailey National Park'</p> <p>(a) 1 and 2 (b) 1, 2 and 3 (c) 2 and 3 (d) 1 and 3</p> <p>90. If a Panchayat is dissolved, elections are to be held within</p> <p>(a) 1 month (b) 3 months (c) 6 months (d) 1 year</p>
---	---

Model Test Paper 34
General Studies Paper I

<p>91. Consider the following statements about a famous autobiographical narrative:</p> <p>The author of the book is/was the head of one of India's leading business houses and a Member of Rajya Sabha. In the book he narrated principles in which the creation of wealth, philanthropy and political leadership were all regarded as part of nation-building. Written in a style that is simple and translucent in its sincerity, the book brings alive an important era in the life of the nation, its changing social mores, evolving principles of corporate governance and enduring family values.</p> <p>Who among the following is the author of the book?</p> <p>(a) K. K. Birla (b) Dhuru Bhai Ambani (c) Jamshedji Tata (d) L. N. Mittal</p> <p>92. The acronym of which one of the following Missile is perceived as the confluence of the two nations represented by two rivers</p> <p>(a) Astra (b) Akash (c) Prithvi (d) BrahMos</p> <p>93. Which one of the following committee framed guidelines on student's union elections in colleges/universities?</p> <p>(a) Moily Committee (b) Lyngdoh Committee (c) Sachar Committee (d) Ganguly Committee</p> <p>94. Consider the following statement and identify the tree with which the statement is related to?</p> <p>The branches of this tree root themselves like new trees over a large area. The roots then give rise to more trunks and branches. Because of this characteristic and its longevity, this tree is considered immortal and is an integral part of the myths and legends of India</p> <p>(a) Banyan (b) Neem (c) Tamarind (Imli)</p>	<p>(d) Peepal</p> <p>95. Which of the following statements are correct about the National calendar of India?</p> <p>1. The National calendar is based on the Saka era with Chaitra as its first month 2. Dates of the National calendar have a permanent correspondence with dates of the Gregorian calendar</p> <p>(a) 1 only (b) 2 only (c) Both 1 and 2 (d) Neither 1 nor 2</p> <p>96. Which of the following statements are correct about bioremediation?</p> <p>1. It may be defined as any process that uses microorganisms or their enzymes to return the environment altered by contaminants to its original condition 2. Bioremediation may be employed in order to attack specific contaminants, such as chlorinated pesticides that are degraded by bacteria</p> <p>(a) 1 only (b) 2 only (c) Both 1 and 2 (d) Neither 1 nor 2</p> <p>97. Golden Fibre refers to</p> <p>(a) Hemp (b) Cotton (c) Jute (d) Nylon</p> <p>98. The channel separating the Andaman Islands with the Nicobar Islands is known as</p> <p>(a) Coco channel (b) 100 channel (c) Duncan passage (d) Somboraro channel</p>
--	---

Model Test Paper 34
General Studies Paper I

99. Which of the following statements are correct?

1. Suez canal is an important link between developed countries and developing countries
2. It joins the mediterranean sea with the Gulf of Suez
3. It is not a sea level canal

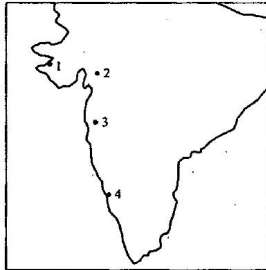
(a) 1 and 2

(b) 1 and 3

(c) 2 and 3

(d) 1 only

100.



In the map given above four petrochemical centres are marked with numbers. Match them with the following four places

- A. Koyali
- B. Trombay
- C. Jamnagar
- D. Mangalore

(a) A-2, B-3, C-1, D-4

(b) A-2, B-1, C-3, D-4

(c) A-4, B-2, C-3, D-1

(d) A-4, B-3, C-2, D-1

Model Test Paper 34
General Studies Paper I

Answer Sheet

A	B	C	D		A	B	C	D		A	B	C	D		A	B	C	D		A	B	C	D				
1	<input type="radio"/>	<input type="radio"/>	<input type="radio"/>	<input type="radio"/>	21	<input type="radio"/>	<input type="radio"/>	<input type="radio"/>	<input type="radio"/>	41	<input type="radio"/>	<input type="radio"/>	<input type="radio"/>	<input type="radio"/>	61	<input type="radio"/>	<input type="radio"/>	<input type="radio"/>	<input type="radio"/>	81	<input type="radio"/>	<input type="radio"/>	<input type="radio"/>	<input type="radio"/>			
2	<input type="radio"/>	<input type="radio"/>	<input type="radio"/>	<input type="radio"/>	22	<input type="radio"/>	<input type="radio"/>	<input type="radio"/>	<input type="radio"/>	42	<input type="radio"/>	<input type="radio"/>	<input type="radio"/>	<input type="radio"/>	62	<input type="radio"/>	<input type="radio"/>	<input type="radio"/>	<input type="radio"/>	82	<input type="radio"/>	<input type="radio"/>	<input type="radio"/>	<input type="radio"/>			
3	<input type="radio"/>	<input type="radio"/>	<input type="radio"/>	<input type="radio"/>	23	<input type="radio"/>	<input type="radio"/>	<input type="radio"/>	<input type="radio"/>	43	<input type="radio"/>	<input type="radio"/>	<input type="radio"/>	<input type="radio"/>	63	<input type="radio"/>	<input type="radio"/>	<input type="radio"/>	<input type="radio"/>	83	<input type="radio"/>	<input type="radio"/>	<input type="radio"/>	<input type="radio"/>			
4	<input type="radio"/>	<input type="radio"/>	<input type="radio"/>	<input type="radio"/>	24	<input type="radio"/>	<input type="radio"/>	<input type="radio"/>	<input type="radio"/>	44	<input type="radio"/>	<input type="radio"/>	<input type="radio"/>	<input type="radio"/>	64	<input type="radio"/>	<input type="radio"/>	<input type="radio"/>	<input type="radio"/>	84	<input type="radio"/>	<input type="radio"/>	<input type="radio"/>	<input type="radio"/>			
5	<input type="radio"/>	<input type="radio"/>	<input type="radio"/>	<input type="radio"/>	25	<input type="radio"/>	<input type="radio"/>	<input type="radio"/>	<input type="radio"/>	45	<input type="radio"/>	<input type="radio"/>	<input type="radio"/>	<input type="radio"/>	65	<input type="radio"/>	<input type="radio"/>	<input type="radio"/>	<input type="radio"/>	85	<input type="radio"/>	<input type="radio"/>	<input type="radio"/>	<input type="radio"/>			
6	<input type="radio"/>	<input type="radio"/>	<input type="radio"/>	<input type="radio"/>	26	<input type="radio"/>	<input type="radio"/>	<input type="radio"/>	<input type="radio"/>	46	<input type="radio"/>	<input type="radio"/>	<input type="radio"/>	<input type="radio"/>	66	<input type="radio"/>	<input type="radio"/>	<input type="radio"/>	<input type="radio"/>	86	<input type="radio"/>	<input type="radio"/>	<input type="radio"/>	<input type="radio"/>			
7	<input type="radio"/>	<input type="radio"/>	<input type="radio"/>	<input type="radio"/>	27	<input type="radio"/>	<input type="radio"/>	<input type="radio"/>	<input type="radio"/>	47	<input type="radio"/>	<input type="radio"/>	<input type="radio"/>	<input type="radio"/>	67	<input type="radio"/>	<input type="radio"/>	<input type="radio"/>	<input type="radio"/>	87	<input type="radio"/>	<input type="radio"/>	<input type="radio"/>	<input type="radio"/>			
8	<input type="radio"/>	<input type="radio"/>	<input type="radio"/>	<input type="radio"/>	28	<input type="radio"/>	<input type="radio"/>	<input type="radio"/>	<input type="radio"/>	48	<input type="radio"/>	<input type="radio"/>	<input type="radio"/>	<input type="radio"/>	68	<input type="radio"/>	<input type="radio"/>	<input type="radio"/>	<input type="radio"/>	88	<input type="radio"/>	<input type="radio"/>	<input type="radio"/>	<input type="radio"/>			
9	<input type="radio"/>	<input type="radio"/>	<input type="radio"/>	<input type="radio"/>	29	<input type="radio"/>	<input type="radio"/>	<input type="radio"/>	<input type="radio"/>	49	<input type="radio"/>	<input type="radio"/>	<input type="radio"/>	<input type="radio"/>	69	<input type="radio"/>	<input type="radio"/>	<input type="radio"/>	<input type="radio"/>	89	<input type="radio"/>	<input type="radio"/>	<input type="radio"/>	<input type="radio"/>			
10	<input type="radio"/>	<input type="radio"/>	<input type="radio"/>	<input type="radio"/>	30	<input type="radio"/>	<input type="radio"/>	<input type="radio"/>	<input type="radio"/>	50	<input type="radio"/>	<input type="radio"/>	<input type="radio"/>	<input type="radio"/>	70	<input type="radio"/>	<input type="radio"/>	<input type="radio"/>	<input type="radio"/>	90	<input type="radio"/>	<input type="radio"/>	<input type="radio"/>	<input type="radio"/>			
11	<input type="radio"/>	<input type="radio"/>	<input type="radio"/>	<input type="radio"/>	31	<input type="radio"/>	<input type="radio"/>	<input type="radio"/>	<input type="radio"/>	51	<input type="radio"/>	<input type="radio"/>	<input type="radio"/>	<input type="radio"/>	71	<input type="radio"/>	<input type="radio"/>	<input type="radio"/>	<input type="radio"/>	91	<input type="radio"/>	<input type="radio"/>	<input type="radio"/>	<input type="radio"/>			
12	<input type="radio"/>	<input type="radio"/>	<input type="radio"/>	<input type="radio"/>	32	<input type="radio"/>	<input type="radio"/>	<input type="radio"/>	<input type="radio"/>	52	<input type="radio"/>	<input type="radio"/>	<input type="radio"/>	<input type="radio"/>	72	<input type="radio"/>	<input type="radio"/>	<input type="radio"/>	<input type="radio"/>	92	<input type="radio"/>	<input type="radio"/>	<input type="radio"/>	<input type="radio"/>			
13	<input type="radio"/>	<input type="radio"/>	<input type="radio"/>	<input type="radio"/>	33	<input type="radio"/>	<input type="radio"/>	<input type="radio"/>	<input type="radio"/>	53	<input type="radio"/>	<input type="radio"/>	<input type="radio"/>	<input type="radio"/>	73	<input type="radio"/>	<input type="radio"/>	<input type="radio"/>	<input type="radio"/>	93	<input type="radio"/>	<input type="radio"/>	<input type="radio"/>	<input type="radio"/>			
14	<input type="radio"/>	<input type="radio"/>	<input type="radio"/>	<input type="radio"/>	34	<input type="radio"/>	<input type="radio"/>	<input type="radio"/>	<input type="radio"/>	54	<input type="radio"/>	<input type="radio"/>	<input type="radio"/>	<input type="radio"/>	74	<input type="radio"/>	<input type="radio"/>	<input type="radio"/>	<input type="radio"/>	94	<input type="radio"/>	<input type="radio"/>	<input type="radio"/>	<input type="radio"/>			
15	<input type="radio"/>	<input type="radio"/>	<input type="radio"/>	<input type="radio"/>	35	<input type="radio"/>	<input type="radio"/>	<input type="radio"/>	<input type="radio"/>	55	<input type="radio"/>	<input type="radio"/>	<input type="radio"/>	<input type="radio"/>	75	<input type="radio"/>	<input type="radio"/>	<input type="radio"/>	<input type="radio"/>	95	<input type="radio"/>	<input type="radio"/>	<input type="radio"/>	<input type="radio"/>			
16	<input type="radio"/>	<input type="radio"/>	<input type="radio"/>	<input type="radio"/>	36	<input type="radio"/>	<input type="radio"/>	<input type="radio"/>	<input type="radio"/>	56	<input type="radio"/>	<input type="radio"/>	<input type="radio"/>	<input type="radio"/>	76	<input type="radio"/>	<input type="radio"/>	<input type="radio"/>	<input type="radio"/>	96	<input type="radio"/>	<input type="radio"/>	<input type="radio"/>	<input type="radio"/>			
17	<input type="radio"/>	<input type="radio"/>	<input type="radio"/>	<input type="radio"/>	37	<input type="radio"/>	<input type="radio"/>	<input type="radio"/>	<input type="radio"/>	57	<input type="radio"/>	<input type="radio"/>	<input type="radio"/>	<input type="radio"/>	77	<input type="radio"/>	<input type="radio"/>	<input type="radio"/>	<input type="radio"/>	97	<input type="radio"/>	<input type="radio"/>	<input type="radio"/>	<input type="radio"/>			
18	<input type="radio"/>	<input type="radio"/>	<input type="radio"/>	<input type="radio"/>	38	<input type="radio"/>	<input type="radio"/>	<input type="radio"/>	<input type="radio"/>	58	<input type="radio"/>	<input type="radio"/>	<input type="radio"/>	<input type="radio"/>	78	<input type="radio"/>	<input type="radio"/>	<input type="radio"/>	<input type="radio"/>	98	<input type="radio"/>	<input type="radio"/>	<input type="radio"/>	<input type="radio"/>			
19	<input type="radio"/>	<input type="radio"/>	<input type="radio"/>	<input type="radio"/>	39	<input type="radio"/>	<input type="radio"/>	<input type="radio"/>	<input type="radio"/>	59	<input type="radio"/>	<input type="radio"/>	<input type="radio"/>	<input type="radio"/>	79	<input type="radio"/>	<input type="radio"/>	<input type="radio"/>	<input type="radio"/>	99	<input type="radio"/>	<input type="radio"/>	<input type="radio"/>	<input type="radio"/>			
20	<input type="radio"/>	<input type="radio"/>	<input type="radio"/>	<input type="radio"/>	40	<input type="radio"/>	<input type="radio"/>	<input type="radio"/>	<input type="radio"/>	60	<input type="radio"/>	<input type="radio"/>	<input type="radio"/>	<input type="radio"/>	80	<input type="radio"/>	<input type="radio"/>	<input type="radio"/>	<input type="radio"/>	100	<input type="radio"/>	<input type="radio"/>	<input type="radio"/>	<input type="radio"/>			